

Please write clearly in block capitals.

Centre number

--	--	--	--	--

Candidate number

--	--	--	--

Surname

Forename(s)

Candidate signature

I declare this is my own work.

A-level FURTHER MATHEMATICS

Paper 1

Time allowed: 2 hours

Materials

- You must have the AQA Formulae and statistical tables booklet for A-level Mathematics and A-level Further Mathematics.
- You should have a scientific calculator that meets the requirements of the specification.

Instructions

- Use black ink or black ball-point pen. Pencil should only be used for drawing.
- Fill in the boxes at the top of this page.
- Answer **all** questions.
- You must answer each question in the space provided for that question. If you require extra space for your answer(s), use the lined pages at the end of this book. Write the question number against your answer(s).
- Do **not** write outside the box around each page or on blank pages.
- Show all necessary working; otherwise marks for method may be lost.
- Do all rough work in this book. Cross through any work that you do not want to be marked.

Information

- The marks for questions are shown in brackets.
- The maximum mark for this paper is 100.

Advice

- Unless stated otherwise, you may quote formulae, without proof, from the booklet.
- You do not necessarily need to use all the space provided.

For Examiner's Use	
Question	Mark
1	
2	
3	
4	
5	
6	
7	
8	
9	
10	
11	
12	
TOTAL	



Answer **all** questions in the spaces provided.

- 1** The displacement of a particle from its equilibrium position is x metres at time t seconds.

The motion of the particle obeys the differential equation

$$\frac{d^2x}{dt^2} = -9x$$

Calculate the period of its motion in seconds.

Circle your answer.

[1 mark]

$$\frac{\pi}{9}$$

$$\frac{2\pi}{9}$$

$$\frac{\pi}{3}$$

$$\frac{2\pi}{3}$$



2 Simplify

$$\frac{\cos\left(\frac{6\pi}{13}\right) + i \sin\left(\frac{6\pi}{13}\right)}{\cos\left(\frac{2\pi}{13}\right) - i \sin\left(\frac{2\pi}{13}\right)}$$

Tick (✓) **one** box.**[1 mark]**

$$\cos\left(\frac{8\pi}{13}\right) + i \sin\left(\frac{8\pi}{13}\right) \quad \square$$

$$\cos\left(\frac{8\pi}{13}\right) - i \sin\left(\frac{8\pi}{13}\right) \quad \square$$

$$\cos\left(\frac{4\pi}{13}\right) + i \sin\left(\frac{4\pi}{13}\right) \quad \square$$

$$\cos\left(\frac{4\pi}{13}\right) - i \sin\left(\frac{4\pi}{13}\right) \quad \square$$

Turn over for the next question**Turn over ►**

3 Given that $y = \operatorname{sech} x$, find $\frac{dy}{dx}$

Tick (✓) **one** box.

[1 mark]

$\operatorname{sech} x \tanh x$

$-\operatorname{sech} x \tanh x$

$\operatorname{cosech} x \coth x$

$-\operatorname{cosech} x \coth x$

4 The vector \mathbf{v} is an eigenvector of the matrix \mathbf{N} with corresponding eigenvalue 4

The vector \mathbf{v} is also an eigenvector of the matrix \mathbf{M} with corresponding eigenvalue 3

Given that

$$\mathbf{NM}^2\mathbf{v} = \lambda\mathbf{v}$$

find the value of λ

Circle your answer.

[1 mark]

10

24

36

144



8 (a) The complex number w is such that

$$\arg(w + 2i) = \tan^{-1} \frac{1}{2}$$

It is given that $w = x + iy$, where x and y are real and $x > 0$

Find an equation for y in terms of x

[2 marks]

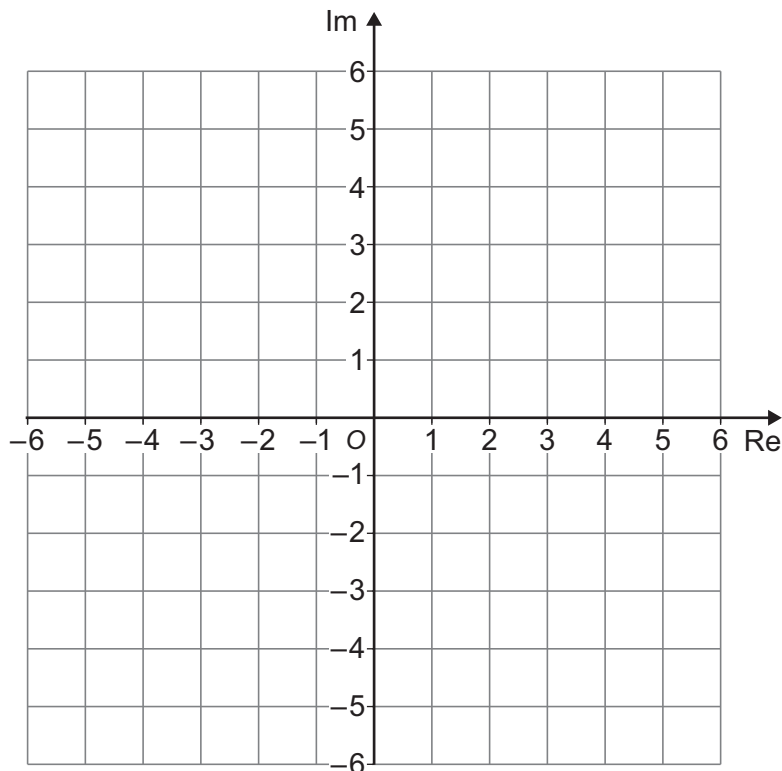
8 (b) The complex number z satisfies both

$$-\frac{\pi}{2} \leq \arg(z + 2i) \leq \tan^{-1} \frac{1}{2} \quad \text{and} \quad |z - 2 + 3i| \leq 2$$

The region R is the locus of z

Sketch the region R on the Argand diagram below.

[4 marks]



9 Roberto is solving this mathematics problem:

The curve C_1 has polar equation

$$r^2 = 9 \sin 2\theta$$

for all possible values of θ

Find the area enclosed by C_1

Roberto's solution is as follows:

$$\begin{aligned} A &= \frac{1}{2} \int_{-\pi}^{\pi} 9 \sin 2\theta \, d\theta \\ &= \left[-\frac{9}{4} \cos 2\theta \right]_{-\pi}^{\pi} \\ &= 0 \end{aligned}$$

9 (a) Sketch the curve C_1

[2 marks]

O  Initial line



9 (b) Explain what Roberto has done wrong.

[2 marks]

9 (c) Find the area enclosed by C_1

[2 marks]

9 (d) P and Q are distinct points on C_1 for which r is a maximum.
 P is above the initial line.

Find the polar coordinates of P and Q

[2 marks]

Turn over ►



9 (e) (ii) Find the area enclosed by C_2

Fully justify your answer.

[2 marks]

Turn over for the next question

Turn over ►



10 (b) A second large sheet of glass lies on the other side of Π_1

This second sheet lies within a plane Π_2 which is modelled by the equation

$$4x + py + 5z = -5$$

Calculate the distance between the sheets of glass.

[2 marks]

10 (c) The point $A(7, 2, -3)$ is reflected in Π_1

Find the coordinates of the image of A after reflection in Π_1

[4 marks]

Turn over ►

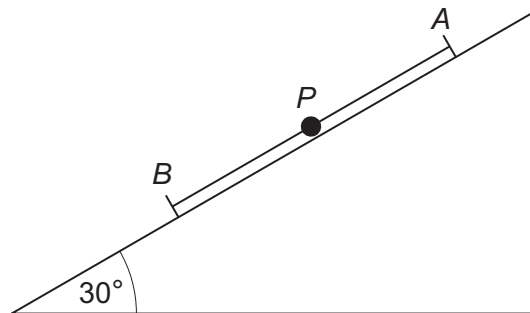


11 In this question use g as 10 m s^{-2}

A smooth plane is inclined at 30° to the horizontal.
The fixed points A and B are 3.6 metres apart on the line of greatest slope of the plane, with A higher than B

A particle P of mass 0.32 kg is attached to one end of each of two light elastic strings.
The other ends of these strings are attached to the points A and B respectively.

The particle P moves on a straight line that passes through A and B



The natural length of the string AP is 1.4 metres.
When the extension of the string AP is e_A metres, the tension in the string AP is $7e_A$ newtons.
The natural length of the string BP is 1 metre.
When the extension of the string BP is e_B metres, the tension in the string BP is $9e_B$ newtons.

The particle P is held at the point between A and B which is 0.2 metres from its equilibrium position and lower than its equilibrium position.
The particle P is then released from rest.

At time t seconds after P is released, its displacement towards B from its equilibrium position is x metres.

11 (a) Show that during the subsequent motion the object satisfies the equation

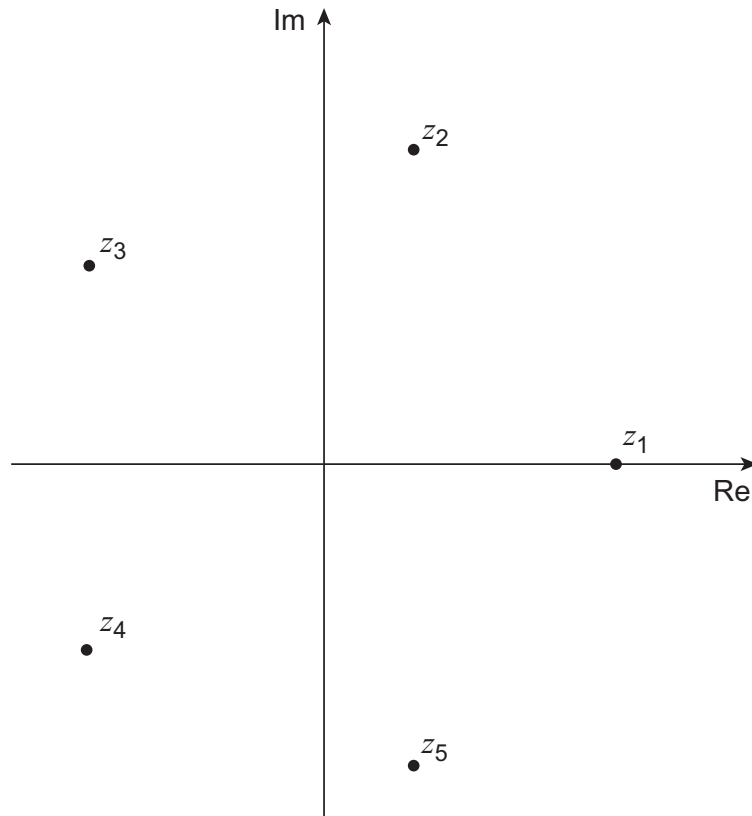
$$\ddot{x} + 50x = 0$$

Fully justify your answer.

[5 marks]



12

The Argand diagram shows the solutions to the equation $z^5 = 1$ 

12 (a)

Solve the equation

$$z^5 = 1$$

giving your answers in the form $z = \cos \theta + i \sin \theta$, where $0 \leq \theta < 2\pi$ **[2 marks]**

12 (b)

Explain why the points on an Argand diagram which represent the solutions found in part (a) are the vertices of a regular pentagon.

[2 marks]



There are no questions printed on this page

*Do not write
outside the
box*

**DO NOT WRITE ON THIS PAGE
ANSWER IN THE SPACES PROVIDED**



