

Please check the examination details below before entering your candidate information

Candidate surname

Other names

**Pearson Edexcel**  
**Level 1/Level 2 GCSE (9–1)**

Centre Number

--	--	--	--	--

Candidate Number

--	--	--	--

**Time** 1 hour 45 minutes

**Paper  
reference**

**1CH0/2H**

**Chemistry**  
**PAPER 2**  
**Higher Tier**

**You must have:**  
Calculator, ruler

Total Marks

### Instructions

- Use **black** ink or ball-point pen.
- **Fill in the boxes** at the top of this page with your name, centre number and candidate number.
- Answer **all** questions.
- Answer the questions in the spaces provided – *there may be more space than you need.*
- Calculators may be used.
- Any diagrams may NOT be accurately drawn, unless otherwise indicated.
- You must **show all your working out** with **your answer clearly identified** at the **end of your solution**.

### Information

- The total mark for this paper is 100.
- The marks for **each** question are shown in brackets – *use this as a guide as to how much time to spend on each question.*
- In questions marked with an **asterisk** (\*), marks will be awarded for your ability to structure your answer logically showing how the points that you make are related or follow on from each other where appropriate.
- There is a periodic table on the back cover of the paper.

### Advice

- Read each question carefully before you start to answer it.
- Try to answer every question.
- Check your answers if you have time at the end.
- Good luck with your examination.

Turn over ►

P67070A

©2021 Pearson Education Ltd.

1/1/1/1/1/1/1/



  
Pearson

Answer ALL questions. Write your answers in the spaces provided.

Some questions must be answered with a cross in a box .  
If you change your mind about an answer, put a line through the box  and then  
mark your new answer with a cross .

1 (a) Figure 1 shows a list of particles.

ethene molecule  
nanoparticle  
sodium atom  
starch molecule

**Figure 1**

In the spaces below, write the names of these particles in order of increasing  
particle size.

(2)

smallest particle .....

.....

.....

largest particle .....

(b) Explain a possible risk associated with nanoparticulate materials.

(2)

.....  
.....  
.....  
.....

(c) Explain the advantage of using catalysts made of nanoparticles rather than  
larger particles.

(2)

.....  
.....  
.....  
.....

**(Total for Question 1 = 6 marks)**



DO NOT WRITE IN THIS AREA

DO NOT WRITE IN THIS AREA

DO NOT WRITE IN THIS AREA

**BLANK PAGE**



- 2 (a) The concentration of a solution can be calculated using the equation

$$\text{concentration of solution} = \frac{\text{mass of solid}}{\text{volume of solution}}$$

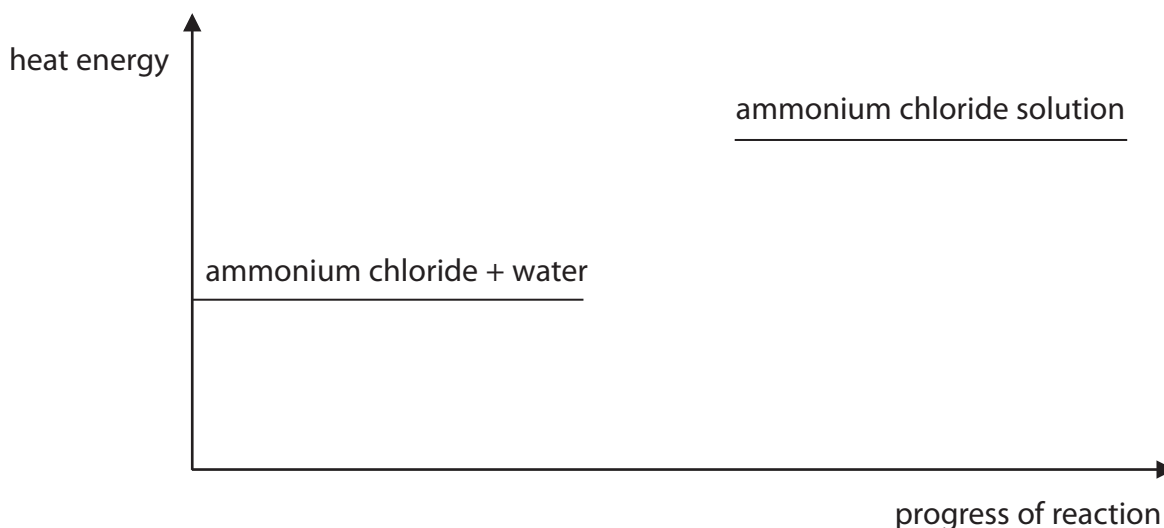
A student dissolved 9.25 g of ammonium chloride in water and made up the solution to a volume of 200 cm<sup>3</sup>.

Use the equation to calculate the concentration of this solution in g dm<sup>-3</sup>.

(2)

concentration = ..... g dm<sup>-3</sup>

- (b) Dissolving ammonium chloride in water is an endothermic process. Figure 2 shows part of the reaction profile for this process.



**Figure 2**

- (i) Explain how Figure 2 shows that dissolving ammonium chloride in water is an endothermic process.

(2)



(ii) Complete the reaction profile in Figure 2 and label the activation energy. (2)

(c) A student used the equipment in Figure 3 to investigate whether electricity can pass through solid ammonium chloride and through ammonium chloride solution.

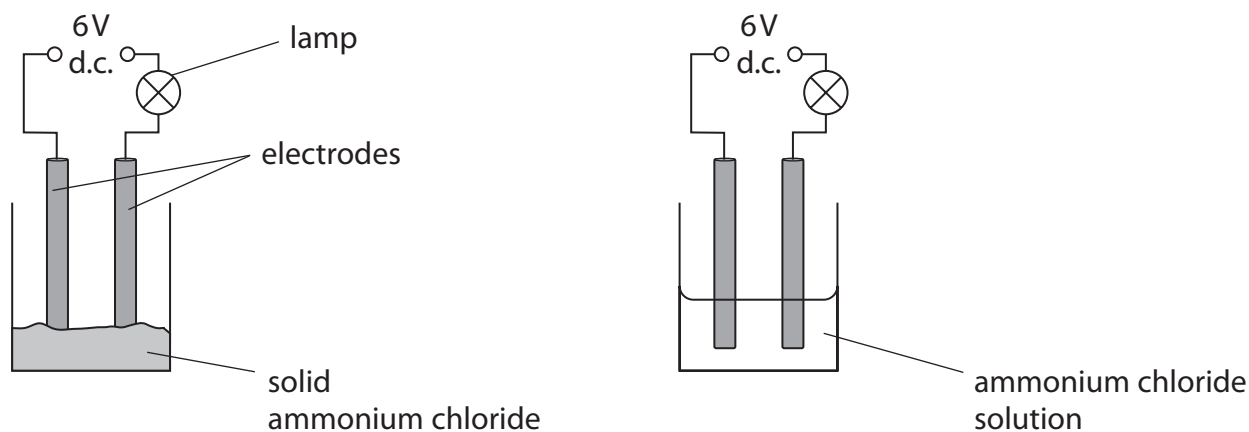


Figure 3

If an electrical current flows in the circuit, the lamp will light up.

Figure 4 shows the results of the investigation.

substance	lamp
solid ammonium chloride	did not light up
ammonium chloride solution	lit up brightly

Figure 4

Explain the results of the investigation. (3)

.....

.....

.....

.....

.....

.....

.....

(Total for Question 2 = 9 marks)



3 Diesel oil is a mixture of hydrocarbons that can be obtained from crude oil.

(a) State the name of the process used to separate diesel oil from crude oil.

(1)

(b) Diesel oil contains alkanes.

These alkanes are part of an homologous series.

Which statement about compounds in this homologous series is true?

(1)

- A they have the same chemical formula
- B they have the same empirical formula
- C they have the same general formula
- D they have the same molecular formula

(c) When fuels such as diesel oil are burned, the high temperatures produced can cause nitrogen and oxygen in the air to form the pollutant nitrogen dioxide.

Complete the balanced equation for the reaction.

(2)



(d) Explain how the greenhouse effect is caused by the gases produced by the complete combustion of diesel oil.

(3)

**(Total for Question 3 = 7 marks)**



DO NOT WRITE IN THIS AREA

DO NOT WRITE IN THIS AREA

DO NOT WRITE IN THIS AREA

**BLANK PAGE**



4 This question is about polymers.

(a) (i) State a problem with **recycling** polymers.

(1)

(ii) Describe a problem associated with the **disposal** of polymers.

(2)

(b) Poly(chloroethene) is a polymer made from chloroethene.  
A molecule of chloroethene is shown in Figure 5.

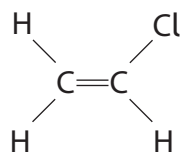


Figure 5

(i) On Figure 5, draw a circle around the functional group in this molecule.

(1)

(ii) Draw a section of a poly(chloroethene) molecule containing three repeating units, showing all bonds.

(3)





(iii) What type of polymer is poly(chloroethene)?

(1)

(iv) Calculate the relative formula mass of a poly(chloroethene) molecule made from 2850 chloroethene molecules,  $C_2H_3Cl$ .

(relative atomic masses: H = 1.00, C = 12.0, Cl = 35.5)

Give your answer to three significant figures.

Show your working.

(3)

relative formula mass = .....

**(Total for Question 4 = 11 marks)**

DO NOT WRITE IN THIS AREA

DO NOT WRITE IN THIS AREA

DO NOT WRITE IN THIS AREA



5 This question is about potassium and zinc.

(a) Which of the following temperatures is most likely to be the melting point of potassium? (1)

- A  $-63^{\circ}\text{C}$
- B  $6.3^{\circ}\text{C}$
- C  $63^{\circ}\text{C}$
- D  $630^{\circ}\text{C}$

(b) Explain how the electronic configuration of an atom of potassium is related to its position in the periodic table. (2)

.....

.....

.....

.....

(c) Potassium reacts with oxygen to form potassium oxide.

(i) Describe the test to show that a gas is oxygen. (2)

.....

.....

.....

.....

(ii) Potassium oxide is ionic.

Write the electronic configurations for the ions in potassium oxide,  $\text{K}_2\text{O}$ . (2)

potassium ion: .....

oxide ion: .....



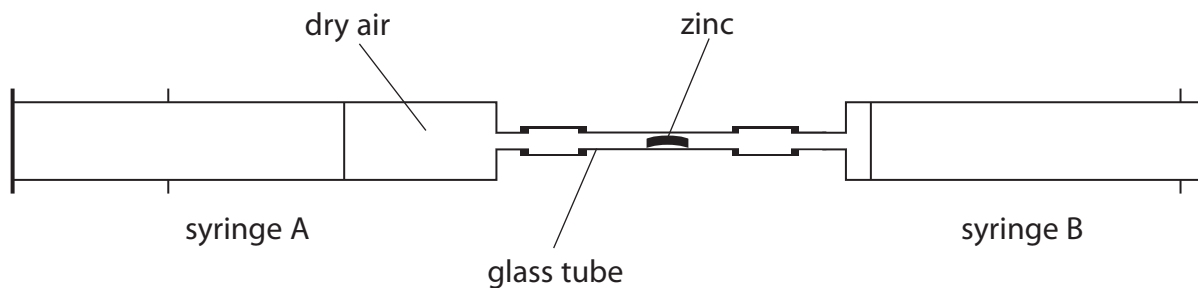
DO NOT WRITE IN THIS AREA

DO NOT WRITE IN THIS AREA

DO NOT WRITE IN THIS AREA

(d) Figure 6 shows two gas syringes connected by a glass tube.

Inside the glass tube there are some pieces of zinc.  
Zinc reacts with oxygen at a temperature of over 225 °C.  
Not all the oxygen reacts at once, the oxygen reacts only when in contact with the zinc.



**Figure 6**

Devise a plan to find the volume of oxygen contained in a known volume of air, using the apparatus shown in Figure 6.

(4)

.....

.....

.....

.....

.....

.....

.....

.....

.....

.....

**(Total for Question 5 = 11 marks)**



- 6 This question is about the rate of reaction between calcium carbonate and dilute hydrochloric acid.

The word equation for this reaction is



- (a) Which of the following is the formula for calcium carbonate?

(1)

- A  $\text{CaCO}_2$
- B  $\text{CaCO}_3$
- C  $\text{Ca}(\text{CO})_3$
- D  $\text{Ca}(\text{CO}_3)_2$

- (b) Some pieces of calcium carbonate were added to dilute hydrochloric acid in a conical flask and the volume of carbon dioxide produced was measured.

Complete the diagram in Figure 7 to show the apparatus to collect the gas produced and measure its volume.

(2)

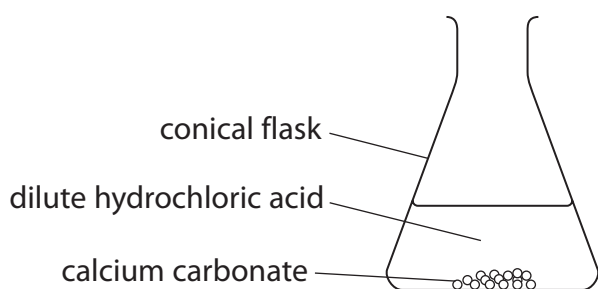


Figure 7

- (c) The reaction between calcium carbonate and dilute hydrochloric acid was investigated at different temperatures.

- (i) State what could be used to keep the temperature of the conical flask and its contents at a temperature of  $45^\circ\text{C}$  throughout the reaction.

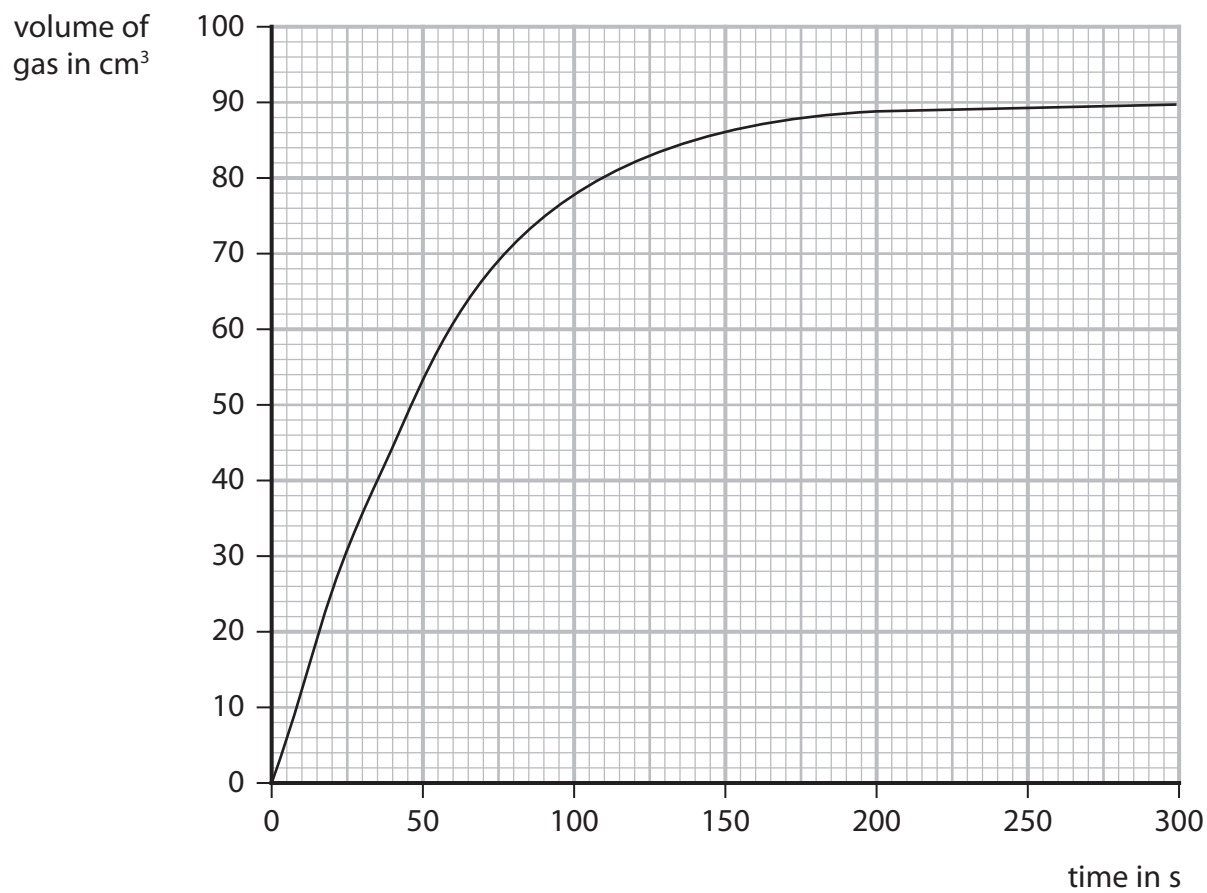
(1)

.....

.....



(ii) Figure 8 shows a graph of volume of gas collected in this investigation.



**Figure 8**

Draw a tangent at 100 seconds on Figure 8.  
Use this tangent to calculate the rate of reaction at this time.

(2)

rate of reaction = .....  $\text{cm}^3 \text{s}^{-1}$



(iii) The temperature of the acid was kept at 45 °C.

State **one** other variable that needs to be controlled during this investigation.

(1)

(iv) Explain, in terms of particles, how decreasing the temperature affects the rate of this reaction.

(3)

**(Total for Question 6 = 10 marks)**

DO NOT WRITE IN THIS AREA

DO NOT WRITE IN THIS AREA

DO NOT WRITE IN THIS AREA



- 7 (a) A technician was asked to find the concentration of potassium ions in a dilute solution using a flame photometer.
- (i) The technician first produced a calibration curve using solutions with known concentrations of potassium ions.  
Figure 9 contains the data for the calibration curve.


concentration of potassium ions in mol dm <sup>-3</sup>	display reading
0.025	180
0.050	280
0.100	440
0.200	580
0.500	900

**Figure 9**

Use the information in Figure 9 to plot the calibration curve on the grid below.

(3)

display reading



concentration of potassium ions  
in mol dm<sup>-3</sup>



(ii) The technician then obtained a reading of 360 for a dilute solution containing potassium ions.

Use the calibration curve to find the concentration of the potassium ions in this solution.

(1)

concentration = ..... mol dm<sup>-3</sup>

(b) In the test for chloride ions, silver nitrate solution is added to a solution containing chloride ions.  
A white precipitate forms.

Write the ionic equation for this reaction.

(2)

.....  
\* (c) A student was given a container of ammonium iron(II) sulfate, (NH<sub>4</sub>)<sub>2</sub>Fe(SO<sub>4</sub>)<sub>2</sub>.  
The student was also given a dilute solution of sodium hydroxide and access to other laboratory reagents.

Describe the tests the student should carry out to identify the ions in the ammonium iron(II) sulfate, including appropriate equations for the reactions involved.

(6)

DO NOT WRITE IN THIS AREA

DO NOT WRITE IN THIS AREA

DO NOT WRITE IN THIS AREA





DO NOT WRITE IN THIS AREA

DO NOT WRITE IN THIS AREA

DO NOT WRITE IN THIS AREA

(Total for Question 7 = 12 marks)



DO NOT WRITE IN THIS AREA

DO NOT WRITE IN THIS AREA

DO NOT WRITE IN THIS AREA

**BLANK PAGE**



8 This question is about some of the elements in group 7 of the periodic table.

- (a) Which row in the table correctly shows the colours and physical states of the elements at room temperature?

(1)

<input type="checkbox"/> <b>A</b>	iodine: purple gas	bromine: yellow liquid
<input type="checkbox"/> <b>B</b>	chlorine: pale green gas	iodine: brown solid
<input type="checkbox"/> <b>C</b>	bromine: red-brown liquid	chlorine: yellow liquid
<input type="checkbox"/> <b>D</b>	iodine: dark grey solid	bromine: red-brown liquid

- (b) The compound phosphorus oxychloride has the formula  $\text{POCl}_3$ .

Calculate the percentage by mass of chlorine in phosphorus oxychloride.

(relative atomic masses: O = 16.0, P = 31.0, Cl = 35.5)

(2)

percentage by mass of chlorine = .....

- (c) When iron reacts with chlorine, iron chloride is formed.

Two possible equations for this reaction are



In an experiment, 8.40 g iron reacts with chlorine to form 19.05 g iron chloride.

Show, using a calculation, which reaction, **A** or **B**, is taking place.

You must show your working.

(relative atomic masses: Cl = 35.5, Fe = 56.0)

(3)



\*(d) Group 1 metals react with the elements from group 7 to form salts.

Some examples of these reactions are shown in Figure 10.

reaction	word equation
W	lithium + chlorine → lithium chloride
X	potassium + fluorine → potassium fluoride
Y	rubidium + iodine → rubidium iodide
Z	potassium + bromine → potassium bromide

Figure 10

You will find the position of these elements in their groups on the periodic table.

Explain, in terms of their electronic configurations and the relative reactivity of these elements, which of the reactions shown in Figure 10 would be the most violent.

(6)

.....

.....

.....

.....

.....

.....

.....

.....

.....

.....

.....

.....

.....

.....

.....

.....

.....

.....

.....

.....

.....

.....

.....

DO NOT WRITE IN THIS AREA

DO NOT WRITE IN THIS AREA

DO NOT WRITE IN THIS AREA



DO NOT WRITE IN THIS AREA

DO NOT WRITE IN THIS AREA

DO NOT WRITE IN THIS AREA

Handwriting practice area with 20 sets of horizontal lines. Each set consists of a solid top line, a dashed middle line, and a solid bottom line.

**(Total for Question 8 = 12 marks)**



P 6 7 0 7 0 A 0 2 1 3 2

- 9 Pentadecane,  $C_{15}H_{32}$ , is a hydrocarbon and is used as a fuel.
- (a) The incomplete combustion of pentadecane produces carbon monoxide. Carbon monoxide is a toxic gas.
- (i) Explain why the incomplete combustion of pentadecane can produce carbon monoxide as one of the products.

(2)

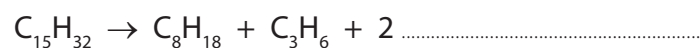
- (ii) Explain how carbon monoxide behaves as a toxic gas.

(2)

- (b) 1 mole of pentadecane can be cracked to form 1 mole of octane,  $C_8H_{18}$ , and 1 mole of propene,  $C_3H_6$ , and 2 moles of another product.

Complete the balanced equation for this reaction by adding the formula of the missing product.

(1)



(c) Figure 11 shows the reaction of propene, C<sub>3</sub>H<sub>6</sub>, with water.

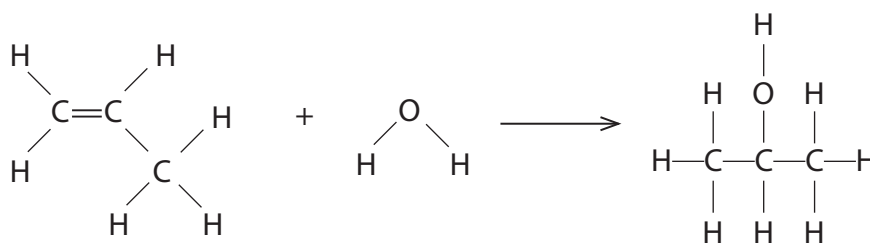


Figure 11

Figure 12 shows some bond energies.

bond	bond energy in kJ mol <sup>-1</sup>
C—C	347
C—O	358
C—H	413
O—H	464
C=C	612

Figure 12

Use the bond energies in Figure 12 to calculate the energy change of the reaction in Figure 11.

(4)

.....

.....

.....

.....

.....

.....

.....

energy change of reaction = ..... kJ mol<sup>-1</sup>

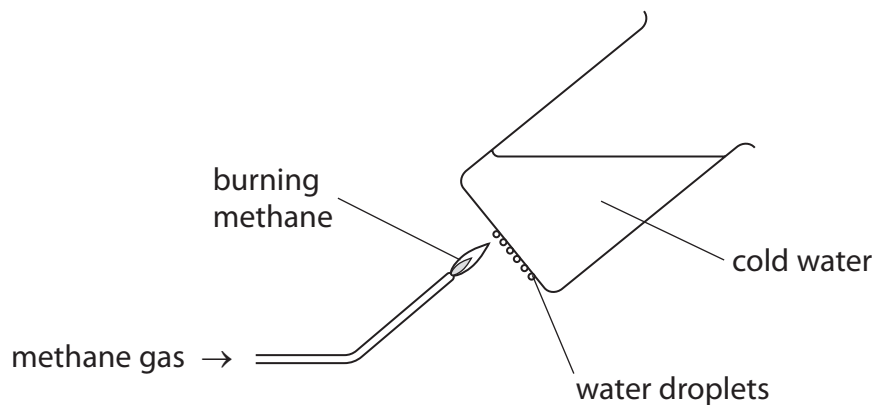
DO NOT WRITE IN THIS AREA

DO NOT WRITE IN THIS AREA

DO NOT WRITE IN THIS AREA



(d) Methane gas,  $\text{CH}_4$ , was burned using the apparatus shown in Figure 13.



**Figure 13**

Explain why water droplets form on the bottom of the beaker of cold water.

(2)

.....

.....

.....

.....

**(Total for Question 9 = 11 marks)**





DO NOT WRITE IN THIS AREA

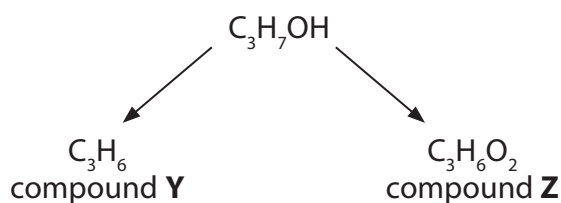
DO NOT WRITE IN THIS AREA

DO NOT WRITE IN THIS AREA

**BLANK PAGE**



- 10 (a) Propanol,  $C_3H_7OH$ , can undergo reactions to form compounds **Y** and **Z** shown in Figure 14.



**Figure 14**

- (i) What happens to propanol when it forms compound **Y**?

(1)

- A** propanol undergoes an addition reaction
- B** propanol is dehydrated
- C** propanol is hydrated
- D** propanol is oxidised

- (ii) Compound **Y** can also be formed in the following reaction



Explain how bromine water can be used to distinguish between compound **X** and compound **Y**.

(3)

.....

.....

.....

.....

.....

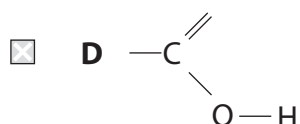
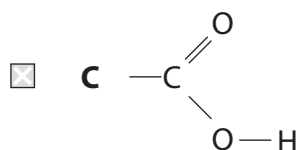
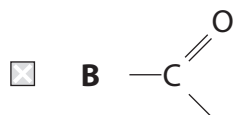
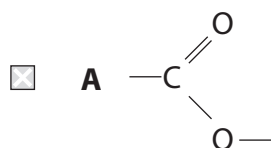
.....



(iii) Compound **Z** is a carboxylic acid.

Which of the following shows the functional group of a carboxylic acid?

(1)



(iv) Compound **Z** is an acid and turns litmus and universal indicator papers red. Compound **Z** also shows other acidic properties.

Devise an experiment that would show another acidic property of compound **Z**.

(2)

.....

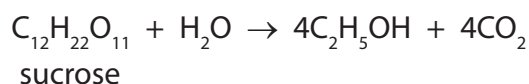
.....

.....

.....



- (b) The balanced equation for the production of ethanol from the carbohydrate sucrose is



Calculate the minimum mass of sucrose needed to produce 26.9 g of ethanol.

(relative formula masses:  $\text{C}_2\text{H}_5\text{OH} = 46$ ,  $\text{C}_{12}\text{H}_{22}\text{O}_{11} = 342$ )

(2)

minimum mass of sucrose = ..... g

- (c) Calculate the total number of atoms in 10.0 g of sucrose,  $\text{C}_{12}\text{H}_{22}\text{O}_{11}$ .

(relative formula mass:  $\text{C}_{12}\text{H}_{22}\text{O}_{11} = 342$ ; Avogadro constant =  $6.02 \times 10^{23}$ )

(2)

number of atoms = .....

**(Total for Question 10 = 11 marks)**

**TOTAL FOR PAPER = 100 MARKS**



DO NOT WRITE IN THIS AREA

DO NOT WRITE IN THIS AREA

DO NOT WRITE IN THIS AREA

**BLANK PAGE**



DO NOT WRITE IN THIS AREA

DO NOT WRITE IN THIS AREA

DO NOT WRITE IN THIS AREA

**BLANK PAGE**



DO NOT WRITE IN THIS AREA

DO NOT WRITE IN THIS AREA

DO NOT WRITE IN THIS AREA

**BLANK PAGE**



# The periodic table of the elements

1	2	3	4	5	6	7	0										
7 <b>Li</b> lithium 3	9 <b>Be</b> beryllium 4	11 <b>Na</b> sodium 11	12 <b>C</b> carbon 6	13 <b>Al</b> aluminium 13	14 <b>N</b> nitrogen 7	15 <b>P</b> phosphorus 15	16 <b>O</b> oxygen 8	17 <b>F</b> fluorine 9	18 <b>Ne</b> neon 10								
19 <b>K</b> potassium 19	20 <b>Ca</b> calcium 20	23 <b>Na</b> sodium 11	24 <b>Mg</b> magnesium 12	27 <b>Al</b> aluminium 13	28 <b>Si</b> silicon 14	31 <b>P</b> phosphorus 15	32 <b>S</b> sulfur 16	35.5 <b>Cl</b> chlorine 17	40 <b>Ar</b> argon 18								
39 <b>K</b> potassium 19	40 <b>Ca</b> calcium 20	45 <b>Sc</b> scandium 21	48 <b>Ti</b> titanium 22	51 <b>V</b> vanadium 23	52 <b>Cr</b> chromium 24	55 <b>Mn</b> manganese 25	56 <b>Fe</b> iron 26	59 <b>Co</b> cobalt 27	59 <b>Ni</b> nickel 28	63.5 <b>Cu</b> copper 29	65 <b>Zn</b> zinc 30	70 <b>Ga</b> gallium 31	73 <b>Ge</b> germanium 32	75 <b>As</b> arsenic 33	79 <b>Se</b> selenium 34	80 <b>Br</b> bromine 35	84 <b>Kr</b> krypton 36
85 <b>Rb</b> rubidium 37	88 <b>Sr</b> strontium 38	89 <b>Y</b> yttrium 39	91 <b>Zr</b> zirconium 40	93 <b>Nb</b> niobium 41	96 <b>Mo</b> molybdenum 42	[98] <b>Tc</b> technetium 43	101 <b>Ru</b> ruthenium 44	103 <b>Rh</b> rhodium 45	106 <b>Pd</b> palladium 46	108 <b>Ag</b> silver 47	112 <b>Cd</b> cadmium 48	115 <b>In</b> indium 49	119 <b>Sn</b> tin 50	122 <b>Sb</b> antimony 51	128 <b>Te</b> tellurium 52	127 <b>I</b> iodine 53	131 <b>Xe</b> xenon 54
133 <b>Cs</b> caesium 55	137 <b>Ba</b> barium 56	139 <b>La*</b> lanthanum 57	178 <b>Hf</b> hafnium 72	181 <b>Ta</b> tantalum 73	184 <b>W</b> tungsten 74	186 <b>Re</b> rhenium 75	190 <b>Os</b> osmium 76	192 <b>Ir</b> iridium 77	195 <b>Pt</b> platinum 78	197 <b>Au</b> gold 79	201 <b>Hg</b> mercury 80	204 <b>Tl</b> thallium 81	207 <b>Pb</b> lead 82	209 <b>Bi</b> bismuth 83	[209] <b>Po</b> polonium 84	[210] <b>At</b> astatine 85	[222] <b>Rn</b> radon 86

1	1
<b>H</b>	hydrogen

Key  
relative atomic mass  
atomic symbol  
name  
atomic (proton) number

\* The elements with atomic numbers from 58 to 71 are omitted from this part of the periodic table.

The relative atomic masses of copper and chlorine have not been rounded to the nearest whole number.



DO NOT WRITE IN THIS AREA

DO NOT WRITE IN THIS AREA

DO NOT WRITE IN THIS AREA