

2018 national curriculum tests

# Key stage 2

## Mathematics

### Paper 2: reasoning

|               |     |  |       |  |      |  |
|---------------|-----|--|-------|--|------|--|
| First name    |     |  |       |  |      |  |
| Middle name   |     |  |       |  |      |  |
| Last name     |     |  |       |  |      |  |
| Date of birth | Day |  | Month |  | Year |  |
| School name   |     |  |       |  |      |  |
| DfE number    |     |  |       |  |      |  |



**[BLANK PAGE]**

Please do not write on this page.



## Instructions

You **must not** use a calculator to answer any questions in this test.

### Questions and answers

You have **40 minutes** to complete this test.

Follow the instructions for each question.

Work as quickly and as carefully as you can.

If you need to do working out, you can use the space around the question.

Do not write over any barcodes.

**Some questions have a method box like this:**

Show  
your  
method



For these questions, you may get a mark for showing your method.

If you cannot do a question, **go on to the next one**.

You can come back to it later, if you have time.

If you finish before the end, **go back and check your work**.

### Marks

The number under each line at the side of the page tells you the number of marks available for each question.

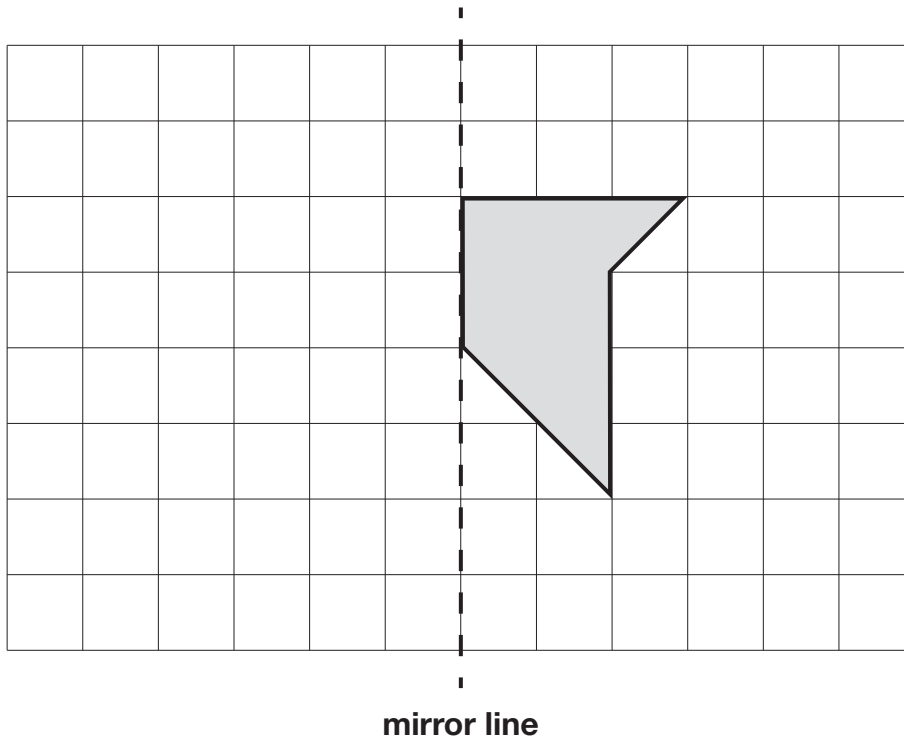


1

Here is a shape on a grid.

Complete the design so that it is symmetrical about the mirror line.

Use a ruler.



1 mark



2

Stefan completes this calculation.

$$\begin{array}{r} \boxed{9} \boxed{5} \\ - \boxed{6} \boxed{7} \\ \hline \boxed{2} \boxed{8} \end{array}$$

Write an **addition** calculation he could use to check his answer.

$$\begin{array}{r} \boxed{\phantom{0}} \boxed{\phantom{0}} \\ + \boxed{\phantom{0}} \boxed{\phantom{0}} \\ \hline \boxed{\phantom{0}} \boxed{\phantom{0}} \end{array}$$

1 mark



G 0 0 0 7 0 A 0 5 2 4

3

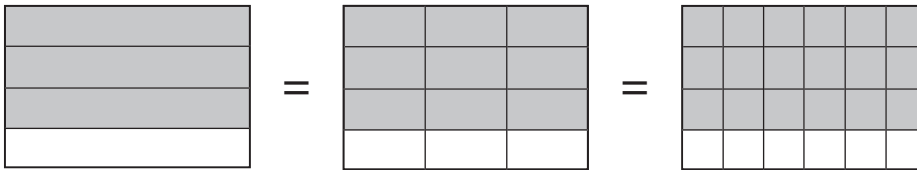
On the line below, mark the point that is 6.7 centimetres from A.



1 mark

4

These diagrams show three equivalent fractions.



Write the missing values.

$$\frac{3}{4} = \frac{9}{\boxed{\phantom{00}}} = \frac{\boxed{\phantom{00}}}{24}$$

1 mark



5

Here are the temperatures in four cities at midnight and at midday.

| City   | Temperature           |                      |
|--------|-----------------------|----------------------|
|        | At midnight           | At midday            |
| Paris  | $-4^{\circ}\text{C}$  | $-2^{\circ}\text{C}$ |
| Oslo   | $-13^{\circ}\text{C}$ | $-7^{\circ}\text{C}$ |
| Rome   | $3^{\circ}\text{C}$   | $10^{\circ}\text{C}$ |
| Warsaw | $-6^{\circ}\text{C}$  | $2^{\circ}\text{C}$  |

At **midnight**, how many degrees colder was Paris than Rome?

degrees

1 mark

Which city was 6 degrees colder at midnight than at midday?

1 mark



G 0 0 0 7 0 A 0 7 2 4

6

The numbers in this sequence **decrease** by the same amount each time.

303,604    302,604    301,604    300,604    ...

What is the next number in the sequence?

1 mark

7

Tick the **two** numbers that are equivalent to  $\frac{1}{4}$

Tick **two**.

0.25

☐

0.75

☐

$\frac{25}{100}$

☐

0.5

☐

$\frac{2}{5}$

☐

1 mark

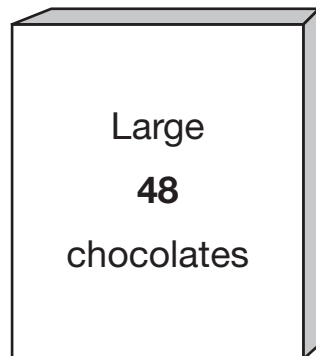




8

Ken buys 3 large boxes and 2 small boxes of chocolates.

Each large box has 48 chocolates. Each small box has 24 chocolates.



How many **chocolates** did Ken buy altogether?

Show  
your  
method

chocolates

2 marks



G 0 0 0 7 0 A 0 9 2 4

9

The list below shows the years in which the Cricket World Cup was held since 1992:

1992, 1996, 1999, 2003, 2007, 2011, 2015

Adam says,

The Cricket World Cup has been held every four years since 1992.



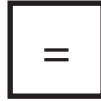
Adam is **not** correct.

Explain how you know.

A large, empty, cloud-shaped box with a scalloped border, intended for the student to write their explanation.

1 mark





Write the correct symbol in each box to make the statements correct.

$11 \times 12$    $15 \times 10$

$90 \div 30$    $60 \div 20$

$120 \div 4$    $160 \div 8$

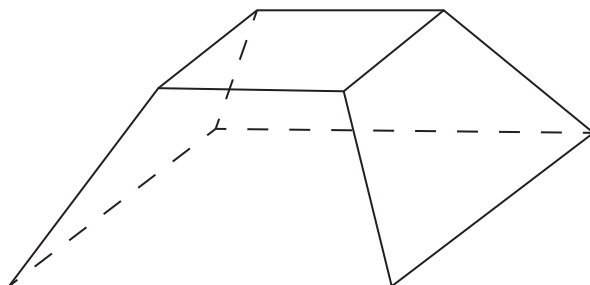
$30 \times 8$    $100 \times 10$

2 marks



11

Here is a drawing of a 3-D shape.



Complete the table.

| Number of faces | Number of vertices | Number of edges |
|-----------------|--------------------|-----------------|
|                 |                    |                 |

2 marks



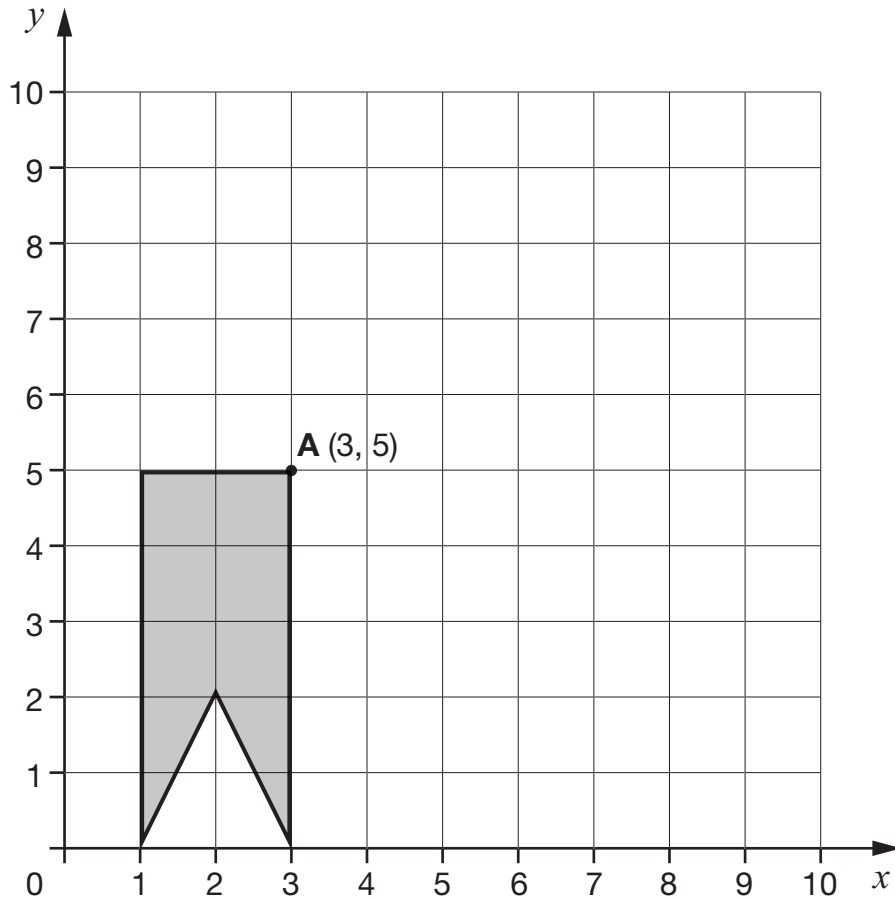
12

Here is a shape on a grid.

The shape is translated so that point **A** moves to (7, 8).

Draw the shape in its new position.

Use a ruler.



1 mark



13

Circle the improper fraction that is equivalent to  $6\frac{7}{8}$

$$\frac{67}{8}$$

$$\frac{48}{8}$$

$$\frac{62}{8}$$

$$\frac{55}{8}$$

$$\frac{76}{8}$$

1 mark

14

$$\frac{6}{5}$$

$$\frac{3}{5}$$

$$\frac{3}{4}$$

Write these fractions in order, starting with the **smallest**.

smallest



1 mark

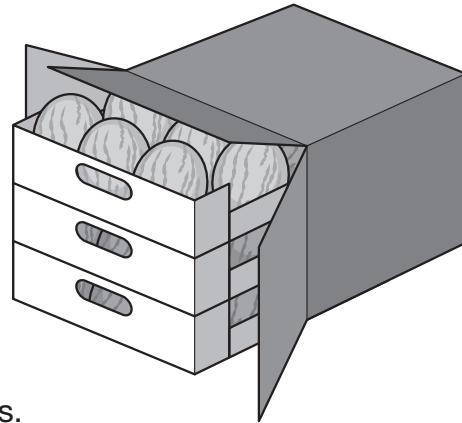


15

A box contains trays of melons.

There are 15 melons in a tray.

There are 3 trays in a box.



A supermarket sells **40** boxes of melons.

How many melons does the supermarket sell?

Show  
your  
method

melons

2 marks



16

Adam wants to use a mental method to calculate  $182 - 97$

He starts from 182

Here are some methods that Adam could use.

Tick the methods that are **correct**.

add 3 then subtract 90

☐

subtract 100 then add 3

☐

subtract 7 then subtract 90

☐

subtract 3 then subtract 100

☐

2 marks





17

There are 28 pupils in a class.

The teacher has 8 litres of orange juice.

She pours 225 millilitres of orange juice for every pupil.



How much orange juice is left over?

Show  
your  
method

3 marks




G 0 0 0 7 0 A 0 1 7 2 4

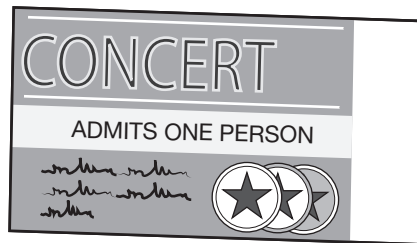
18

Last year, Jacob went to four concerts.

Three of his tickets cost £5 each.



The other ticket cost £7



What was the **mean** cost of the tickets?

Show  
your  
method

£

2 marks



19

Layla wants to estimate the answer to this calculation.

$$3\frac{9}{10} - 2\frac{1}{8} + 1\frac{4}{5}$$

Tick the calculation below that is the best estimate.

Tick **one**.

$3 - 2 + 2$  ☐

$4 - 2 + 1$  ☐

$4 - 2 + 2$  ☐

$3 - 2 + 1$  ☐

1 mark



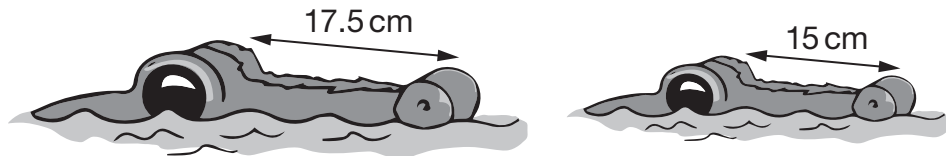
G 0 0 0 7 0 A 0 1 9 2 4

20

The length of an alligator can be estimated by:

- measuring the distance from its eyes to its nose
- then multiplying that distance by 12

What is the **difference** in the estimated lengths of these two alligators?



Not to scale

Show  
your  
method

cm

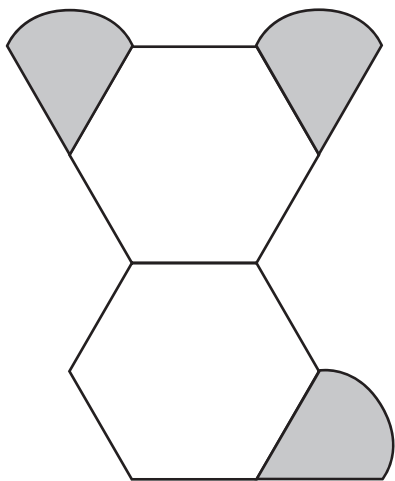
2 marks



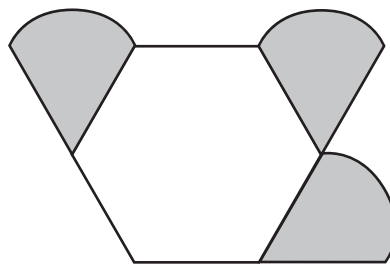
21

Amina is making designs with two different shapes.

She gives each shape a value.

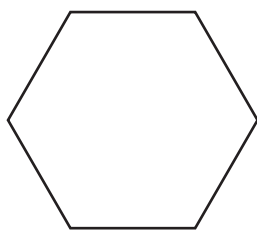


Total value is 147




Total value is 111

Calculate the value of each shape.



=

1 mark



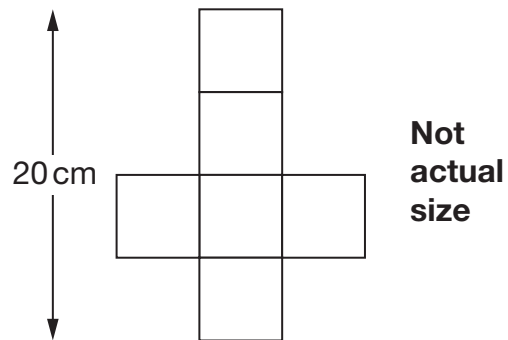
=

1 mark



22

This is the net of a cube.



What is the **volume** of the cube?

cm<sup>3</sup>

1 mark



23

The length of a day on Earth is 24 hours.

The length of a day on Mercury is  $58\frac{2}{3}$  times the length of a day on Earth.

What is the length of a day on Mercury, in **hours**?

Show  
your  
method

hours

2 marks



G 0 0 0 7 0 A 0 2 3 2 4



Standards  
& Testing  
Agency

2018 key stage 2 mathematics

Paper 2: reasoning

Print version product code: STA/18/7974/p ISBN: 978-1-78644-627-5

Electronic PDF version product code: STA/18/7974/e ISBN: 978-1-78644-647-3

### For more copies

Additional printed copies of this booklet are not available. It can be downloaded from [www.gov.uk/government/publications](http://www.gov.uk/government/publications).

© Crown copyright 2018

### Re-use of Crown copyright in test materials

Subject to the exceptions listed below, the test materials on this website are Crown copyright and you may re-use them (not including logos) free of charge in any format or medium in accordance with the terms of the Open Government Licence v3.0 which can be found on the National Archives website and accessed via the following link: [www.nationalarchives.gov.uk/doc/open-government-licence](http://www.nationalarchives.gov.uk/doc/open-government-licence). When you use this information under the Open Government Licence v3.0, you should include the following attribution: 'Contains material developed by the Standards and Testing Agency for 2018 national curriculum assessments and licensed under Open Government Licence v3.0' and where possible provide a link to the licence.



### Exceptions – third-party copyright content in test materials

You must obtain permission from the relevant copyright owners, as listed in the '2018 key stage 2 tests copyright report', for re-use of any third-party copyright content which we have identified in the test materials, as listed below. Alternatively, you should remove the unlicensed third-party copyright content and/or replace it with appropriately licensed material.

### Third-party content

These materials contain no third-party copyright content.

If you have any queries regarding these test materials, contact the national curriculum assessments helpline on 0300 303 3013 or email [assessments@education.gov.uk](mailto:assessments@education.gov.uk).

