

Please write clearly in block capitals.

Centre number

1	2	3	4	5
---	---	---	---	---

Candidate number

1	2	3	4
---	---	---	---

Surname

EXAMPLE

Forename(s)

EG

Candidate signature



I declare this is my own work.

GCSE CHEMISTRY

H

Higher Tier Paper 1

Time allowed: 1 hour 45 minutes

Materials

For this paper you must have:

- a ruler
- a scientific calculator
- the periodic table (enclosed).

Instructions

- Use black ink or black ball-point pen.
- Pencil should only be used for drawing.
- Fill in the boxes at the top of this page.
- Answer **all** questions in the spaces provided. Do not write outside the box around each page or on blank pages.
- If you need extra space for your answer(s), use the lined pages at the end of this book. Write the question number against your answer(s).
- Do all rough work in this book. Cross through any work you do not want to be marked.
- In all calculations, show clearly how you work out your answer.

Information

- The maximum mark for this paper is 100.
- The marks for questions are shown in brackets.
- You are expected to use a calculator where appropriate.
- You are reminded of the need for good English and clear presentation in your answers.

For Examiner's Use

Question	Mark
1	
2	
3	
4	
5	
6	
7	
8	
9	
TOTAL	

0 1

This question is about carbon and its compounds.

Fullerenes are molecules of carbon atoms.

The first fullerene to be discovered was Buckminsterfullerene (C_{60}).

0 1. 1

What shape is a Buckminsterfullerene molecule?

[1 mark]

Spherical

0 1. 2

Give one use of a fullerene.

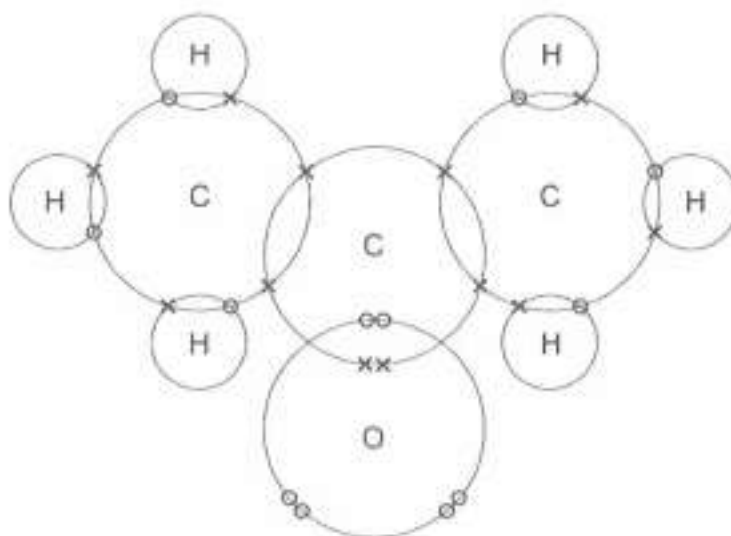
[1 mark]

Drug delivery inside the body

Propanone is a compound of carbon, hydrogen and oxygen.

Figure 1 shows the dot and cross diagram for a propanone molecule.

Figure 1



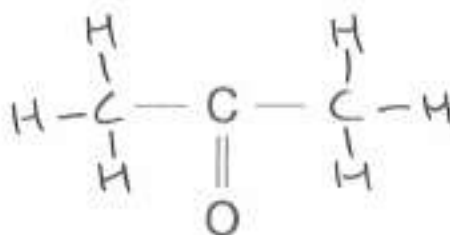
0 1 . 3 Complete Figure 2 to show a propanone molecule.

Use a line to represent each single bond.

Use Figure 1.

[1 mark]

Figure 2



0 1 . 4 Determine the molecular formula of propanone.

Use Figure 1.

[1 mark]

Molecular formula = C₃H₆O

0 1 . 5 Propanone is a liquid with a low boiling point.

Why does propanone have a low boiling point?

[1 mark]

Tick (✓) one box.

The covalent bonds are strong.

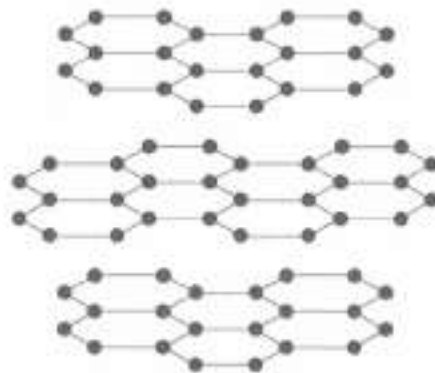
The covalent bonds are weak.

The intermolecular forces are strong.

The intermolecular forces are weak.

0 1 6 Figure 3 represents the structure of graphite.

Figure 3



Explain why graphite is:

- a good electrical conductor
- soft and slippery.

You should answer in terms of structure and bonding.

[6 marks]

Graphite is slippery because of its layered structure. The flat carbon sheets that make up graphite are held together by weak intermolecular forces and slide easily over each other, making graphite soft and slippery. Graphite is a good electrical conductor because it contains delocalised electrons. This is because of the way the carbons within sheets are bonded together. Each carbon in the sheet is bonded to three other carbon atoms. Carbon can form four bonds and so by only forming 3, electrons are freed between the sheets to carry an electrical charge.

Turn over for the next question

*Do not write
outside the
box*

**DO NOT WRITE ON THIS PAGE
ANSWER IN THE SPACES PROVIDED**

Turn over ►

0 2

This question is about atomic structure and the periodic table.

Gallium (Ga) is an element that has two isotopes.

0 2 . 1

Give the meaning of 'isotopes'.

You should answer in terms of subatomic particles.

[2 marks]

An isotope is an atom with the same number of protons in its nucleus as another but a different number of neutrons.

0 2 . 2

Table 1 shows the mass numbers and percentage abundances of the isotopes of gallium.

Table 1

Mass number	Percentage abundance (%)
69	60
71	40

Calculate the relative atomic mass (A_r) of gallium.

Give your answer to 1 decimal place.

[2 marks]

$$A_r = \frac{(69 \times 60) + (71 \times 40)}{100}$$

$$= \underline{69.8}$$

Relative atomic mass (1 decimal place) = 69.8

Gallium (Ga) is in Group 3 of the modern periodic table.

0 2 . 3

Give the numbers of electrons and neutrons in an atom of the isotope ${}^{69}_{31}\text{Ga}$

[2 marks]

Number of electrons 31

Number of neutrons (69-31 =) 38

0 2 . 4

What is the most likely formula of a gallium ion?

[1 mark]

Tick (✓) **one** box.

Ga⁺

Ga⁻

Ga³⁺

Ga³⁻

0 2 . 5

Gallium was discovered six years after Mendeleev published his periodic table.

Give **two** reasons why the discovery of gallium helped Mendeleev's periodic table to become accepted.

[2 marks]

- 1 It filled a gap left in the table
by Mendeleev
- 2 Mendeleev was able to use the periodic
table to accurately predict Gallium's properties

03

This question is about the extraction of metals.

Element **R** is extracted from its oxide by reduction with hydrogen.

The equation for the reaction is:



03.1

The sum of the relative formula masses (M_r) of the reactants ($3\text{H}_2 + \text{RO}_3$) is 150

Calculate the relative atomic mass (A_r) of **R**.

Relative atomic masses (A_r): H = 1 O = 16

[2 marks]

$$M_r \text{H}_2\text{O} = 18 \quad 150 = R + 3(18)$$

$$R = 150 - 3(18)$$

$$= 150 - 54$$

$$= 96$$

Relative atomic mass (A_r) of **R** = 96

03.2

Identify element **R**.

You should use:

- your answer to **question 03.1**
- the periodic table.

[1 mark]

Identity of **R** = Molybdenum (Mo)

0 3 . 3 Carbon is used to extract tin (Sn) from tin oxide (SnO₂).

The equation for the reaction is:



Calculate the percentage atom economy for extracting tin in this reaction.

Relative atomic masses (A_r): C = 12 O = 16 Sn = 119

[3 marks]

$$\text{Total } M_r = 12 + 119 + (2 \times 16)$$

$$\text{reactants} = 163$$

$$\% \text{ atom} = \frac{119}{163} \times 100$$

$$\text{economy} = 73\%$$

Percentage atom economy = 73 %

Question 3 continues on the next page

Turn over ►

0 3 . 4 Tungsten (W) is a metal.

Tungsten is extracted from tungsten oxide (WO_3).

All other solid products from the extraction method must be separated from the tungsten.

Table 2 shows information about three possible methods to extract tungsten from tungsten oxide.

Table 2

Method	Reactant	Relative cost of reactant	Products
1	Carbon	Low	Tungsten solid Carbon dioxide gas Tungsten carbide solid
2	Hydrogen	High	Tungsten solid Water vapour
3	Iron	Low	Tungsten solid Iron oxide solid

Evaluate the three possible methods for extracting tungsten from tungsten oxide.

[4 marks]

Both Carbon and Iron are cheap reactants. However, both methods require the separation of the tungsten from other unwanted solids. This will add to the overall costs of the process. In addition to this for Carbon as a reactant, tungsten is lost to tungsten Carbide as well as the production of CO_2 making it environmentally unfriendly. Though Hydrogen is more expensive, it does not require the tungsten to be separated. It does still produce a green house gas however in the form of water vapour.

10



0 4

This question is about Group 1 elements.

0 4 . 1

Give two observations you could make when a small piece of potassium is added to water.

[2 marks]

- 1 It will move around on the surface of the water
- 2 It will burn with a lilac flame

0 4 . 2

Complete the equation for the reaction of potassium with water.

You should balance the equation.

[2 marks]



0 4 . 3

Explain why the reactivity of elements changes going down Group 1.

[4 marks]

Reactivity increases down Group 1. This is because the outer electron of the atom gets further from the nucleus as you go down the Group. This means that the attraction between this electron and the nucleus is weaker and so the atom will lose this electron more easily. This is responsible for the increased reactivity

Sodium reacts with oxygen to produce the ionic compound sodium oxide.

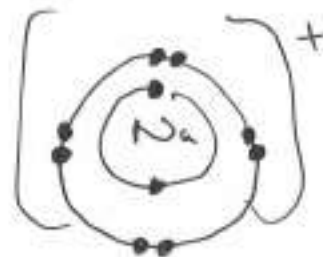
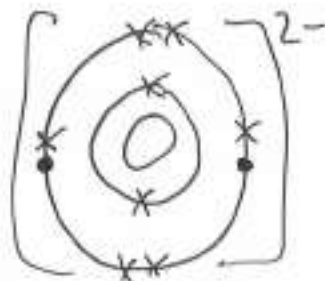
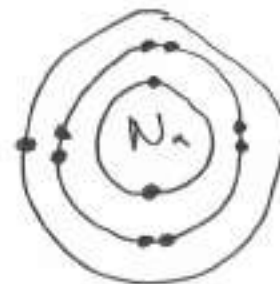
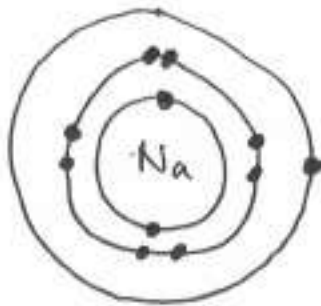
Oxygen is a Group 6 element.

0 4 . 4

Draw a dot and cross diagram to show what happens when atoms of sodium and oxygen react to produce sodium oxide.

[4 marks]

Diagram



0 4 . 5

Why is oxygen described as being reduced in the reaction between sodium and oxygen?

[1 mark]

It is gaining two electrons

0 4 . 6

Explain why sodium oxide has a high melting point.

[3 marks]

Sodium oxide has a giant lattice structure held together with very strong electrostatic attractions between the O^{2-} and Na^+ ions. These attractions require a lot of energy to overcome, giving sodium oxide a high melting point

16

Turn over for the next question

Turn over ►

0 5 This question is about salts.

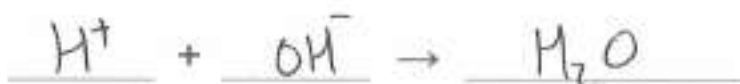
0 5 . 1 Name the salt produced by the neutralisation of hydrochloric acid with potassium hydroxide.

[1 mark]

Potassium Chloride

0 5 . 2 Write an ionic equation for the neutralisation of hydrochloric acid with potassium hydroxide.

[1 mark]



0 5 . 3 Soluble salts can be produced by reacting dilute hydrochloric acid with an insoluble solid.

Copper, copper carbonate and copper oxide are insoluble solids.

Which of these insoluble solids can be used to make a copper salt by reacting the solid with dilute hydrochloric acid?

[1 mark]

Tick (✓) one box.

Copper and copper carbonate only

Copper and copper oxide only

Copper carbonate and copper oxide only

Copper, copper carbonate and copper oxide

A student makes crystals of magnesium sulfate.

This is the method used.

1. Add sulfuric acid to a beaker.
2. Warm the sulfuric acid.
3. Add a spatula of magnesium oxide to the beaker.
4. Stir the mixture.
5. Repeat steps 3 and 4 until there is magnesium oxide remaining in the beaker.
6. Filter the mixture.
7. Evaporate the filtrate gently until crystals start to form.
8. Leave the solution to finish crystallising.

0 5 . 4

Give one reason for:

- step 2
- step 5
- step 6.

[3 marks]

Step 2 to increase the rate of reaction

Step 5 To ensure that all ~~the~~ sulfuric acid has reacted

Step 6 to remove the excess magnesium oxide

0 5 . 5

How should the filtrate be evaporated gently in step 7?

[1 mark]

using a water bath or electric heater

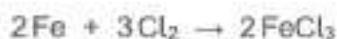
Turn over ►



0 5 . 6

Iron chloride is produced by heating iron in chlorine gas.

The equation for the reaction is:



ratio Fe to Cl₂
= 2:3

Calculate the volume of chlorine needed to react with 14 g of iron.

You should calculate:

$n = \text{moles}$

- the number of moles of iron used
- the number of moles of chlorine that react with 14 g of iron
- the volume of chlorine needed.

Relative atomic mass (A_r): Fe = 56

The volume of 1 mole of gas = 24 dm³

[3 marks]

$$n_{\text{Iron}} = \frac{14}{56} = 0.25 \text{ moles}$$

$$n_{\text{Cl}_2} = \frac{3}{2} n_{\text{Fe}} = \frac{3}{2} \times 0.25 = 0.375 \text{ moles}$$

$$\text{Volume} = 0.375 \times 24 = 9.0 \text{ dm}^3$$

Volume of chlorine = 9.0 dm³

0 6 This question is about metals.

0 6 . 1 Table 3 shows information about four substances.

Table 3

Substance	Melting point in °C	Boiling point in °C	Does it conduct electricity in the solid state?	Does it conduct electricity in the liquid state?
A	-117	79	No	No
B	801	1413	No	Yes
C	1535	2750	Yes	Yes
D	1610	2230	No	No

Which substance could be a metal?

[1 mark]

Tick (✓) one box.

A B C D

0 6 . 2 Explain why alloys are harder than pure metals.

[3 marks]

The atoms of the different elements are different sizes. This distorts the layers of atoms in the alloy. This prevents the layers sliding over each other as easily, hardening the metal.

0 6 . 3

A student wants to compare the reactivity of an unknown metal, **Q**, with that of zinc.

Both metals are more reactive than silver.

The student is provided with:

- silver nitrate solution
- metal **Q** powder
- zinc powder
- a thermometer
- normal laboratory equipment.

No other chemicals are available.

Describe a method the student could use to compare the reactivity of metal **Q** with that of zinc.

Your method should give valid results.

[4 marks]

Two beakers should be filled with equal volumes of silver nitrate solution of equal concentration. The starting temperature of each solution should be measured. To one beaker should be added a known mass of zinc powder. To the other, an equal mass of metal **Q** powder. After addition, the temperature of each solution should be measured every 30 seconds for 10 minutes. Once the reaction is done, the beaker that reached the highest temperature is the more reactive.

8



0 7 This question is about chemical reactions and electricity.

0 7 . 1 Electrolysis and chemical cells both involve chemical reactions and electricity.

Explain the difference between the processes in electrolysis and in a chemical cell. [2 marks]

Electrolysis uses electricity to produce a chemical reaction.

An electrochemical cell uses a chemical reaction to produce electricity.

0 7 . 2 A teacher demonstrates the electrolysis of molten lead bromide.

Bromine is produced at the positive electrode.

Complete the half equation for the production of bromine.

You should balance the half equation.

[2 marks]



0 7 . 3 Two aqueous salt solutions are electrolysed using inert electrodes.

Complete Table 4 to show the product at each electrode.

[3 marks]

Table 4

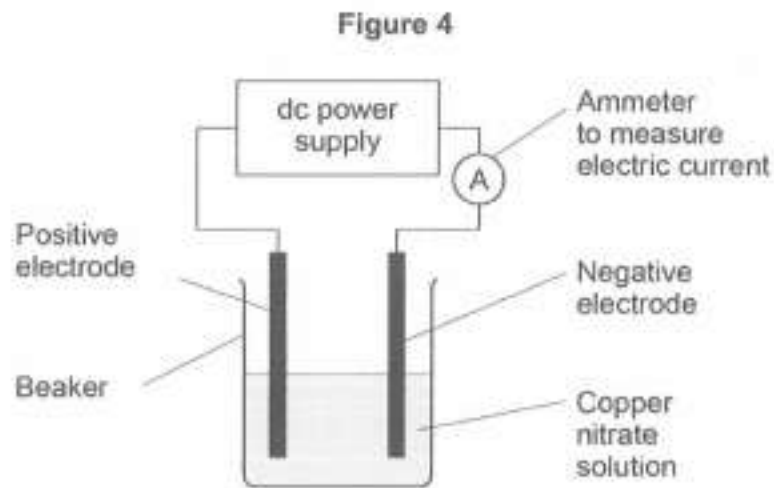
Salt solution	Product at positive electrode	Product at negative electrode
Copper nitrate		copper
Potassium iodide		

Turn over ►



Some students investigated the electrolysis of copper nitrate solution using inert electrodes.

Figure 4 shows the apparatus.



The students investigated how the mass of copper produced at the negative electrode varied with:

- time
- current.

This is the method used.

1. Weigh the negative electrode.
2. Set up the apparatus shown in **Figure 4**.
3. Adjust the power supply until the ammeter shows a current of 0.3 A
4. Switch off the power supply after 5 minutes.
5. Rinse the negative electrode with water and allow to dry.
6. Reweigh the negative electrode.
7. Repeat steps 1 to 6 for different times.
8. Repeat steps 1 to 7 at different currents.

- 0 7 . 4 Some of the copper produced did not stick to the negative electrode but fell to the bottom of the beaker.

Suggest how the students could find the total mass of copper produced.

[4 marks]

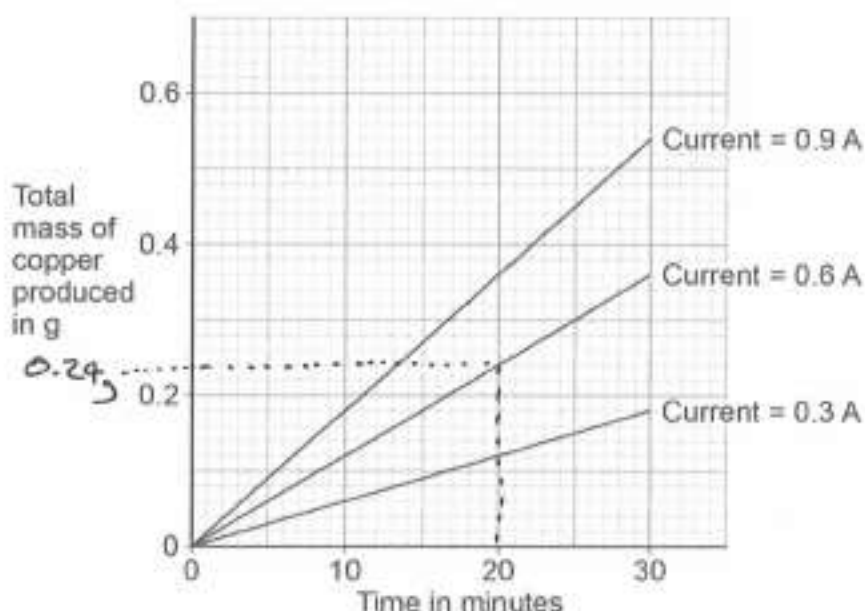
The mixture could be filtered to obtain the solid copper. This can then be washed and dried. Once dry the copper can be weighed. This weight should be added to that of the increase in mass of the electrode. This will yield the total mass of copper produced.

Question 7 continues on the next page

The students plotted their results on a graph.

Figure 5 shows the graph.

Figure 5



A student correctly concluded that the total mass of copper produced is directly proportional both to the time and to the current.

07.5

How do the results in Figure 5 support the conclusion that the total mass of copper produced is directly proportional to the time?

[1 mark]

All the lines are straight lines
through the origin

07.6

How do the results in Figure 5 support the conclusion that the total mass of copper produced is directly proportional to the current?

Use data from Figure 5 in your answer.

[1 mark]

Between 10 and 20 minutes, the
mass of copper at 0.3A doubles from 0.06 to 0.12

07.7

Copper nitrate solution is blue.

Suggest why the blue colour of the copper nitrate solution fades during the electrolysis.

[1 mark]

Copper ions are discharged from the solution.

07.8

Determine the number of atoms of copper produced when copper nitrate solution is electrolysed for 20 minutes at a current of 0.6 A

Give your answer to 3 significant figures.

Use Figure 5.

Relative atomic mass (A_r): $\text{Cu} = 63.5$

The Avogadro constant = 6.02×10^{23} per mole (N_A)

[3 marks]

$$\text{mass Cu} = 0.24 \text{ g} \quad n = \frac{m}{M_r} = \frac{0.24}{63.5}$$

$$= 3.78 \times 10^{-3} \text{ g moles}$$

$$N = n \times N_A$$

$$= (3.78 \times 10^{-3}) \times (6.02 \times 10^{23})$$

$$= 2.28 \times 10^{21} \text{ atoms}$$

Number of atoms (3 significant figures) = 2.28×10^{21}

17

Turn over for the next question

Turn over ►

0 8

This question is about the reaction between hydrogen sulfide (H_2S) and oxygen.

The equation for the reaction is:



0 8 . 1

What does $\text{H}_2\text{O}(\text{g})$ represent?

[1 mark]

water vapour

0 8 . 2

Calculate the volume of oxygen required to react with 50 cm^3 of hydrogen sulfide.

[1 mark]

ratio H_2S to $\text{O}_2 = 2:3$

$$V_{\text{O}_2} = \frac{3}{2} \times 50 = 75 \text{ cm}^3$$

Volume = 75 cm^3

0 8 . 3

Figure 6 shows part of the reaction profile for the reaction.

The reaction is exothermic.

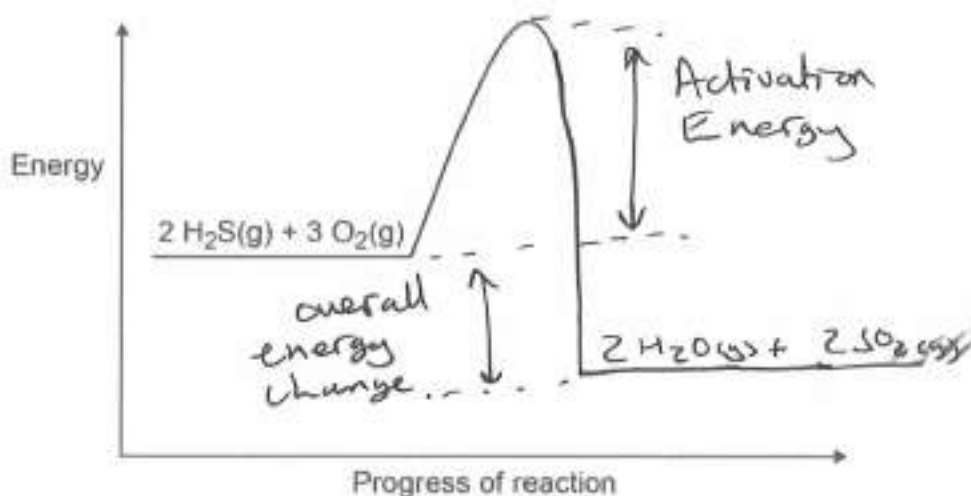
Complete Figure 6.

You should:

- complete the profile line
- label the activation energy
- label the overall energy change.

[3 marks]

Figure 6



0 9

This question is about acids.

Hydrogen chloride and ethanoic acid both dissolve in water.

All hydrogen chloride molecules ionise in water.

Approximately 1% of ethanoic acid molecules ionise in water.

0 9 . 1

A solution is made by dissolving 1 g of hydrogen chloride in 1 dm³ of water.

Which is the correct description of this solution?

[1 mark]

Tick (✓) **one** box.

A concentrated solution of a strong acid

A concentrated solution of a weak acid

A dilute solution of a strong acid

A dilute solution of a weak acid

0 9 . 2

Which solution would have the lowest pH?

[1 mark]

Tick (✓) **one** box.

0.1 mol/dm³ ethanoic acid solution

0.1 mol/dm³ hydrogen chloride solution

1.0 mol/dm³ ethanoic acid solution

1.0 mol/dm³ hydrogen chloride solution

A student investigated the concentration of a solution of sodium hydroxide by titration with a 0.0480 mol/dm^3 ethanedioic acid solution.

This is the method used.

1. Measure 25.0 cm^3 of the sodium hydroxide solution into a conical flask using a 25.0 cm^3 pipette.
2. Add two drops of indicator to the sodium hydroxide solution.
3. Fill a burette with the 0.0480 mol/dm^3 ethanedioic acid solution to the 0.00 cm^3 mark.
4. Add the ethanedioic acid solution to the sodium hydroxide solution until the indicator changes colour.
5. Read the burette to find the volume of the ethanedioic acid solution used.

0 9 . 3

Suggest **two** improvements to the method that would increase the accuracy of the result.

[2 marks]

1 Place a white tile under the flask

2 Add the ethanedioic acid dropwise towards the endpoint

Question 9 continues on the next page

0 8 . 4 Figure 7 shows the displayed formula equation for the reaction of hydrogen sulfide with oxygen.

Figure 7



Table 5 shows some of the bond energies.

Table 5

Bond	H—S	O—O	H—O	S=O
Energy in kJ/mol	364	498	464	X

In the reaction the energy released forming new bonds is 1034 kJ/mol greater than the energy needed to break existing bonds.

Calculate the bond energy X for the S=O bond.

Use Figure 7 and Table 5.

[5 marks]

$$\begin{aligned} \text{Bonds Broken} &= 4(364) + 3(498) \\ &= 2950 \text{ kJ mol}^{-1} \end{aligned}$$

$$\text{Bonds formed} = 4x + 4(464) = 2950 + 1034$$

$$4x = 3984 - 4(464)$$

$$4x = 3984 - 1856$$

$$4x = 2128$$

$$x = \frac{2128}{4} = 532 \text{ kJ mol}^{-1}$$

$$x = 532 \text{ kJ/mol}$$

10

Turn over ►



09.4 Ethanedioic acid is a solid at room temperature.

Calculate the mass of ethanedioic acid ($\text{H}_2\text{C}_2\text{O}_4$) needed to make 250 cm^3 of a solution with concentration 0.0480 mol/dm^3

Relative formula mass (M_r): $\text{H}_2\text{C}_2\text{O}_4 = 90$

[2 marks]

$$\text{Conc}^n = 90 \times 0.0480 = 4.32 \text{ g/dm}^3$$

$$\text{mass} = 4.32 \times \frac{250}{1000} = 1.08 \text{ g}$$

Mass = 1.08 9

09.5 The student found that 25.0 cm^3 of the sodium hydroxide solution was neutralised by 15.00 cm^3 of the 0.0480 mol/dm^3 ethanedioic acid solution.

The equation for the reaction is:



Calculate the concentration of the sodium hydroxide solution in mol/dm^3

[3 marks]

$$n \text{ H}_2\text{C}_2\text{O}_4 = \frac{15.0}{1000} \times 0.0480 = 0.00072 \text{ moles}$$

$$n \text{ NaOH} = n \text{ H}_2\text{C}_2\text{O}_4 \times 2 = 0.00144 \text{ moles}$$

$$\text{Conc}^n = \frac{0.00144}{25.0} \times 1000 = 0.0576 \text{ mol/dm}^3$$

Concentration = 0.0576 mol/dm³

9

END OF QUESTIONS

