



Please write clearly in block capitals.

Centre number

Candidate number

Surname _____

Forename(s) _____

Candidate signature _____

I declare this is my own work.

GCSE MATHEMATICS



Foundation Tier Paper 2 Calculator

Thursday 4 June 2020

Morning

Time allowed: 1 hour 30 minutes

Materials

For this paper you must have:

- a calculator
- mathematical instruments.



Instructions

- Use black ink or black ball-point pen. Draw diagrams in pencil.
- Fill in the boxes at the top of this page.
- Answer **all** questions.
- You must answer the questions in the spaces provided. Do not write outside the box around each page or on blank pages.
- If you need extra space for your answer(s), use the lined pages at the end of this book. Write the question number against your answer(s).
- Do all rough work in this book. Cross through any work you do not want to be marked.

Information

- The marks for questions are shown in brackets.
- The maximum mark for this paper is 80.
- You may ask for more answer paper, graph paper and tracing paper. These must be tagged securely to this answer book.

Advice

In all calculations, show clearly how you work out your answer.

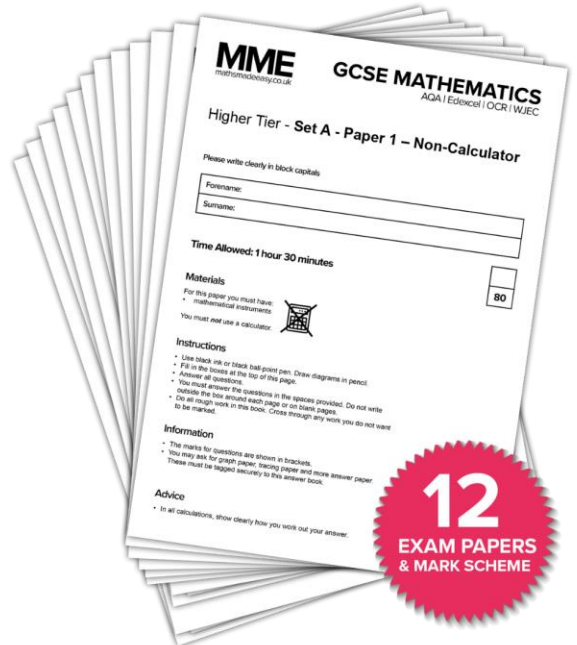
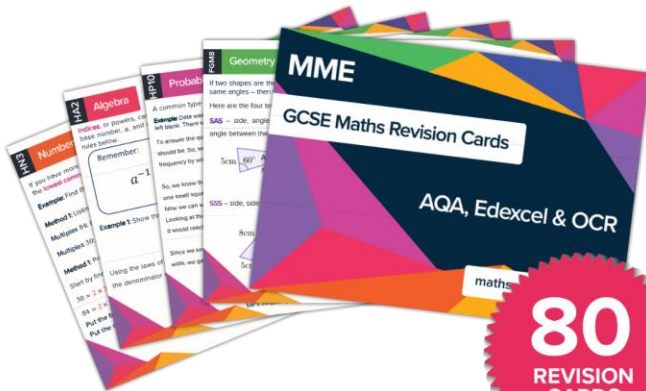
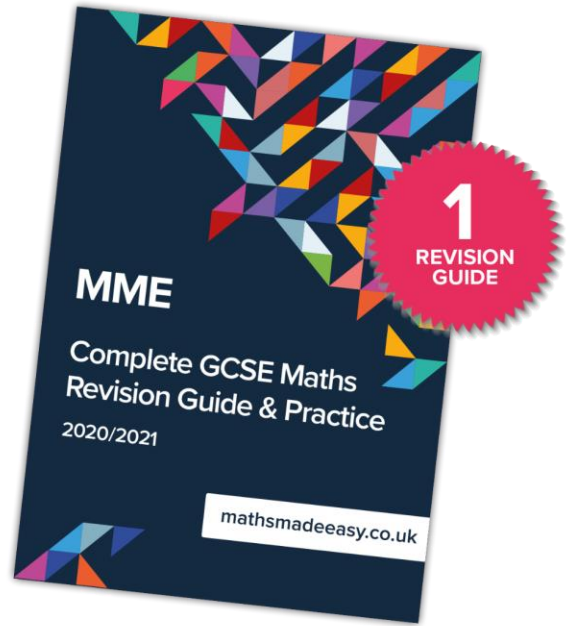

For Examiner's Use	
Pages	Mark
2-3	
4-5	
6-7	
8-9	
10-11	
12-13	
14-15	
16-17	
18-19	
20-21	
22-23	
24-25	
26-27	
28	
TOTAL	



J U N 2 0 8 3 0 0 2 F 0 1

MME.

GCSE Maths Products



Available in the course in a box
or for purchase separately.

Answer **all** questions in the spaces provided.

Do not write
outside the
box

1 Circle the ratio that is the same as 3 : 4

[1 mark]

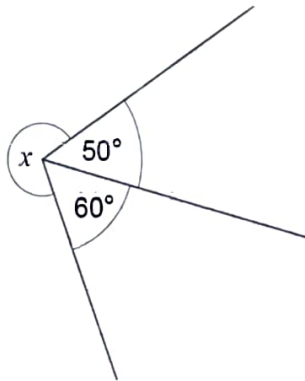
6 : 7

6 : 8

6 : 9

6 : 16

2



Not drawn
accurately

Circle the size of angle x .

[1 mark]

70°

110°

250°

270°

3 Circle the expression that has the **smallest** value when $x = 4$

[1 mark]

$5 - x$

$\frac{1}{2}x$

$x + 1$

$x - 4$



- 4 The term-to-term rule for a sequence is

add 1 then double

The first two terms are 2 and 6

Circle the next term.

[1 mark]

9

13

14

18

- 5 (a) Solve $7x = 56$

[1 mark]

$$x = \frac{56}{7} = 8$$

$$x = 8$$

- 5 (b) Solve $25 - y = 18$

[1 mark]

$$y = 25 - 18 = 7$$

$$y = 7$$



- 6 Eleven people play a game.
Here are their scores.

12 (9) 15 (9) 18 18 3 14 (9) 16 20

- 6 (a) Write down the mode.

[1 mark]

Answer 9

- 6 (b) Work out the median.

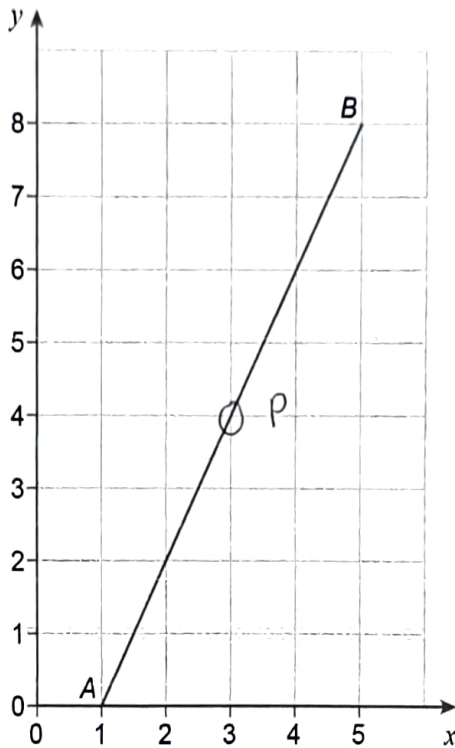
[2 marks]

In order: 3, 9, 9, 9, 12, (14), 15, 16, 18, 18, 20

Answer 14



- 7 Line AB is shown where A is the point $(1, 0)$ and B is the point $(5, 8)$



- 7 (a) P is a point on AB .
The distance AP is half the distance AB .
Work out the coordinates of P .

[1 mark]

Answer (3 , 4)

- 7 (b) A line is drawn from B that is
parallel to the x -axis
meets the y -axis at point Q .
Work out the coordinates of Q .

[1 mark]

Answer (0 , 8)



- 8 (a) Write down an even whole number that is also a square number.

[1 mark]

Answer 4

- 8 (b) Write down **all** the cube numbers between 100 and 400

[2 marks]

$$5^3 = 125$$

$$6^3 = 216$$

$$7^3 = 343$$

Answer 125, 216, 343

- 8 (c) Write down **two** numbers that
are multiples of 3
and
multiply to make 216

[1 mark]

$$6^3 = 216$$

$$\text{so } 6 \times 36 = 216$$

Answer 6 and 36



- 9 Members of a club are Senior, Adult or Junior.
- 9 (a) Here is a report about the members of the club.

<p>18% are Senior</p> <p>54% are Adult</p> <p>38% are Junior</p>
--

Give a reason why there **must** be a mistake in the report.

[1 mark]

$18 + 54 + 38 = 110$, which is not possible
given as the must add up to 100%.

- 9 (b) An Adult membership fee is £120
- A Junior membership fee is $\frac{1}{5}$ of the Adult fee.

Work out the **total** membership fee for 2 Adults and 3 Juniors.

[3 marks]

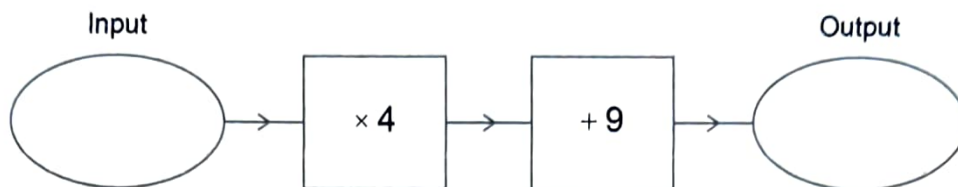
$$\frac{1}{5} \text{ of } £120 = £24$$

$$2 \times £120 + 3 \times £24 = £312$$

Answer £ 312



- 10 (a) Here is a number machine.



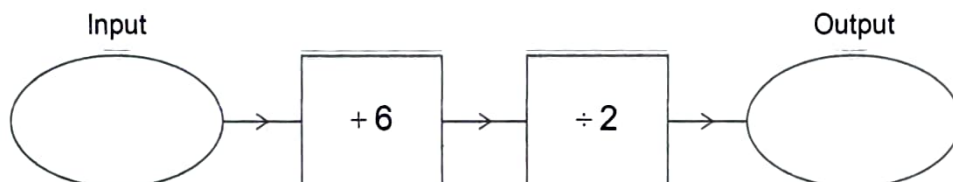
Work out the output when the input is 16

[1 mark]

$$16 \times 4 + 9 = 73$$

Answer 73

- 10 (b) Here is a different number machine.



Work out the output when the input is -48

[1 mark]

$$(-48 + 6) \div 2 = -21$$

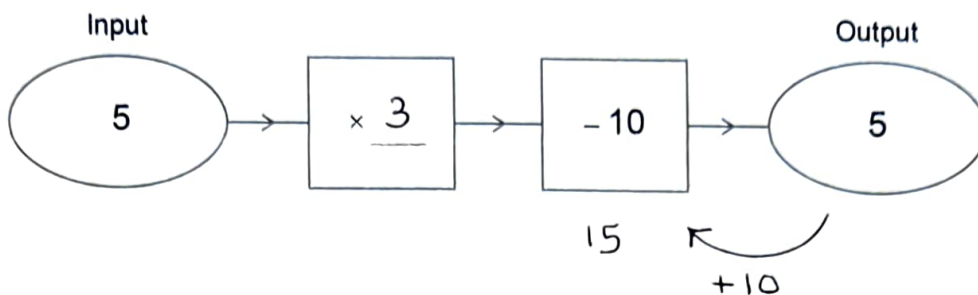
Answer -21



Do not write outside the box

10 (c) Complete this number machine.

[1 mark]



11 Here are two calculations.

A
 $17^2 - 300$

B
 $47 \times 21 - 10^3$

Which calculation has the smaller answer?
You **must** show the answer to each calculation.

[2 marks]

$$17^2 - 300 = -11$$

$$47 \times 21 - 10^3 = -13$$

Answer B is smaller

5

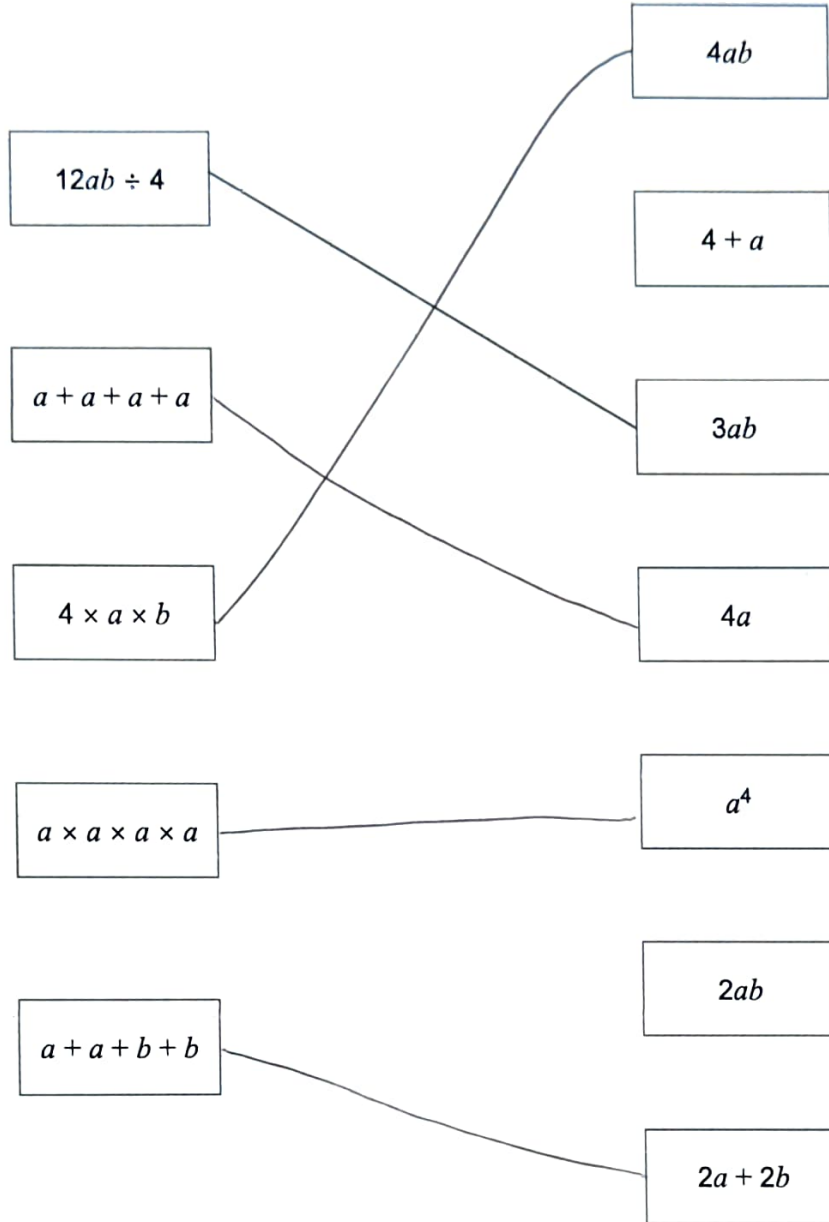
Turn over ▶



12

Match each expression on the left with one on the right.
One has been done for you.

[4 marks]



- 13 Jenny works for 30 hours and is paid £318
Calvin works for 28 hours and is paid £287
Jenny is paid more per hour than Calvin.
How much more?

[3 marks]

$$\text{Jenny's hourly rate} = £318 \div 30 = £10.60$$

$$\text{Calvin's hourly rate} = £287 \div 28 = £10.25$$

$$£10.60 - £10.25 = £0.35 = 35\text{p}$$

Answer 35 pence

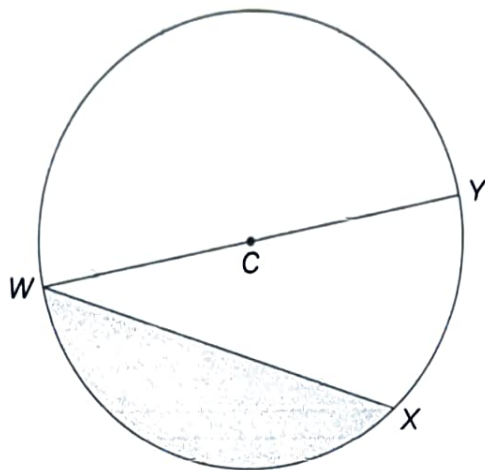
Turn over for the next question

7

Turn over ►



14

This circle has centre C . W , X and Y are points on the circle. WY is a straight line.Tick **one** box for each statement.**[3 marks]**

	True	False
WY is a diameter.	<input checked="" type="checkbox"/>	<input type="checkbox"/>
WX is a radius.	<input type="checkbox"/>	<input checked="" type="checkbox"/>
The shaded section is a sector.	<input type="checkbox"/>	<input checked="" type="checkbox"/>
Arc XY is part of the circumference.	<input checked="" type="checkbox"/>	<input type="checkbox"/>



- 15 Mortar is made by mixing cement and sand as shown.

For every 1 kg of cement used, add 4 kg of sand

Cement costs £0.19 per kg

Sand costs £0.07 per kg

Tomasz uses 150 kg of cement to make some mortar.

Work out the total cost of the mortar.

[3 marks]

$$\text{£}0.19 \times 150 = \text{£}28.50 \text{ (cost of cement)}$$

$$\text{Amount of sand} = 4 \times 150 = 600 \text{ kg}$$

$$\text{cost of sand} = 600 \times \text{£}0.07 = \text{£}42.$$

$$\text{Total cost} = \text{£}28.50 + \text{£}42 = \text{£}70.50$$

Answer £ 70.50

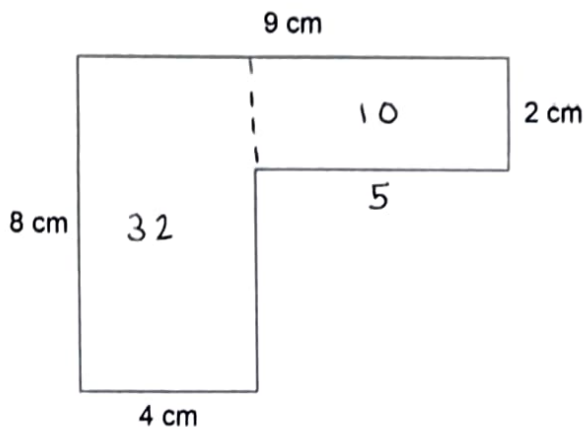
Turn over for the next question



Do not write
outside the
box

16 (a) Here is a shape made from rectangles.

Not drawn
accurately



Work out the area.

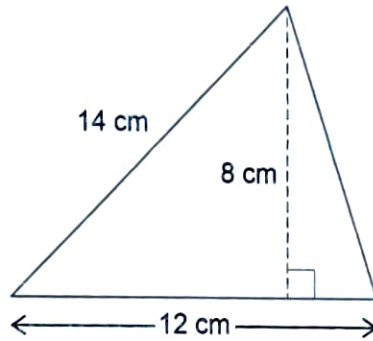
[3 marks]

$$\text{Area} = 8 \times 4 + 5 \times 2 = 42 \text{ cm}^2$$

Answer 42 cm²



- 16 (b) Zak wants to work out the area of this triangle.



Not drawn
accurately

Here is his working.

$$12 \times 8 = 96 \text{ cm}^2$$

What is wrong with his method?

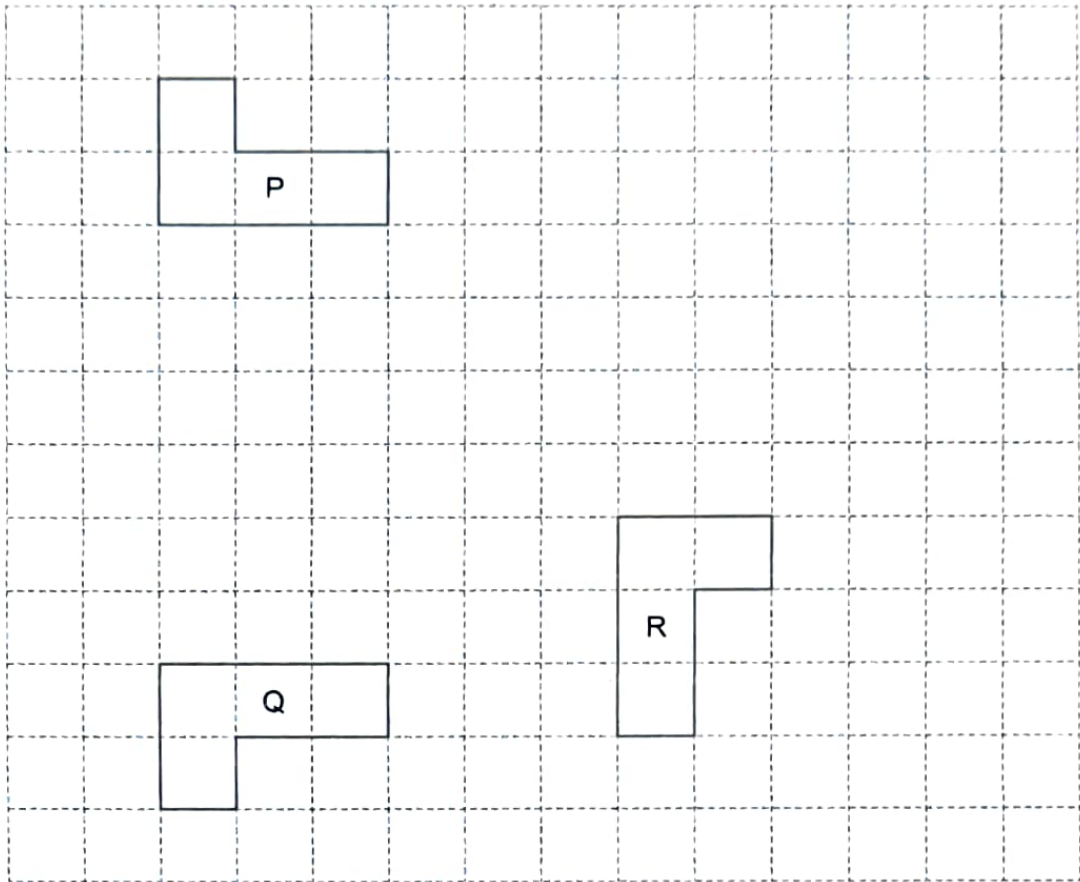
[1 mark]

Formula for area of a triangle = $\frac{1}{2} \times b \times h$,
So he hasn't halved his answer.

Turn over for the next question



- 17 Here are shapes P, Q and R.



- 17 (a) P is mapped to Q by a single transformation.

Circle the type of transformation.

[1 mark]

rotation

reflection

translation

enlargement

- 17 (b) P is mapped to R by a single transformation.

Circle the type of transformation.

[1 mark]

rotation

reflection

translation

enlargement



18

Kim buys pet food in 1.5 kg packs.

Her pet needs 0.8 kg of food each week.

She wants to have enough food for the next 14 weeks.

She already has two 1.5 kg packs.

Work out the smallest number of packs she needs to buy.

You **must** show your working.

[4 marks]

$$\text{Food for 14 weeks} = 0.8 \text{ Kg} \times 14 = 11.2 \text{ Kg}$$

$$11.2 - (2 \times 1.5) = 8.2 \text{ Kg}$$

$$8.2 \div 1.5 = 5.46 \dots$$

So Kim needs to buy 6 more packs.

Answer 6

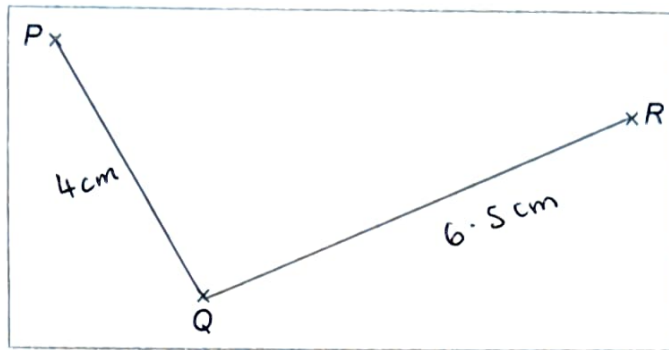
Turn over for the next question



19

A scale drawing shows the positions of P , Q and R .

Do not write
outside the
box



Not drawn
accurately

On the scale drawing

$$PQ = 4 \text{ cm} \quad QR = 6.5 \text{ cm}$$

The actual distance PQ is 50 metres less than the actual distance QR .

Work out the scale.

[3 marks]

$$\text{Scale: } QR - PQ = 2.5 \text{ cm.}$$

$$\text{So } 2.5 \text{ cm} = 50 \text{ m}$$

$$\Rightarrow 1 \text{ cm} = \frac{50}{2.5} = 20 \text{ m}$$

Answer 1 cm represents 20 metres



Do not write outside the box

20 (a) a and b are whole numbers.

$$a < 12 \quad b < 9$$

Work out the **largest** possible value of $2a + b$

[2 marks]

Let $a = 12, b = 8$

$$2(12) + 8 = 32$$

Answer 32

20 (b) x and y are both **negative** numbers.

Show that $\frac{y}{x}$ could equal 4

[1 mark]

Let $y = -8, x = -2$ then $\frac{y}{x} = \frac{-8}{-2} = 4$

Turn over for the next question



21 Jill puts 440 sweets into small bags, medium bags and large bags.



She uses

30 small bags

twice as many medium bags as large bags.

There are no sweets left over.

For the number of bags, work out the ratio small : medium : large

[4 marks]

$$30 \text{ small bags} = 30 \times 8 = 240 \text{ sweets}$$

$$440 - 240 = 200 \text{ sweets in } m + L \text{ bags.}$$

let $m = \text{no. of medium bags}$

$l = \text{no. of large bags, where } m = 2l$

Then, $12m + 16l = 200$

$$\Rightarrow 12(2l) + 16l = 200$$

$$\Rightarrow 40l = 200$$

$$\Rightarrow l = 5$$

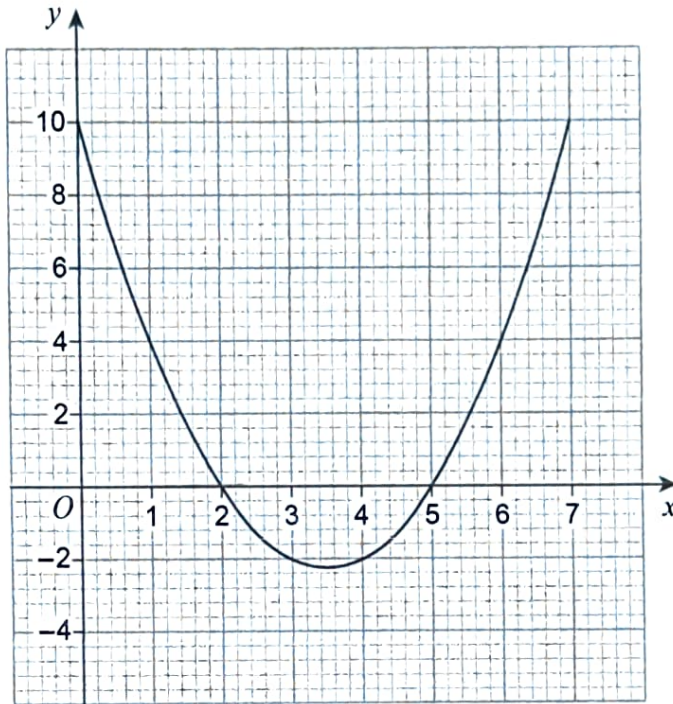
$$\Rightarrow m = 10$$

ratio = $30 : 10 : 5 = 6 : 2 : 1$

Answer 6 : 2 : 1



- 22 Here is the graph of $y = x^2 - 7x + 10$ for values of x from 0 to 7



- 22 (a) Write down the roots of $x^2 - 7x + 10 = 0$

[2 marks]

Answer 2 and 5

- 22 (b) Write down the x -coordinate of the turning point of the curve.

[1 mark]

$$(2 + 5) \div 2 = 3.5$$

Answer 3.5

7

Turn over ►



23

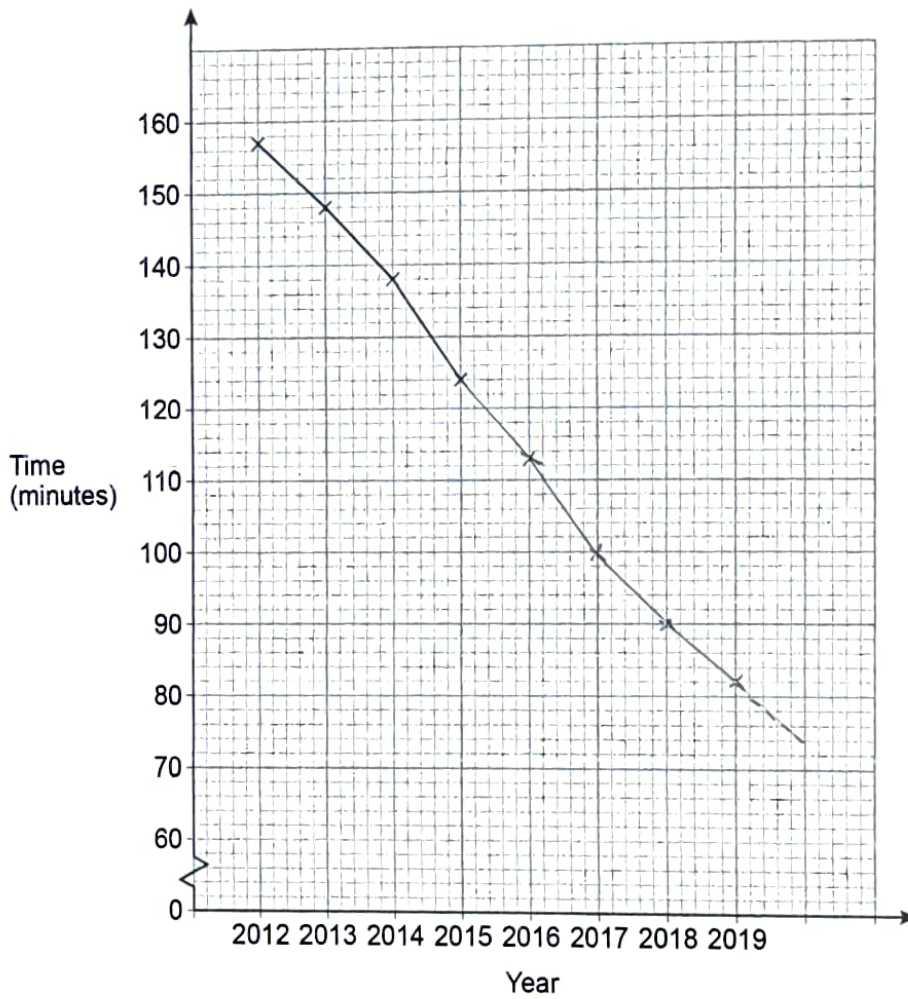
The time students spent watching TV was recorded.

The table shows the average daily time per student each year from 2012 to 2019

Year	2012	2013	2014	2015	2016	2017	2018	2019
Time (minutes)	157	148	138	124	113	100	90	82

A time series graph is drawn to represent the data.

The first four points have been plotted.



23 (a) Complete the graph.

[2 marks]

23 (b) Use the graph to estimate the average daily time per student in 2020

[1 mark]

Answer 74 minutes

24 Work out the highest common factor (HCF) of 75 and 105

[2 marks]

$$75 = 3 \times 5^2$$

$$105 = 3 \times 5 \times 7$$

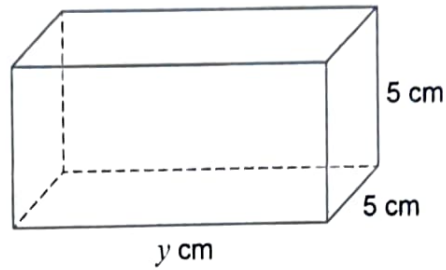
$$\text{HCF} = 3 \times 5 = 15$$

Answer 15

Turn over for the next question



25 Here is a cuboid.



25 (a) Assume that the total surface area of the cuboid is 200 cm^2

Work out the volume of the cuboid.

[3 marks]

$$\text{Surface area} = (5 \times 5) + (5 \times 5) + 4 \times (5 \times y) = 200$$

$$\Rightarrow 50 + 20y = 200$$

$$\Rightarrow 20y = 150$$

$$\Rightarrow y = 7.5$$

$$\text{Volume} = 7.5 \times 5 \times 5 = 187.5 \text{ cm}^3$$

Answer 187.5 cm^3



25 (b) In fact, the total surface area of the cuboid is smaller than 200 cm^2

What does this mean about the volume of the cuboid?

Tick **one** box.

[1 mark]

It is smaller than the answer to part (a)

It is bigger than the answer to part (a)

It is the same as the answer to part (a)

It could be any of the above

26 Here is some information about the time spent on social media by 50 people.

Time, t minutes	Number of people
$0 < t \leq 15$	2
$15 < t \leq 30$	9
$30 < t \leq 45$	31
$45 < t \leq 60$	8

Circle the number of people who spent more than 30 minutes.

[1 mark]

9

11

31

39



27

At a party there are 90 people.

48 are women and 42 are men.

Some women leave.

Some men arrive.

The ratio of women to men is now 10 : 11

Are there now more than 90 people at the party?

Tick **one** box.

Yes

No

Cannot tell

Show working to support your answer.

[2 marks]

$$\text{Original ratio : } 48 : 42 = 8 : 7$$

$$\text{Women now} = 40 \quad (40 \text{ is divisible by } 10)$$

$$\text{men now} = 44 \quad (44 \text{ is divisible by } 11)$$

$$40 : 44 = 10 : 11$$

$$40 + 44 = 84 < 90$$



28

Alex and Bev sat six tests, each with 50 marks.

The table shows their mean percentages after five tests.

Alex	60%
Bev	52%

After all six tests, their mean percentages were equal.

In the sixth test, Alex scored 24 out of 50

Work out Bev's score, out of 50, in the sixth test.

[4 marks]

$$\frac{24}{50} = 48\%$$

$$\text{Alex's mean score} = \frac{5 \times 60 + 48}{6} = 58\%$$

$$\text{Bev's mean score} = \frac{5 \times 52 + x}{6}, \text{ where } x \text{ is the 6}^{\text{th}} \text{ score (\%)}$$

$$\frac{260 + x}{6} = 58$$

$$\Rightarrow x = 58 \times 6 - 260 = 88\%$$

$$88\% \text{ of } 50 = 44$$

Answer 44 out of 50

Turn over for the next question

Turn over ►



- 29 A solid piece of silver has
mass 2.625 kilograms
volume 250 cm³

Work out the density of the piece of silver.
Give your answer in grams per cubic centimetre.

[2 marks]

$$\text{mass} = 2.625 \text{ kg} = 2625 \text{ g}$$

$$\text{density} = \frac{2625}{250} = 10.5 \text{ g/cm}^3$$

Answer 10.5 g/cm³

- 30 Work out the gradient of the straight line through (-2, 3) and (1, 9)

[2 marks]

$$\text{gradient} = \frac{9-3}{1-(-2)} = \frac{6}{3} = 2$$

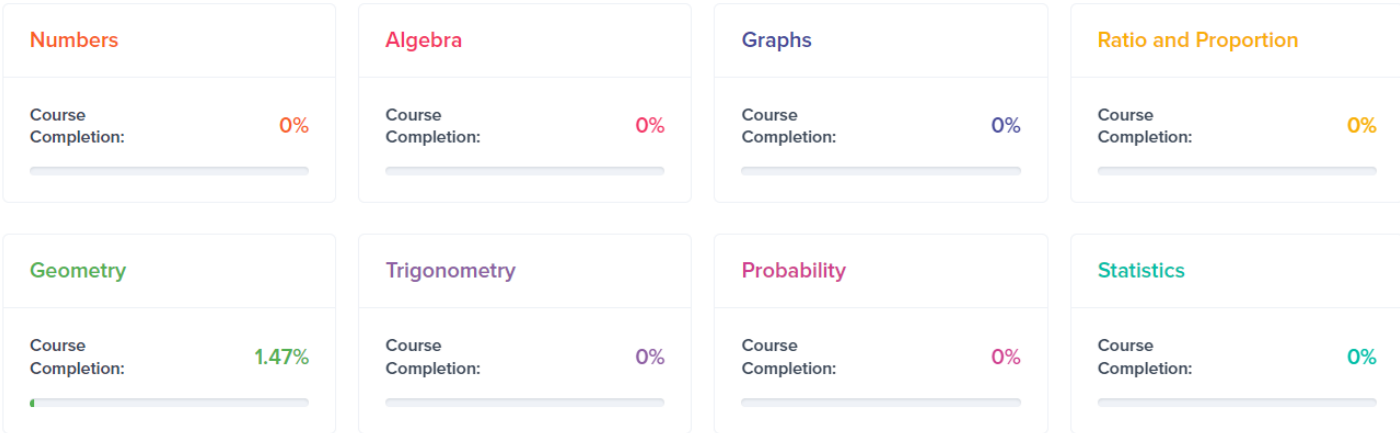
Answer 2

END OF QUESTIONS



MME.

GCSE Online Course



Track your progress through the course and your performance on practice questions

AVERAGE SCORE

Practice Questions



77% → -4%

Calculate the following:

$$\frac{(15 - 3)}{2} \div 3$$

Thousands of questions!

Over 100 topics!

Each topic contains revision videos, three practice tests and an online exam.

Item	Status	Latest Result
0% Completed	-	
2. Algebra	0% Completed	+
3. Graphs	0% Completed	-
3.1 Gradients of Straight Line Graphs		+
3.2 $y=mx+c$		+
3.3 Coordinates and Midpoints		+
3.4 Drawing Straight Line Graphs		+
3.5 Parallel Lines		-
3.6 Quadratic and Cubic Graphs		+
3.7 Turning Points of Quadratic Graphs		+
3.8 Circle Graphs and Tangents		+

Item	Status	Latest Result
Revision	Incomplete	-
Practice Tests	0/3 Complete	-
Online Exam	Incomplete	-