

Please check the examination details below before entering your candidate information			
Candidate surname		Other names	
Centre Number		Candidate Number	
Pearson Edexcel Level 1/Level 2 GCSE (9–1)		<div style="display: flex; justify-content: space-around;"> <div style="border: 1px solid black; width: 20px; height: 20px;"></div> <div style="border: 1px solid black; width: 20px; height: 20px;"></div> <div style="border: 1px solid black; width: 20px; height: 20px;"></div> <div style="border: 1px solid black; width: 20px; height: 20px;"></div> <div style="border: 1px solid black; width: 20px; height: 20px;"></div> </div> <div style="display: flex; justify-content: space-around;"> <div style="border: 1px solid black; width: 20px; height: 20px;"></div> <div style="border: 1px solid black; width: 20px; height: 20px;"></div> <div style="border: 1px solid black; width: 20px; height: 20px;"></div> <div style="border: 1px solid black; width: 20px; height: 20px;"></div> </div>	
<h2 style="margin: 0;">Tuesday 6 November 2018</h2>			
Morning (Time: 1 hour 30 minutes)		Paper Reference 1MA1/1F	
<h3 style="margin: 0;">Mathematics</h3> <p style="margin: 5px 0 0 0;">Paper 1 (Non-Calculator)</p> <p style="margin: 0 0 0 0;">Foundation Tier</p>			
You must have: Ruler graduated in centimetres and millimetres, protractor, pair of compasses, pen, HB pencil, eraser. Tracing paper may be used.			Total Marks <div style="border: 1px solid black; width: 40px; height: 40px; margin: 0 auto;"></div>

Instructions

- Use **black** ink or ball-point pen.
- **Fill in the boxes** at the top of this page with your name, centre number and candidate number.
- Answer **all** questions.
- Answer the questions in the spaces provided
– *there may be more space than you need.*
- You must **show all your working**.
- Diagrams are **NOT** accurately drawn, unless otherwise indicated.
- **Calculators may not be used.**



Information

- The total mark for this paper is 80
- The marks for **each** question are shown in brackets
– *use this as a guide as to how much time to spend on each question.*

Advice

- Read each question carefully before you start to answer it.
- Keep an eye on the time.
- Try to answer every question.
- Check your answers if you have time at the end.

Turn over ►

P55583A

©2018 Pearson Education Ltd.

6/7/17/17/17/17




Pearson

Answer ALL questions.

Write your answers in the spaces provided.

You must write down all the stages in your working.

- 1 Write the following numbers in order of size.
Start with the smallest number.

0.4⁰⁰ 0.02⁰ 0.37⁰ 0.152 0.2⁰⁰

0.02, 0.152, 0.2, 0.37, 0.4

(Total for Question 1 is 1 mark)

- 2 Write 0.6 as a percentage.

$$0.6 \times 100 = 60\%$$

..... %

(Total for Question 2 is 1 mark)

- 3 Here is a list of numbers.

3 5 7 12 15 18 20

From the list, write down a factor of 10

5

(Total for Question 3 is 1 mark)

- 4 Write 7829 to the nearest 1000

8 000

(Total for Question 4 is 1 mark)

DO NOT WRITE IN THIS AREA

DO NOT WRITE IN THIS AREA

DO NOT WRITE IN THIS AREA



- 5 (a) Work out $3 \times 5 + 7$

DO NOT WRITE IN THIS AREA

$$3 \times 5 = 15$$

$$15 + 7 = 22$$

(1)

- (b) Work out 2^3

$$2 \times 2 \times 2 = 8$$

(1)

- (c) Write brackets () in this statement to make it correct.

$$7 \times (2 + 3) = 35$$

(1)

(Total for Question 5 is 3 marks)

- 6 Sue has 2 cats.

Each cat eats $\frac{1}{4}$ of a tin of cat food each day.

Sue buys 8 tins of cat food.

Has Sue bought enough cat food to feed her 2 cats for 14 days?
You must show how you get your answer.

$$2 \times \frac{1}{4} = \frac{1}{2} \text{ tins per day}$$

$$14 \times \frac{1}{2} = 7 \text{ tins}$$

\therefore Yes she does










(Total for Question 6 is 3 marks)



P 5 5 5 8 3 A 0 3 2 4

- 7 There are only apple trees, cherry trees, pear trees and plum trees in an orchard.

The pictogram shows information about the numbers of apple trees, cherry trees and pear trees in the orchard.

Apple	  
Cherry	 
Pear	 
Plum	 

Key:



represents 4 trees

There is a total of 30 trees in the orchard.

Complete the pictogram.

$$\frac{30}{4} = 7.5 \text{ squares}$$

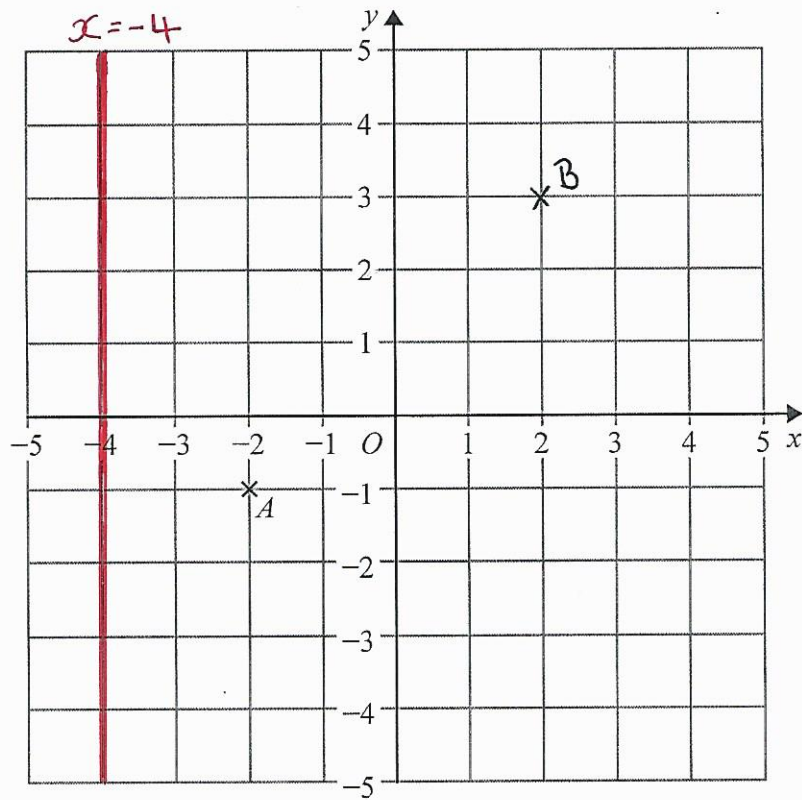
Currently there are $5\frac{3}{4}$

$\therefore 1\frac{3}{4}$ squares

(Total for Question 7 is 3 marks)



8



- (a) Write down the coordinates of point A.

(-2 , -1)
(1)

- (b) On the grid, mark with a cross (×) the point (2, 3)
Label this point B.

(1)

- (c) On the grid, draw the line with equation $x = -4$

(1)

(Total for Question 8 is 3 marks)



P 5 5 5 8 3 A 0 5 2 4

9 $g = 9$
 $h = 4$

Work out the value of $2g + 3h$

$$\begin{aligned} &(2 \times 9) + (3 \times 4) \\ &18 + 12 \\ &30 \end{aligned}$$

(Total for Question 9 is 2 marks)

10 Write down two prime numbers that have a sum of 32

Prime No: 2, 3, 5, 7, 11, 13, 17, 19, 23, 29

\therefore 3 and 29
or
13 and 19

(Total for Question 10 is 2 marks)

DO NOT WRITE IN THIS AREA

DO NOT WRITE IN THIS AREA

DO NOT WRITE IN THIS AREA



11 Here are some fractions.

$$\frac{9}{12}$$

$$\frac{6}{8}$$

$$\frac{18}{24}$$

$$\frac{10}{16}$$

$$\frac{15}{20}$$

One of these fractions is **not** equivalent to $\frac{3}{4}$

(a) Which fraction?

$$\frac{9}{12} = \frac{3}{4}$$

$\div 3$ (on 9 and 12)

$$\frac{6}{8} = \frac{3}{4}$$

$\div 2$ (on 6 and 8)

$$\frac{18}{24} = \frac{3}{4}$$

$\div 6$ (on 18 and 24)

$$\frac{10}{16} = \frac{5}{8}$$

$\div 2$ (on 10 and 16)

$$\frac{15}{20} = \frac{3}{4}$$

$\div 5$ (on 15 and 20)

$$\frac{10}{16}$$

(1)

(b) Work out

$$\frac{1}{12} + \frac{5}{6}$$

$\times 2$ (multiplying both fractions by 2)

$$\frac{1}{12} + \frac{10}{12}$$

$$\frac{11}{12}$$

(2)

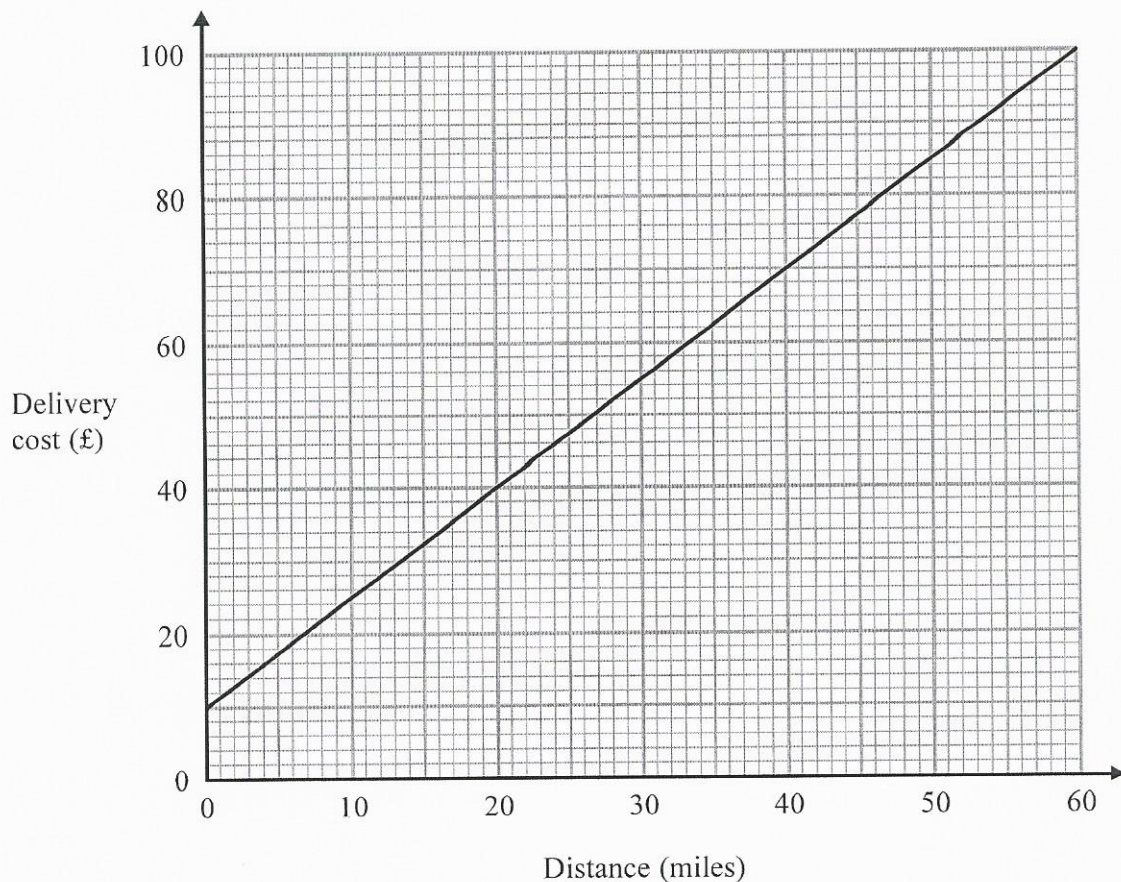
(Total for Question 11 is 3 marks)



P 5 5 5 8 3 A 0 7 2 4

12 Tom uses his lorry to deliver bricks.

You can use this graph to find the delivery cost for different distances.



For each delivery, there is a fixed charge plus a charge for the distance.

(a) How much is the fixed charge?

£ 10
(1)

Tom makes two deliveries of bricks.

The distance of one delivery is 20 miles more than the distance of the other delivery.

(b) Work out the difference between the two delivery costs.

$$20 \text{ miles} = £ 40$$

$$40 \text{ miles} = £ 70$$

$$70 - 40$$

£ 30
(2)

(Total for Question 12 is 3 marks)



13 Azmol, Ryan and Kim each played a game.

Azmol's score was four times Ryan's score.

Kim's score was half of Azmol's score.

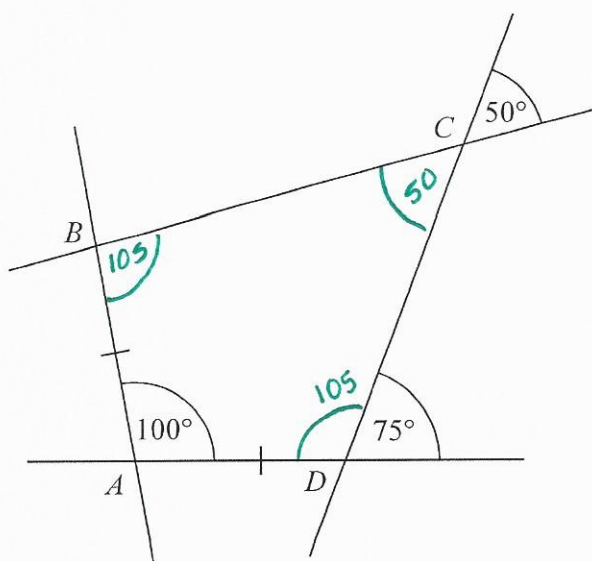
Write down the ratio of Azmol's score to Ryan's score to Kim's score.

A : R : K
4 : 1 : 2

(Total for Question 13 is 2 marks)



14 The diagram shows quadrilateral $ABCD$ with each of its sides extended.



$$AB = AD$$

Show that $ABCD$ is a kite.

Give a reason for each stage of your working.

$$\angle ADC = 105^\circ \text{ (Angles on a straight line)}$$

$$\angle BCD = 50^\circ \text{ (Vertically opposite angles)}$$

$$\angle ABC = 360 - (100 + 50 + 105) = 105 \text{ (Angles in a quadrilateral)}$$

Because $\angle ABC = \angle ADC$, the shape must be a kite

(Total for Question 14 is 4 marks)



15 Shahid is going to use these instructions to make a fizzy drink.

Mix 5 parts of orange juice
with 2 parts of lemonade

Shahid thinks that he has 300 ml of orange juice and 200 ml of lemonade.

(a) If Shahid is correct, what is the greatest amount of fizzy drink he can make?

$$300 \div 5 = 60 \text{ ml} \quad (1 \text{ part})$$

$$60 \times 2 = 120 \text{ ml}$$

$$300 + 120 = 420 \text{ ml}$$

..... ml
(3)

Shahid has 300 ml of orange juice but he only has 160 ml of lemonade.

(b) Does this affect the greatest amount of fizzy drink he can make?
Give a reason for your answer.

No because the maximum amount of lemonade he
can use is 120 ml.


(1)

(Total for Question 15 is 4 marks)




P 5 5 5 8 3 A 0 1 1 2 4

16 Here are two rectangles.



8 cm

6 cm



12 cm

10 cm

Jim says,

“The two rectangles are similar because $8 + 4 = 12$ and $6 + 4 = 10$ ”

Is Jim correct?

Explain your answer.

No, to be similar, the sides must be multiplied by the same amount.

(Total for Question 16 is 1 mark)

DO NOT WRITE IN THIS AREA

DO NOT WRITE IN THIS AREA

DO NOT WRITE IN THIS AREA



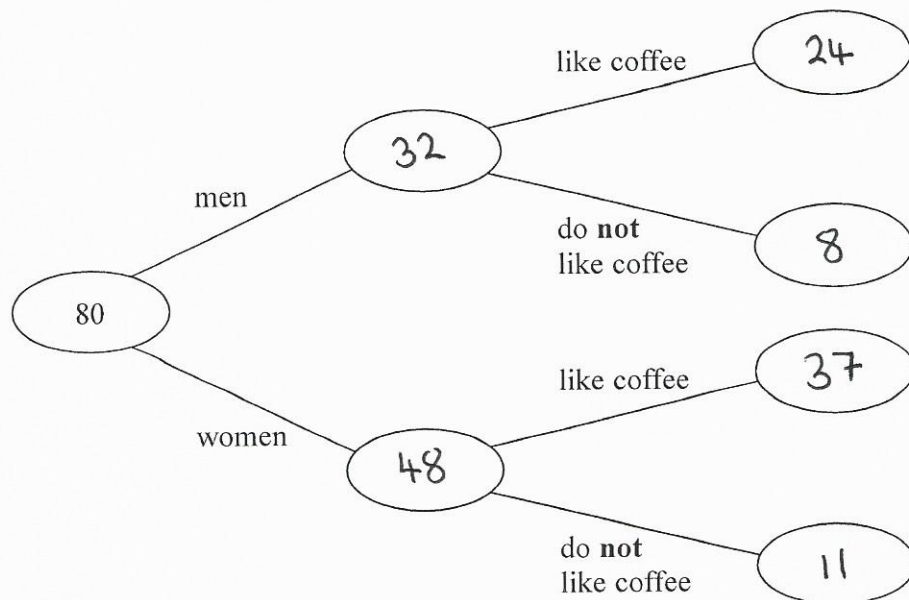
17 80 people are asked if they like coffee.

48 of these people are women.

61 of the 80 people like coffee.

8 of the men do **not** like coffee.

(a) Use this information to complete the frequency tree.



(3)

One of the people who like coffee is chosen at random.

(b) Find the probability that this person is a woman.

$$P(\text{woman who likes coffee}) = \frac{37}{61}$$

(2)

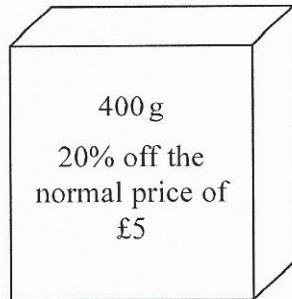
(Total for Question 17 is 5 marks)



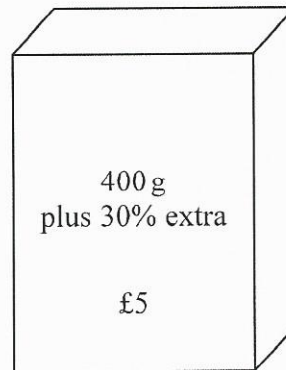
18 Food Mart and Jan's Store sell boxes of the same type of breakfast cereal.

Each shop has a special offer.

Food Mart



Jan's Store



Which box of cereal is the better value for money?
You must show your working.

Food Mart

$$\begin{array}{l} 400\text{g} = \pounds 4 \\ \div 4 \quad \downarrow \quad \div 4 \\ 100\text{g} = \pounds 1 \end{array}$$

Jan's Store: $400 + 30\% = 520\text{g}$

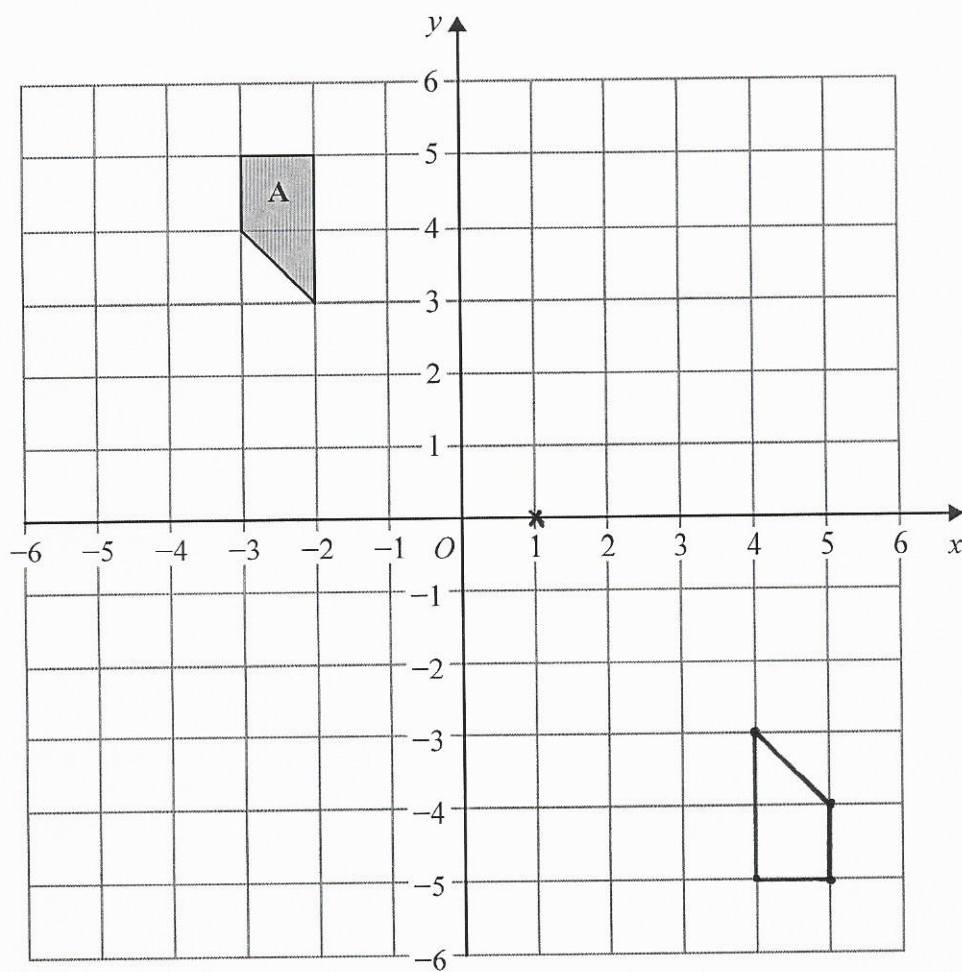
$$\begin{array}{l} 520\text{g} = \pounds 5 \\ \div 5.2 \quad \downarrow \quad \div 5.2 \\ 100\text{g} = \pounds 0.96 \end{array}$$

\therefore Jan's store is better value.

(Total for Question 18 is 4 marks)



19



Rotate shape A 180° about (1, 0)

(Total for Question 19 is 2 marks)



P 5 5 5 8 3 A 0 1 5 2 4

20 Work out the value of $\frac{3^7 \times 3^{-2}}{3^3}$

$$3^7 \times 3^{-2} = 3^{(7+(-2))} = 3^5$$

$$\frac{3^5}{3^3} = 3^{(5-3)} = 3^2$$

(Total for Question 20 is 2 marks)

21 $v^2 = u^2 + 2as$

$$u = 12 \quad a = -3 \quad s = 18$$

(a) Work out a value of v .

$$v^2 = (12)^2 + (2 \times -3 \times 18)$$

$$= 144 + -108$$

$$= 36$$

$$v = \sqrt{36} = 6$$

(2)

(b) Make s the subject of $v^2 = u^2 + 2as$

$$v^2 = u^2 + 2as$$

$$-u^2 \quad -u^2$$

$$v^2 - u^2 = 2as$$

$$\div 2a \quad \div 2a$$

$$\frac{v^2 - u^2}{2a} = s$$

(2)

(Total for Question 21 is 4 marks)



- 22 A bonus of £2100 is shared by 10 people who work for a company.
 40% of the bonus is shared equally between 3 managers.
 The rest of the bonus is shared equally between 7 salesmen.

One of the salesmen says,

“If the bonus is shared equally between all 10 people I will get 25% more money.”

Is the salesman correct?

You must show how you get your answer.

$$2100 \times \frac{40}{100} = 840$$

$$2100 - 840 = 1260$$

$$1260 \div 7 \Rightarrow 7 \overline{) 1260} \begin{array}{r} 180 \\ 140 \\ \hline 1260 \end{array} \quad (\text{Each salesmen gets } \pounds 180)$$

- If the bonus is shared between 10 people equally

$$2100 \div 10 = \pounds 210$$

- Difference is $\pounds 30$

$$\bullet \frac{30}{180} \times 100 = 16.6\%$$

\therefore No, he would get 16.6% more

(Total for Question 22 is 5 marks)



P 5 5 5 8 3 A 0 1 7 2 4

23 It would take 120 minutes to fill a swimming pool using water from 5 taps.

(a) How many minutes will it take to fill the pool if only 3 of the taps are used?

$$\begin{array}{l} \times 5 \quad 120 \text{ minutes} = 5 \text{ taps} \\ \quad \quad 600 \text{ minutes} = 1 \text{ tap} \\ \div 3 \quad 200 \text{ minutes} = 3 \text{ taps} \end{array} \quad \begin{array}{l} \downarrow \div 5 \\ \downarrow \times 3 \end{array}$$

..... minutes
(2)

(b) State one assumption you made in working out your answer to part (a).

- Each tap fills at the same rate.

(1)

(Total for Question 23 is 3 marks)

24 A plane travels at a speed of 213 miles per hour.

$$S = \frac{D}{T} \therefore T = \frac{D}{S}$$

(a) Work out an estimate for the number of seconds the plane takes to travel 1 mile.

$$T = \frac{D}{S} = \frac{1}{213} \quad (\text{This is time in hours})$$

$$\frac{1}{213} \approx \frac{1}{200}$$

$$\frac{1}{200} \times 60 \times 60 = 18 \text{ seconds}$$

..... seconds
(3)

(b) Is your answer to part (a) an underestimate or an overestimate?

Give a reason for your answer.

Overestimate, the speed is rounded down

(1)

(Total for Question 24 is 4 marks)



25 Solve the simultaneous equations

$$5x + y = 21$$

$$x - 3y = 9$$

$$5x + y = 21$$

$$x - 3y = 9 \quad (\times 5)$$

 \Rightarrow

$$5x + y = 21$$

- ①

$$5x - 15y = 45$$

- ②

Subtract ② from ①

$$16y = -24$$

$$\div 16 \quad \div 16$$

$$y = -1.5$$

Substitute y into equation 1 and solve

$$5x + (-1.5) = 21$$

$$+1.5 \quad +1.5$$

$$5x = 22.5$$

$$\div 5 \quad \div 5$$

$$x = 4.5$$

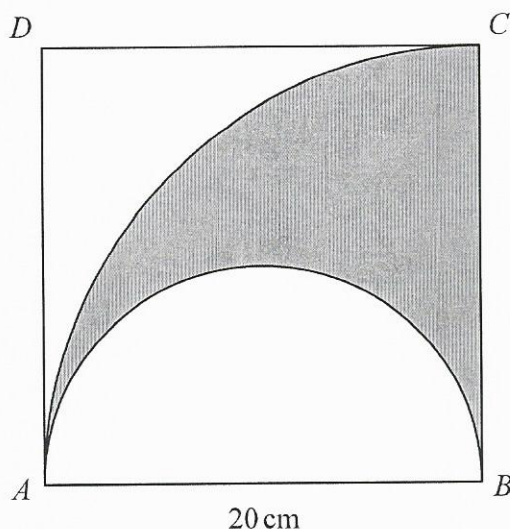
$$x = \dots\dots\dots$$

$$y = \dots\dots\dots$$

(Total for Question 25 is 3 marks)



- 26 The diagram shows a square $ABCD$ with sides of length 20 cm. It also shows a semicircle and an arc of a circle.



AB is the diameter of the semicircle.
 AC is an arc of a circle with centre B .

Show that $\frac{\text{area of shaded region}}{\text{area of square}} = \frac{\pi}{8}$

$$\text{Area of sector } ABC = \frac{1}{4} \times \pi \times 20^2 = \frac{1}{4} \times \pi \times 400 = 100\pi$$

$$\text{Area of semicircle } AB = \frac{1}{2} \times \pi \times 10^2 = \frac{1}{2} \times \pi \times 100 = 50\pi$$

$$\text{Area shaded} = 100\pi - 50\pi = 50\pi$$

$$\frac{\text{Area shaded}}{\text{Area square}} = \frac{50\pi}{400} = \frac{\pi}{8}$$

(Total for Question 26 is 4 marks)



27 Amina has two bags.

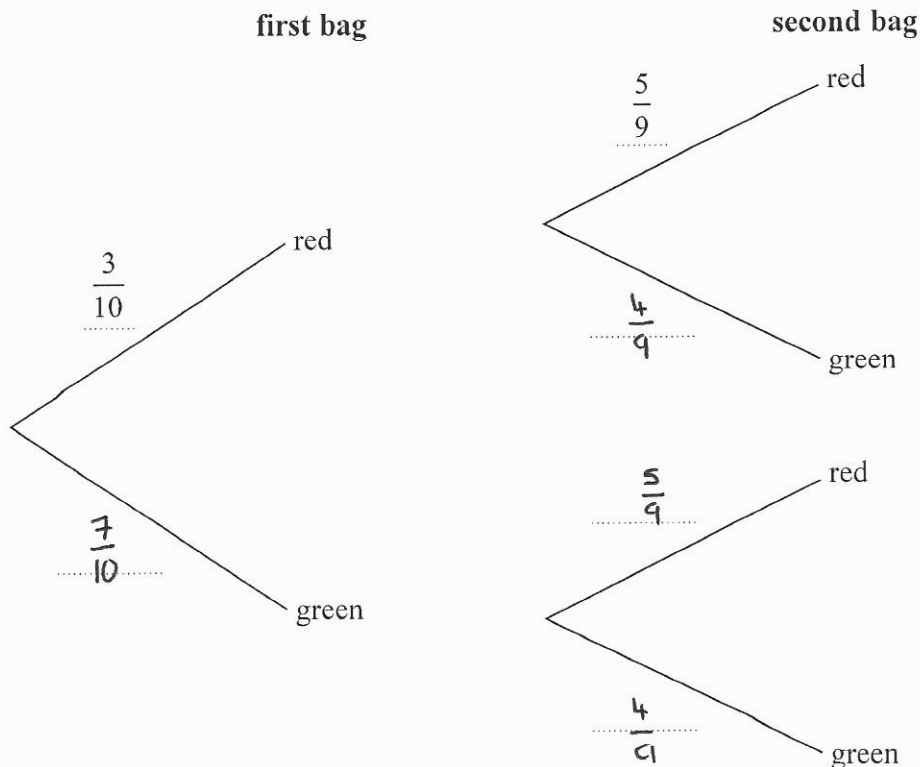
In the first bag there are 3 red balls and 7 green balls.

In the second bag there are 5 red balls and 4 green balls.

Amina takes at random a ball from the first bag.

She then takes at random a ball from the second bag.

(a) Complete the probability tree diagram.



(2)

(b) Work out the probability that Amina takes two red balls.

$$P(R,R) = \frac{3}{10} \times \frac{5}{9} = \frac{15}{90}$$

This can be cancelled to $\frac{1}{6}$ but both fractions will get the mark.

(2)

(Total for Question 27 is 4 marks)



P 5 5 5 8 3 A 0 2 1 2 4

28 The size of each interior angle of a regular polygon is 11 times the size of each exterior angle.

Work out how many sides the polygon has.



$$x + 11x = 180$$

$$12x = 180$$

$$\div 12 \quad \div 12$$

$$x = 15$$

$$\text{Exterior} = \frac{360}{\text{sides}}$$

$$\therefore \text{sides} = \frac{360}{\text{Ext}} = \frac{360}{15} = 24$$

(Total for Question 28 is 3 marks)

TOTAL FOR PAPER IS 80 MARKS

DO NOT WRITE IN THIS AREA

DO NOT WRITE IN THIS AREA

DO NOT WRITE IN THIS AREA

