

Year 7 mathematics 2007

Mental mathematics test

First name _____

Last name _____

School _____

Total
marks

Practice question

		29	
--	--	----	--

Time: 5 seconds

1		<input type="text"/>
---	--	----------------------

2		<input type="text"/>
---	--	----------------------

3		19	41	<input type="text"/>
---	--	----	----	----------------------

4		$15 - n = 6$	<input type="text"/>
---	--	--------------	----------------------

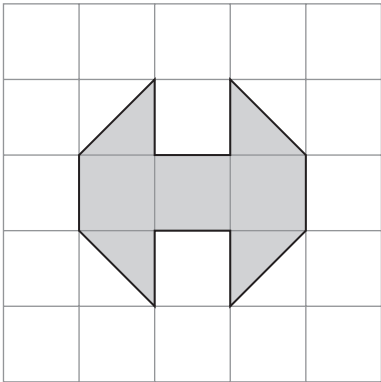
5	mm	6cm	<input type="text"/>
---	----	-----	----------------------


6		8	7	<input type="text"/>
---	--	---	---	----------------------

Time: 10 seconds

7		Blue eyes	Green eyes
	Blonde hair	Jack	Molly
	Brown hair	Raj	Ali
			<input type="text"/>

8		70	90	30	<input type="text"/>
---	--	----	----	----	----------------------

9	
	<input type="text"/>

10	 = 4 people
	28 people
circles	
<input type="text"/>	

Time: 10 seconds continued

11

%

35%

25%

11

12

3608, 3708, 3808, ...

12

13

3151

731

13

14

20

32

14

Time: 15 seconds

15

5 × 7

9

15

16

10th

19th

16

17

£

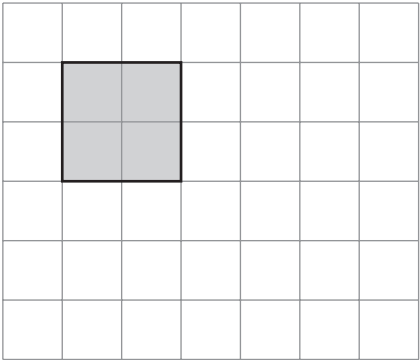
80p

£5

17

Time: 15 seconds continued

18



18

19

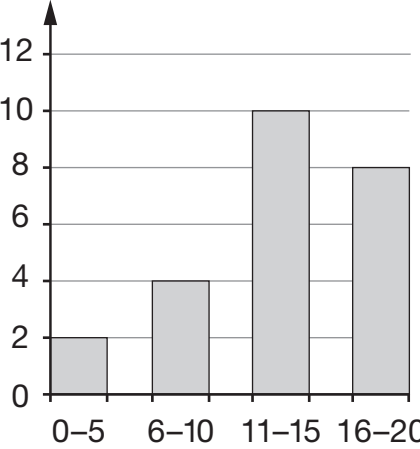
pm

2:00pm

19

20

Number of pupils



Number of marks

Number of marks	Number of pupils
0-5	2
6-10	4
11-15	10
16-20	8

pupils

20