

Please write clearly in block capitals.

Centre number

Candidate number

Surname _____

Forename(s) _____

Candidate signature _____

I declare this is my own work.

GCSE GEOGRAPHY

Paper 1 Living with the physical environment

Friday 17 May 2024

Afternoon

Time allowed: 1 hour 30 minutes

Materials

For this paper you must have:

- the OS map key insert (enclosed)
- a pencil
- a rubber
- a ruler.

You may use a calculator.

Instructions

- Use black ink or black ball-point pen.
- Fill in the boxes at the top of this page.

Answer **all** questions in Section A and Section B.

Answer **two** questions in Section C.

Question 3 (Coasts), Question 4 (Rivers), Question 5 (Glacial)

For Examiner's Use	
Question	Mark
1	
2	
3	
4	
5	
TOTAL	

- You must answer the questions in the spaces provided. Do **not** write outside the box around each page or on blank pages.
- If you need additional extra space for your answer(s), use the lined pages at the end of this book. Write the question number against your answer(s).
- Do all rough work in this book. Cross through any work you do not want to be marked.

Information

- The marks for questions are shown in brackets.
- The total number of marks available for this paper is 88.
- Spelling, punctuation, grammar and specialist terminology will be assessed in Question **01.11**.



For the multiple-choice questions, shade the circle next to the correct answer.

CORRECT METHOD



WRONG METHODS



If you want to change your answer you must cross out your original answer as shown.



If you wish to return to an answer previously crossed out, ring the answer you now wish to select as shown.



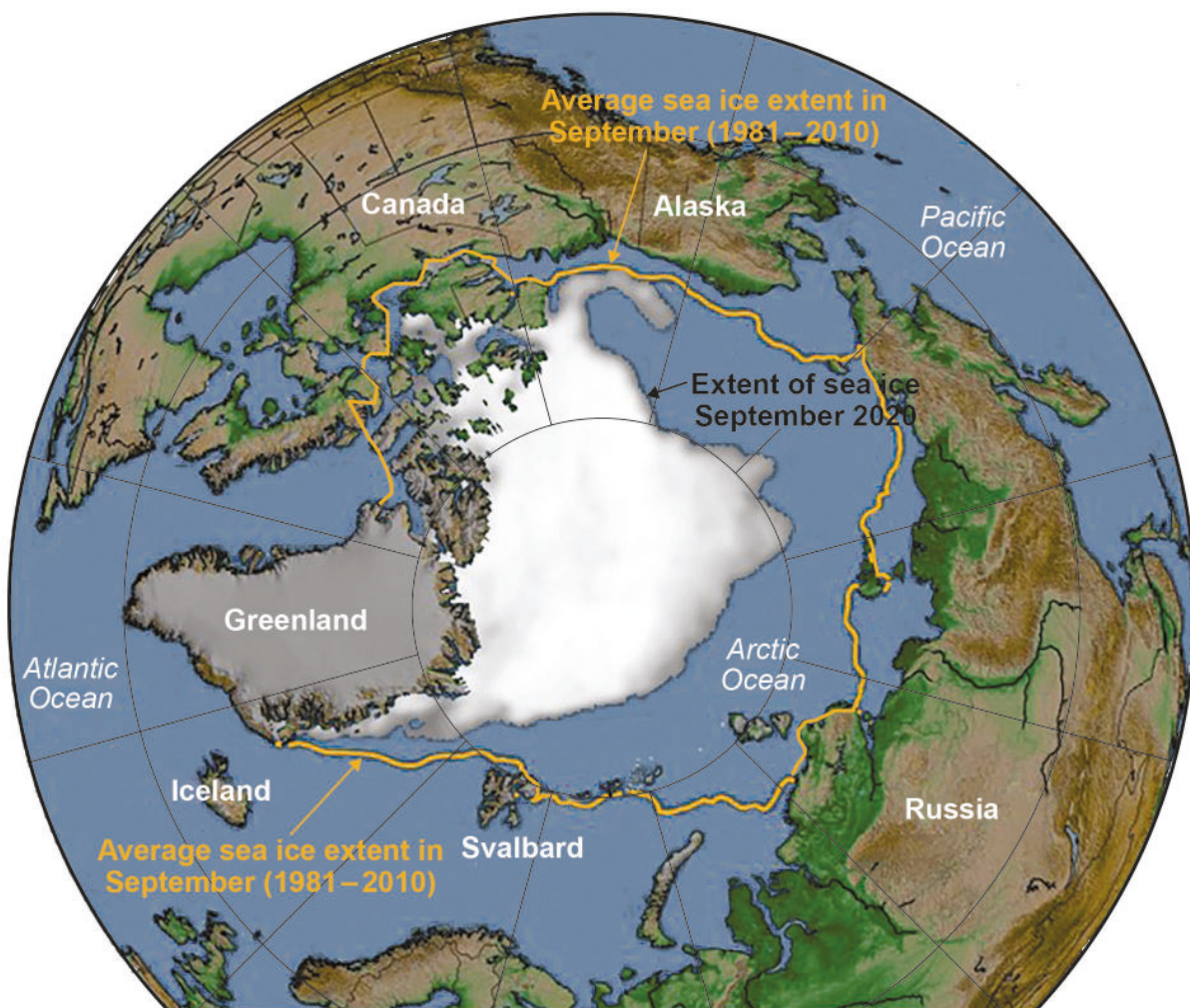
Section A The challenge of natural hazards

Answer **all** questions in this section.

Question 1 The challenge of natural hazards

Study **Figure 1**, a map showing the extent of Arctic sea ice in September 2020 and the average extent of Arctic sea ice in September from 1981 to 2010.

Figure 1



- 0 1 . 1** Using **Figure 1**, compare the extent of Arctic sea ice in September 2020 with the average extent of Arctic sea ice in September from 1981 to 2010.

[2 marks]

Study **Figure 2**, data showing changes in the volume of Arctic sea ice from 1980 to 2020.

Figure 2All figures are km³

Year	1980	1990	2000	2010	2020
April	32 200	29 900	27 400	23 900	22 600
September	16 300	13 800	11 000	4 700	4 400

- 0 1 . 2** Using **Figure 2**, calculate the mean volume of Arctic sea ice in **April** from 1980 to 2020.

Shade **one** circle only.

[1 mark]

- A** 24 100 km³
- B** 25 400 km³
- C** 26 300 km³
- D** 27 200 km³

- 0 1 . 3** Using **Figure 2**, calculate the difference in the volume of Arctic sea ice from **September 1980** to **September 2020**.

[1 mark]

_____ km³

Turn over ►



0 1 . 4 Suggest how changes in the extent of Arctic sea ice are evidence of climate change. **[2 marks]**

Study **Figure 3**, a poster and some news headlines about the United Nations (UN) International Climate Change Conference held in Glasgow in November 2021.

Figure 3



0 1 . 5 'International agreements are essential for managing climate change.'

Do you agree?

Explain your answer. Use **Figure 3** and your own understanding.

[4 marks]



*Do not write
outside the
box*

Extra space _____

Question 1 continues on the next page

Turn over ►



Study **Figure 4**, a map showing tectonic plates and plate margins near South America.

Figure 4

Map not reproduced here due to third party copyright restrictions.

0 1 . 6 Using **Figure 4**, name the type of plate margin shown at **X**.

[1 mark]

0 1 . 7 Using **Figure 4**, which statement describes the movement of plates at **X**?

Shade **one** circle only.

[1 mark]

A The Nazca Plate is moving away from the South American Plate.

B The Nazca Plate is moving under the South American Plate.

C The South American Plate is moving alongside the Nazca Plate.

D The South American Plate is moving under the Antarctic Plate.



Study either **Figure 5** or **Figure 6**.

Figure 5 – a photograph showing the effects of a recent volcanic eruption in La Palma



Figure 6 – a photograph showing the effects of a recent earthquake in the Philippines



0 1 . 1 0 Using **Figure 5** or **Figure 6**, give **two** primary effects of **either** volcanic eruptions or earthquakes.

[2 marks]

1 _____

2 _____

Question 1 continues on the next page

Turn over ►



Do not write
outside the
box

Extra space _____

33

End of Section A

Turn over for Section B

Turn over ►



Section B The living worldAnswer **all** questions in this section.**Question 2 The living world**

0	2	1
---	---	---

 Outline **one** reason why there are high levels of biodiversity in the tropical rainforest.**[2 marks]**

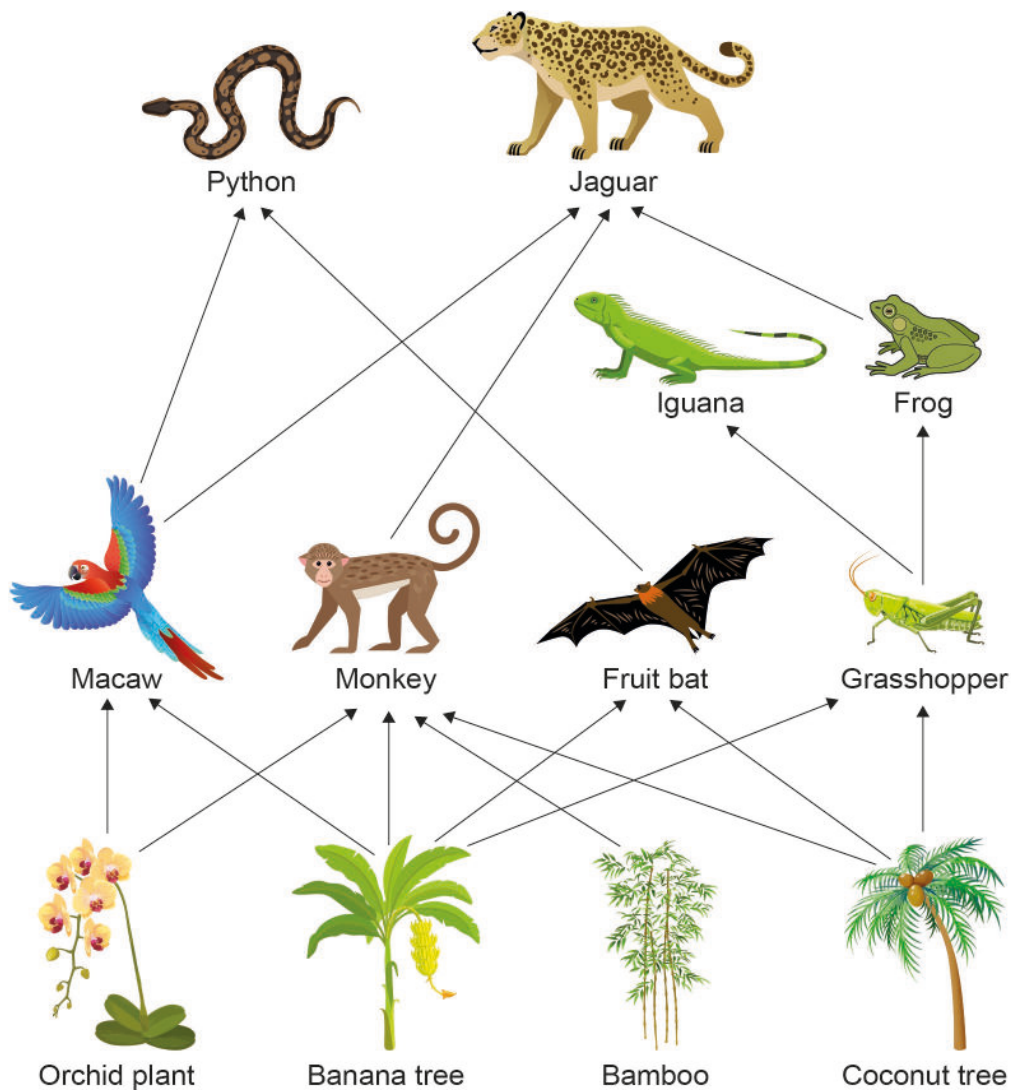
0	2	2
---	---	---

 State **one** threat to biodiversity in the tropical rainforest.**[1 mark]**



Study **Figure 8**, a diagram showing how different plants and animals rely on each other as sources of food in the tropical rainforest.

Figure 8



0 2 . 3 Complete the following paragraph by choosing the correct words from the list below.

chain consumer increase producer reduce web

Figure 8 is an example of a food _____. Orchid plants are an example of a _____. An increase in the number of jaguars is likely to _____ the number of monkeys.

[3 marks]

Turn over ►



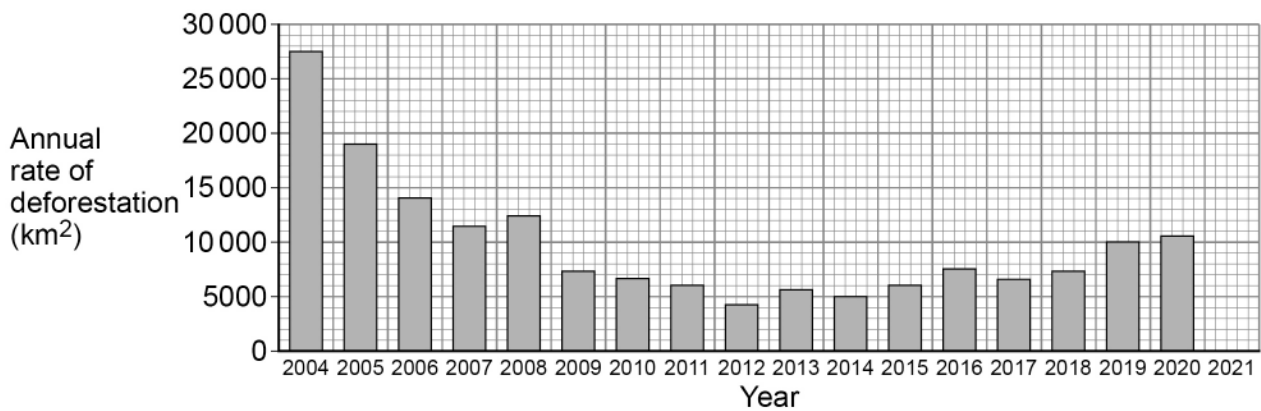
Figure 9 is a graph showing annual rates of deforestation in the Amazon rainforest, 2004–2021.

0 2 . 4 Complete **Figure 9** below using the following data.

[1 mark]

Year	Annual rate of deforestation (km ²)
2021	13 000

Figure 9



0 2 . 5 Using **Figure 9**, which of the following statements is true?

Shade **one** circle only.

[1 mark]

- A** Annual rate of deforestation has increased every year since 2010.
- B** Annual rate of deforestation was highest in 2020.
- C** Annual rate of deforestation was lowest in 2012.
- D** Annual rate of deforestation was twice as high in 2005 as it was in 2020.



Study either **Figure 10** or **Figure 11**, photographs showing soils in a hot desert and cold environment.

Figure 10 – hot desert



Figure 11 – cold environment



0 2 . 8 Using **either Figure 10** or **Figure 11**, suggest **one** way the soil can be affected by the climate in **either** a hot desert **or** a cold environment.

[1 mark]

Study **either Figure 12** or **Figure 13**, photographs showing plants and animals in hot desert and cold environments.

Figure 12 – hot desert



Figure 13 – cold environment



*Do not write
outside the
box*

25

End of Section B



Section C Physical landscapes in the UKAnswer **two** questions from the following:

Question 3 (Coasts), Question 4 (Rivers), Question 5 (Glacial).

Question 3 Coastal landscapes in the UK**0 3 . 1** What does 'managed retreat' mean?Shade **one** circle only.**[1 mark]**

- A** Allowing the sea to flood or erode an area of low-value land.
- B** Building up dunes and increasing vegetation.
- C** Using concrete or artificial structures to defend against natural processes.
- D** Working with natural processes to restore beaches.

Question 3 continues on the next page**Turn over ►**

Study **Figure 14**, a 1:50 000 Ordnance Survey map of Dawlish Warren, Devon.

Figure 14



0 3 . 2 Using **Figure 14**, which **one** of the following grid squares shows a shingle beach?

Shade **one** circle only.

[1 mark]

- A** 9779
- B** 0079
- C** 9777
- D** 9980

0 3 . 3 Using **Figure 14**, identify **one** method of hard engineering shown in grid square 9879.

[1 mark]



0 3 . 4 The area labelled **X** shows a coastal spit.

Using **Figure 14**, describe the size and shape of the spit.

[2 marks]

Size _____

Shape _____

0 3 . 5 You have studied a coastal management scheme in the UK.

Explain the effects of the scheme.

[4 marks]

Extra space _____

Question 3 continues on the next page

Turn over ►



Study **Figure 15**, a photograph showing features of a coastal landscape.

Figure 15



0 3 . 6 Explain how coastal landscapes are formed by different processes.

Use **Figure 15** and your own understanding.

[6 marks]



*Do not write
outside the
box*

Extra space

15

End of Question 3
Turn over for Question 4

Turn over ►



Question 4 River landscapes in the UK

0 4 . 1 Which **one** of the following factors is most likely to cause river levels to rise quickly after heavy rainfall?

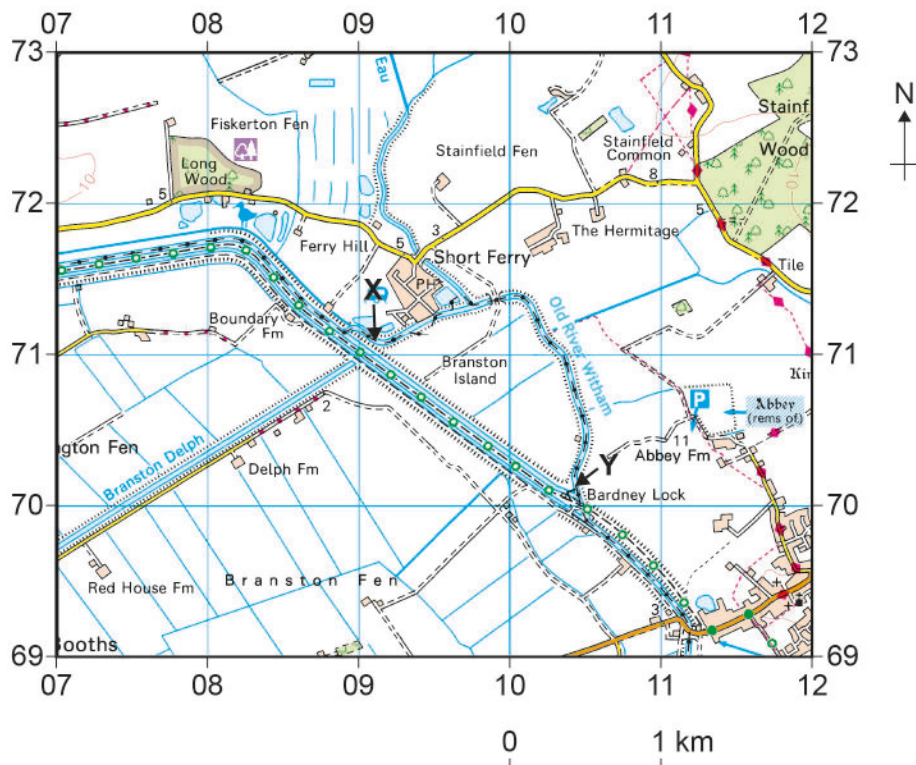
Shade **one** circle only.

[1 mark]

- A** Gentle slopes
- B** Forested land
- C** Permeable rocks
- D** Steep slopes

Study **Figure 16**, a 1:50 000 Ordnance Survey map showing part of the River Witham in Lincolnshire.

Figure 16



0 4 . 2 Using **Figure 16**, measure the distance **along the Old River Witham** between point **X** and point **Y**.

Shade **one** circle only.

[1 mark]

A 1.2 km

B 2.0 km

C 2.8 km

D 3.6 km

0 4 . 3 Using **Figure 16**, identify **one** method of hard engineering shown in grid square 0970.

[1 mark]

0 4 . 4 Using **Figure 16**, describe the relief and drainage shown in grid square 0870.

[2 marks]

Relief (height and shape of the land) _____

Drainage (water features) _____

Question 4 continues on the next page

Turn over ►



0 4 . 5 You have studied a flood management scheme in the UK.

Explain why the scheme was needed and how it works.

[4 marks]

Extra space

Study **Figure 17**, a photograph showing features of a floodplain.

Figure 17



Question 5 Glacial landscapes in the UK

0 5 . 1 What does abrasion mean?

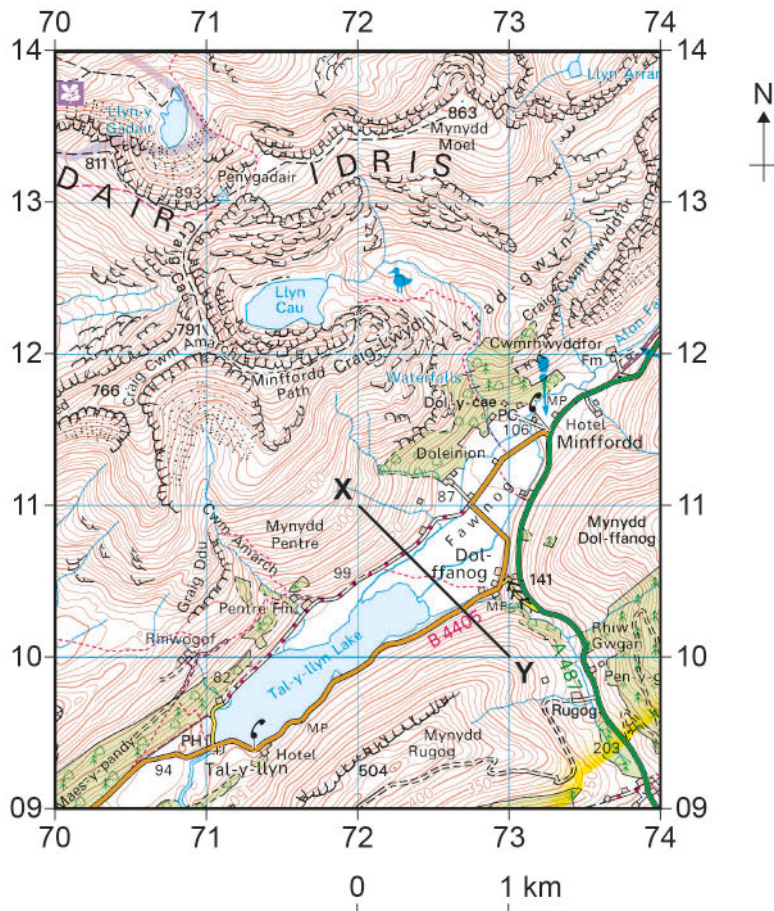
Shade **one** circle only.

[1 mark]

- A** Glacial ice moves in a circular motion causing hollows to form in the landscape.
- B** Meltwater freezes beneath the ice and tears away pieces of loose rock.
- C** Rocks trapped beneath the glacier scratch and smooth the bedrock underneath.
- D** Water freezes in cracks and expands, causing the rock to break down.

Study **Figure 18**, a 1:50 000 Ordnance Survey map extract of part of Snowdonia.

Figure 18



0 5. **2** Using **Figure 18**, which grid square shows part of a ribbon lake?

Shade **one** circle only.

[1 mark]

A 7013

B 7310

C 7109

D 7212

0 5. **3** Using **Figure 18**, name **one** landform of glacial erosion shown in grid square 7112.

[1 mark]

0 5. **4** Using **Figure 18**, describe the shape of the valley and measure the width of the valley floor between points **X** and **Y**.

[2 marks]

Shape of valley _____

Width of valley floor _____ m

Question 5 continues on the next page

Turn over ►



0 5 . 5 You have studied a glaciated upland area in the UK.

Explain why this area attracts tourists.

[4 marks]

Extra space



*Do not write
outside the
box*

Extra space

15

END OF QUESTIONS



There are no questions printed on this page

**DO NOT WRITE ON THIS PAGE
ANSWER IN THE SPACES PROVIDED**



