

Surname	Centre Number	Candidate Number
First name(s)		0



GCSE

3310U40-1



S24-3310U40-1

MONDAY, 3 JUNE 2024 – MORNING

**MATHEMATICS – NUMERACY
UNIT 2: CALCULATOR-ALLOWED
INTERMEDIATE TIER**

1 hour 45 minutes

ADDITIONAL MATERIALS

A calculator will be required for this paper.
A ruler, a protractor and a pair of compasses may be required.

INSTRUCTIONS TO CANDIDATES

Use black ink or black ball-point pen. Do not use gel pen or correction fluid.
You may use a pencil for graphs and diagrams only.
Write your name, centre number and candidate number in the spaces at the top of this page.
Answer **all** the questions in the spaces provided.
If you run out of space, use the additional page at the back of the booklet. Question numbers must be given for all work written on the additional page.
Take π as 3.14 or use the π button on your calculator.

For Examiner's use only		
Question	Maximum Mark	Mark Awarded
1.	4	
2.	11	
3.	7	
4.	7	
5.	11	
6.	7	
7.	8	
8.	12	
9.	13	
Total	80	

3310U401
01

INFORMATION FOR CANDIDATES

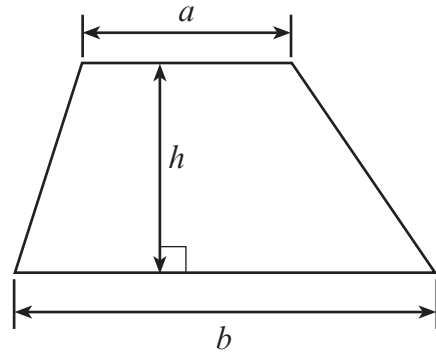
You should give details of your method of solution when appropriate.
Unless stated, diagrams are not drawn to scale.
Scale drawing solutions will not be acceptable where you are asked to calculate.
The number of marks is given in brackets at the end of each question or part-question.
In question 3, the assessment will take into account the quality of your linguistic and mathematical organisation, communication and accuracy in writing.



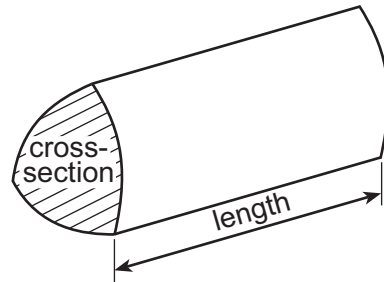
JUN243310U40101

Formula List – Intermediate Tier

Area of trapezium = $\frac{1}{2}(a + b)h$



Volume of prism = area of cross-section \times length



2. Idris flies from Cardiff to Faro, in Portugal.

(a) The actual flying time is 133 minutes.
The plane flies at an average speed of 8 miles per minute.

(i) Calculate the flying distance between Cardiff and Faro.
Give your answer in miles. [2]

.....

.....

.....

.....

(ii) Calculate the plane's average speed in **miles per hour**. [2]

.....

.....

.....

.....

(b) Idris takes a cabin bag on board his flight.
His bag measures 55 cm by 40 cm by 23 cm.
The label on his cabin bag says,

Bag capacity is greater than 48 litres.

Is this label correct?

Yes

No

You must show all your working and give a reason for your answer. [3]

.....

.....

.....

.....

.....

.....



- (c) Idris looks out of the aeroplane window.
He notices a village below.
Idris takes a photograph of the village to try to work out where he is.
From the photograph, he draws a sketch including some parallel streets.



His sketch is shown below.

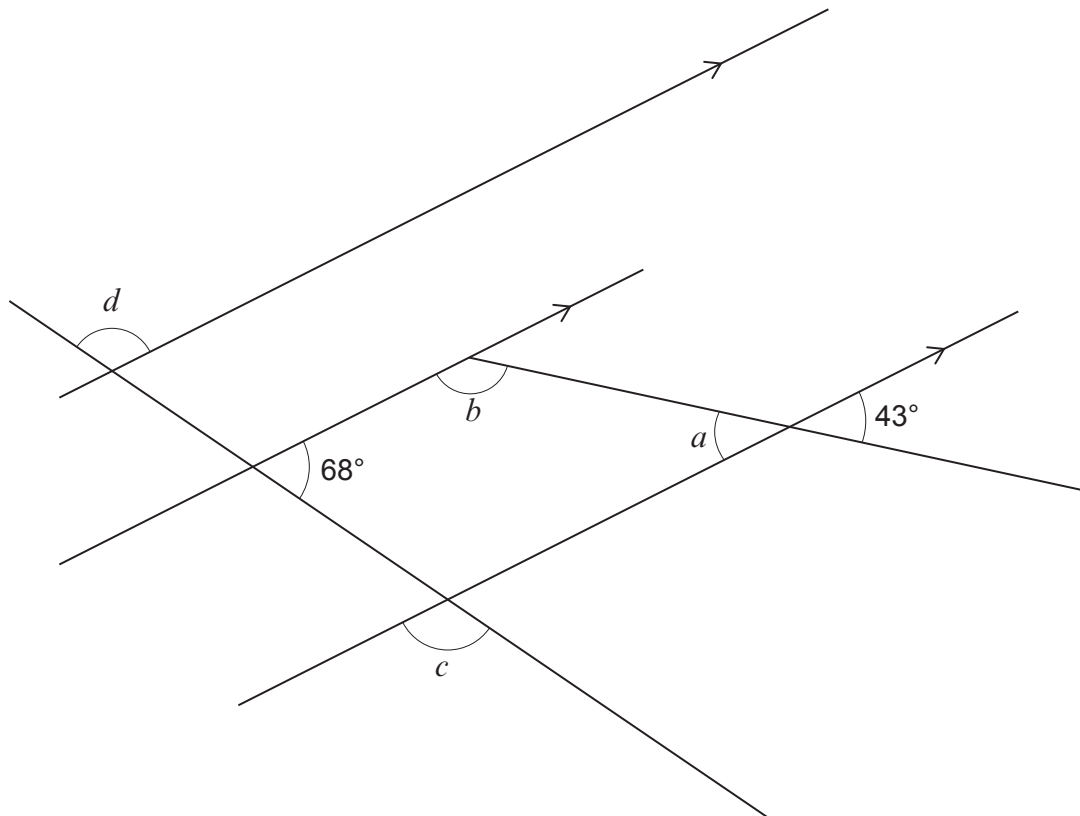


Diagram not drawn to scale

Find the size of each of the angles a , b , c and d .

[4]

.....

.....

$$a = \text{.....}^\circ \quad b = \text{.....}^\circ \quad c = \text{.....}^\circ \quad d = \text{.....}^\circ$$




5. The Severn Bridge was built in 1966 to allow vehicles to travel between England and Wales.

The bridge has a width of 23 m and a total length of 1600 m.
The section of the bridge between the two towers is 988 m long.

The tarmac road surface is 0.035 m thick.

The cables from the towers to support the road are made from 18 000 miles of wire.



- (a) What fraction of the total length of the bridge is the section between the two towers?
Give your fraction in its simplest form. [2]

.....

.....

.....

.....

- (b) Calculate the length of the wire used to make the cables in **kilometres**. [2]

.....

.....

.....

.....



(c) The cost of tarmac is £250 per m³.

Calculate the cost of the volume of tarmac needed to resurface the total length of the Severn Bridge. [3]

.....

.....

.....

.....

.....

.....

(d) Some of the tolls charged for a car to enter Wales are given in the table below.

Year	2004	2009	2014	2019
Toll for a car	£4.60	£5.40	£6.40	FREE

In which of the following 5-year periods was there the greatest percentage increase in the toll?

2004 to 2009

2009 to 2014

2014 to 2019

State the percentage increase for this 5-year period. You must show all your working. [4]

.....

.....

.....

.....

.....

.....

.....

.....

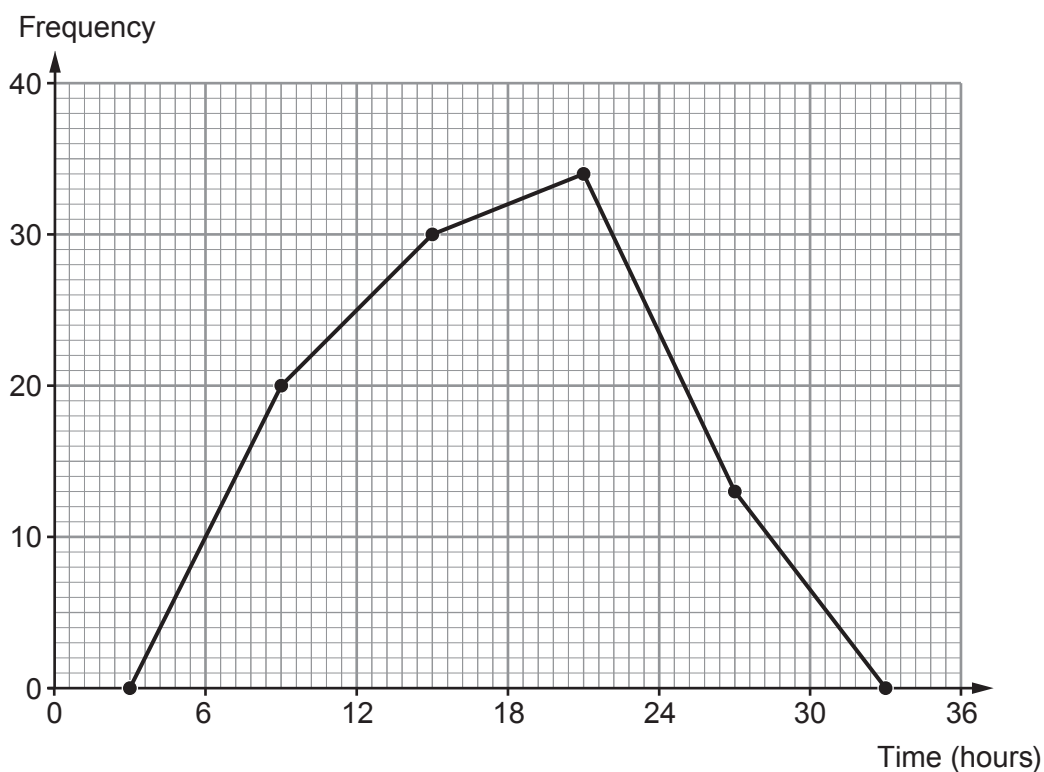
The greatest percentage increase in the toll was in the period to

The percentage increase was

3310U401
09



6. (a) A survey was carried out to find the total time people took to read the book 'Wales is a Celtic Country'. The results are shown in the frequency polygon below.



- (i) Which is the modal group?
Circle your answer.

[1]

18 to 24 hours 21 hours 12 to 18 hours 34 hours 30 to 36 hours

- (ii) How many people took part in the survey?
Circle your answer.

[1]

34 30 33 97 108

.....

.....



(iii) How many of the people in the survey took 24 hours or more to read this book?
Circle your answer. [1]

13 34 47 24 84

.....
.....

(iv) Did any of the people in the survey take less than 6 hours to read this book?

Yes No Can't tell

You must give a reason for your answer. [1]

.....
.....
.....
.....

(b) Four books are placed in a stack.



The thickness of each of the books is as follows:

22 mm 25 mm 29 mm 31 mm

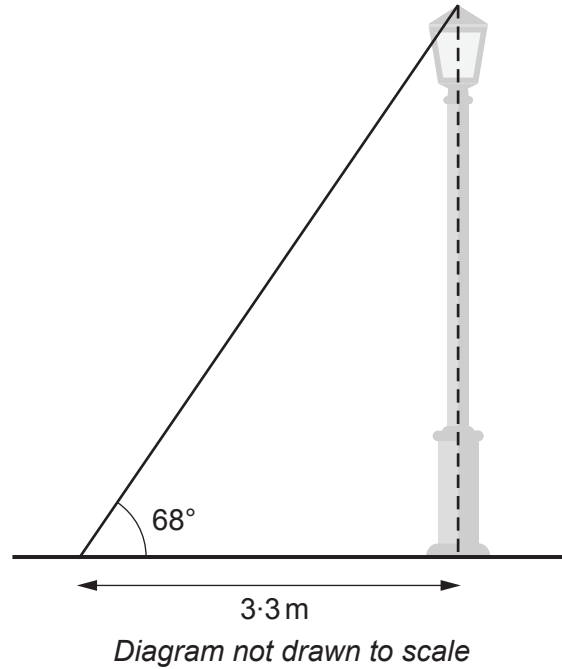
The thickness of each book is measured **correct to the nearest mm**.

Show that the total height of the stack of these four books cannot be more than 109 mm. [3]

.....
.....
.....
.....
.....
.....
.....



- (b) A lamp post is vertical and stands on horizontal ground.
The angle of elevation of the top of the lamp post is 68° when measured from a point 3.3 m from the centre of the base of the lamp post.



Calculate the height of the lamp post.

[3]

.....

.....

.....

.....

.....

.....

.....

.....



8. (a) 50 people living by the sea were asked how often they went for a walk along the sea wall each week.

The results were as follows:



Number of walks each week	Frequency
0 to 2	8
3 to 5	12
6 to 8	20
9 to 13	4
14 to 18	6

Calculate an estimate of the mean number of walks per person each week. [4]

.....

.....

.....

.....

.....

.....

- (b) High tide in the morning is, on average, 35 minutes later each day. The morning high tide on 3rd March was at 08:03. At what time was the morning high tide on 1st March? [1]

.....

.....

.....

.....

.....

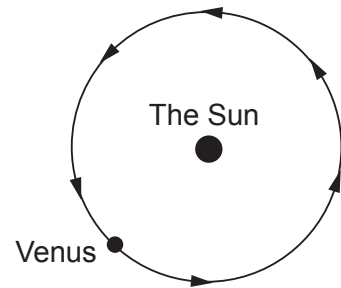
.....



- (b) (i) The planet Venus orbits the Sun.
Its orbit can be considered to be circular.

The distance between Venus and the Sun is 1.08×10^8 km.

Venus orbits the Sun once every 224.7 days.



Calculate the distance Venus travels in 1 day.
Give your answer in standard form.

[4]

.....

.....

.....

.....

.....

.....

.....

.....

.....

- (ii) The surface area of Venus is $460\,234\,320$ km².
The surface of Venus is wrinkled-volcanic, smooth-volcanic or **non**-volcanic.
The areas of these three different types of surface are in the ratio 7 : 1 : 2.

Wrinkled-volcanic : Smooth-volcanic : Non-volcanic = 7 : 1 : 2

Calculate the total surface area of Venus that **is** volcanic.
You must show all your working.

[3]

.....

.....

.....

.....

.....

.....

END OF PAPER



BLANK PAGE

**PLEASE DO NOT WRITE
ON THIS PAGE**



BLANK PAGE

**PLEASE DO NOT WRITE
ON THIS PAGE**

