

Answer all ELEVEN questions.

Write your answers in the spaces provided.

You must write down all the stages in your working.

1 The table shows information about 5 lakes in the Lake District.

Name	Surface area (m ²)	Volume (m ³)
Windermere	1.5×10^7	3.1×10^8
Ullswater	8.9×10^6	2.2×10^8
Thirlmere	3.3×10^6	5.0×10^7
Wastwater	2.9×10^6	1.1×10^8
Ennerdale Water	3.0×10^6	5.4×10^7

(a) Write 3.3×10^6 as an ordinary number.

(1)

Elter Water is another lake and has a volume of 500 000 m³

(b) Write 500 000 in standard form.

(1)

(c) Calculate the difference, in standard form, between Windermere's surface area and Wastwater's surface area.

(2)

Volume of water in Windermere = $k \times$ volume of water in Thirlmere

(d) Work out the value of k

(2)

The area of circle C is equal to the surface area of Ullswater.

(e) Find, in metres to 2 significant figures, the radius of C

(2)

$x = 4 \times 10^{6n}$ where n is an integer.

(f) Find, in standard form, an expression for x^{-2} in terms of n

(3)

.....

.....

.....

.....

DO NOT WRITE IN THIS AREA

DO NOT WRITE IN THIS AREA

DO NOT WRITE IN THIS AREA



Question 1 continued

DO NOT WRITE IN THIS AREA

DO NOT WRITE IN THIS AREA

DO NOT WRITE IN THIS AREA

Handwriting practice area with horizontal dotted lines.

(Total for Question 1 is 11 marks)



P 7 3 4 9 6 A 0 3 3 2

Question 2 continued

DO NOT WRITE IN THIS AREA

DO NOT WRITE IN THIS AREA

DO NOT WRITE IN THIS AREA

Area with horizontal dotted lines for writing.

(Total for Question 2 is 6 marks)



Question 5 continued

DO NOT WRITE IN THIS AREA

DO NOT WRITE IN THIS AREA

DO NOT WRITE IN THIS AREA

Area with horizontal dotted lines for writing.

(Total for Question 5 is 7 marks)



- 6 The table gives information about the time, in minutes, spent in a supermarket by 65 customers.

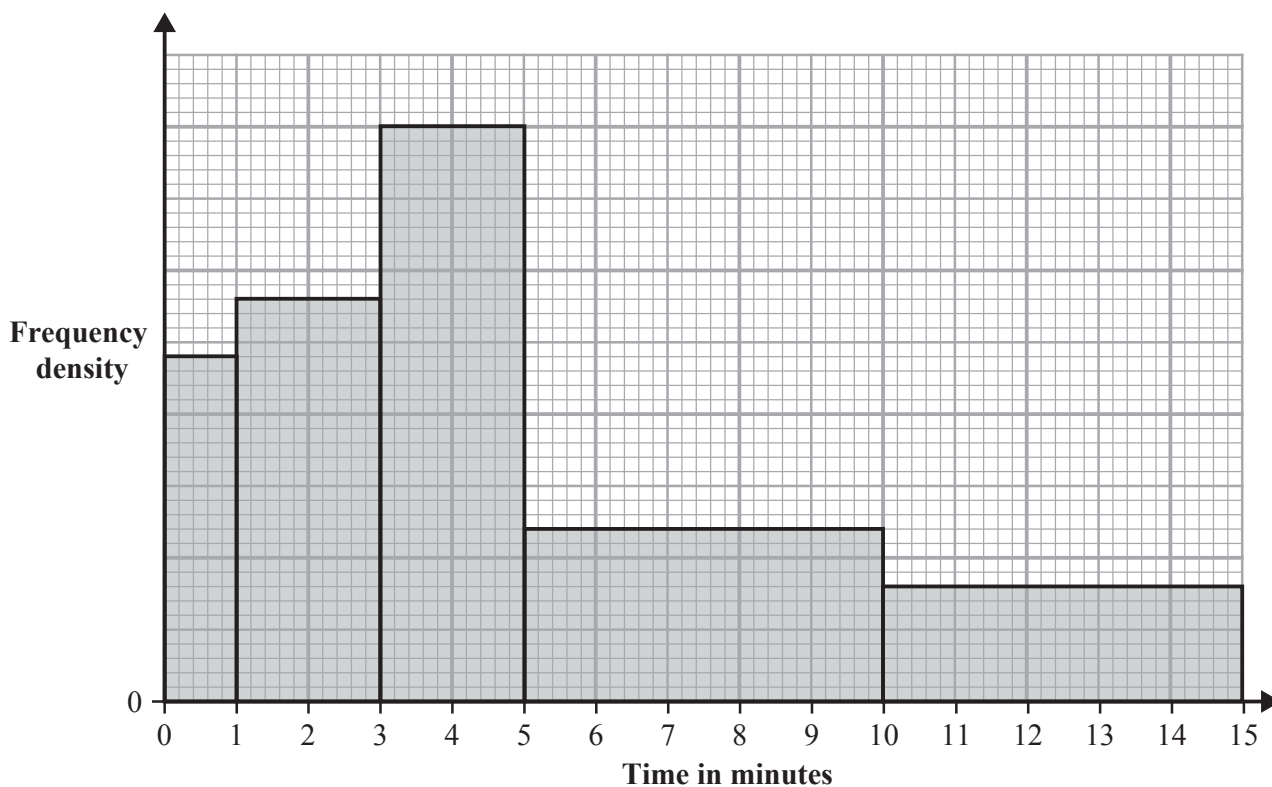
Time (t minutes)	Frequency
$0 < t \leq 15$	15
$15 < t \leq 25$	21
$25 < t \leq 30$	20
$30 < t \leq 40$	8
$40 < t \leq 60$	1

- (a) Write down the class interval that contains the median time. (1)
- (b) Calculate an estimate for the mean time spent by these 65 customers in the supermarket. Give your answer to one decimal place. (4)

One of the 65 customers is chosen at random.

- (c) Calculate the probability that the customer spent more than 30 minutes in the supermarket. (1)

The histogram below shows information about the time, in minutes, spent in the checkout queue for each of these 65 customers.



There were 15 customers who spent between 5 and 10 minutes in the queue.

- (d) Calculate the number of these 65 customers who spent more than 3 minutes in the queue. (3)



Question 6 continued

DO NOT WRITE IN THIS AREA

DO NOT WRITE IN THIS AREA

DO NOT WRITE IN THIS AREA

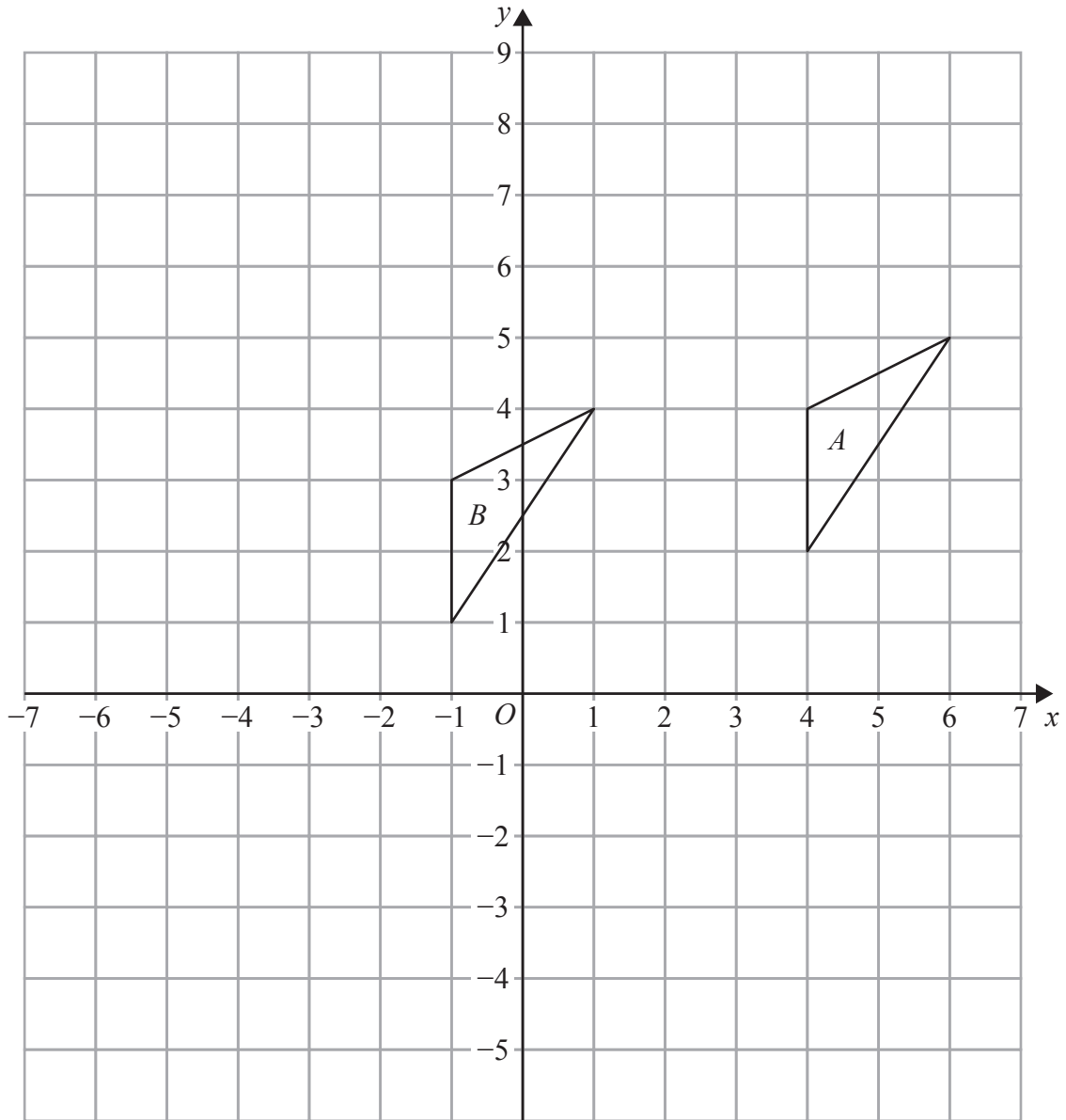
Handwriting practice area with 25 horizontal dotted lines.

(Total for Question 6 is 9 marks)



P 7 3 4 9 6 A 0 1 1 3 2

Question 7 continued



DO NOT WRITE IN THIS AREA

DO NOT WRITE IN THIS AREA

DO NOT WRITE IN THIS AREA

.....

.....

.....

.....

.....

.....

.....

.....

.....

.....

Turn over for a spare grid if you need to redraw your triangles.



Question 7 continued

Handwriting practice area consisting of 20 horizontal dotted lines.

DO NOT WRITE IN THIS AREA

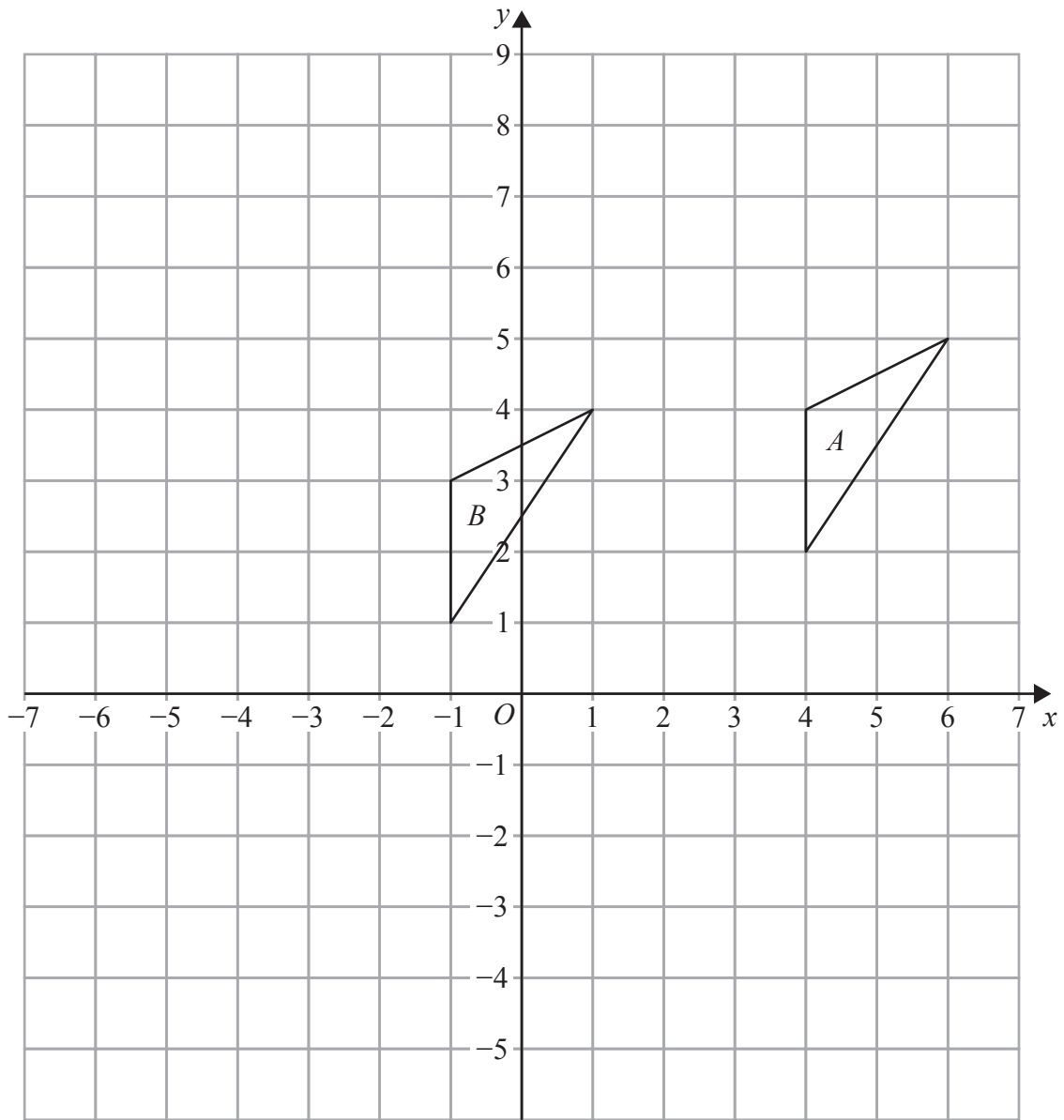
DO NOT WRITE IN THIS AREA

DO NOT WRITE IN THIS AREA



Question 7 continued

Only use this grid if you need to redraw your triangles.



DO NOT WRITE IN THIS AREA

DO NOT WRITE IN THIS AREA

DO NOT WRITE IN THIS AREA

.....

.....

.....

.....

.....

.....

.....

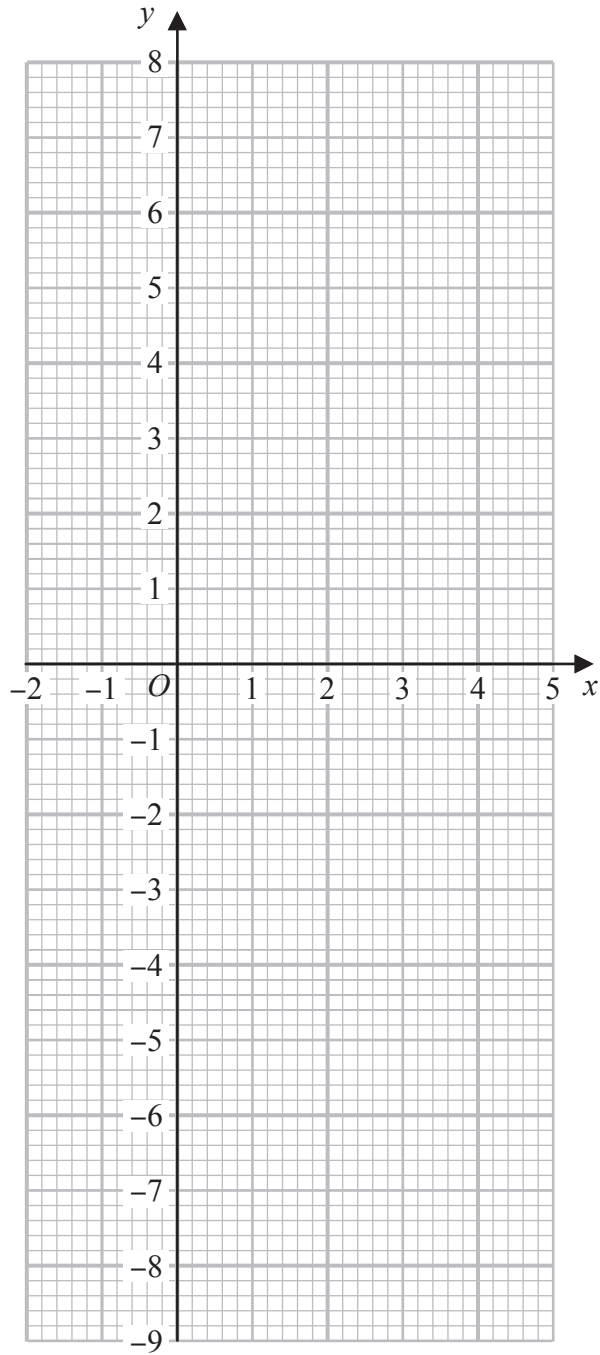
.....

.....

(Total for Question 7 is 11 marks)



Question 8 continued



DO NOT WRITE IN THIS AREA

DO NOT WRITE IN THIS AREA

DO NOT WRITE IN THIS AREA

.....

.....

.....

.....

.....

Turn over for a spare grid if you need to redraw your graph.



Question 8 continued

Handwriting practice area consisting of 25 horizontal dotted lines for writing.

DO NOT WRITE IN THIS AREA

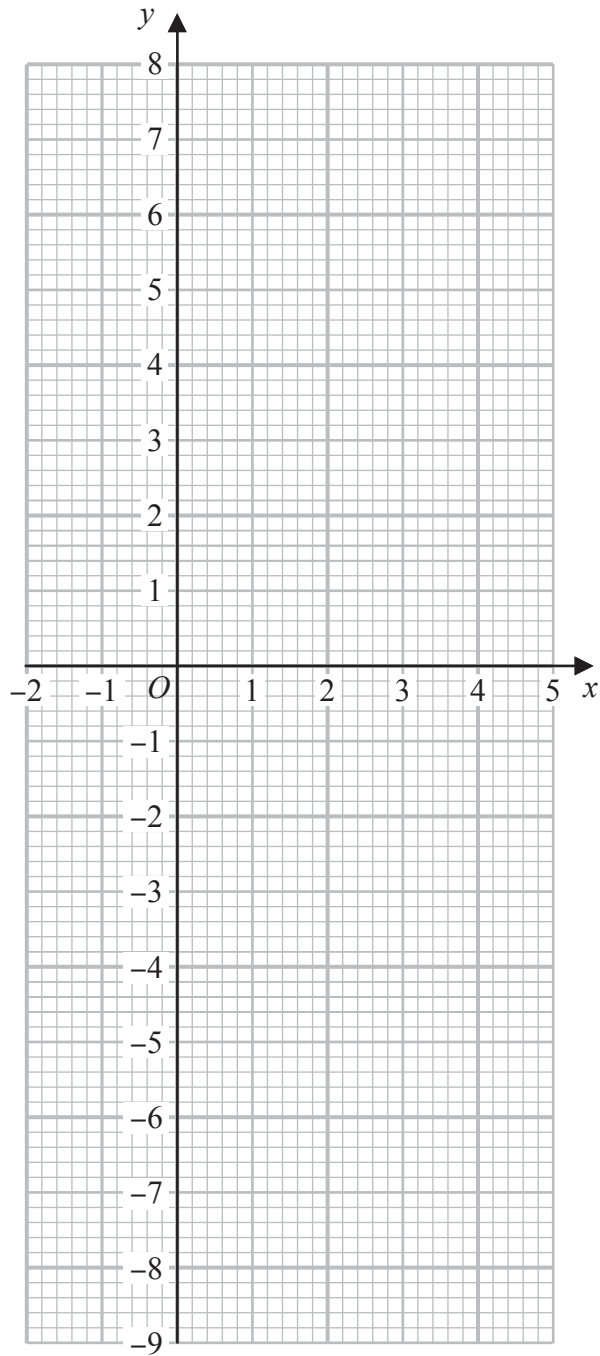
DO NOT WRITE IN THIS AREA

DO NOT WRITE IN THIS AREA



Question 8 continued

Only use this grid if you need to redraw your graph.



.....

.....

.....

.....

.....

(Total for Question 8 is 9 marks)

DO NOT WRITE IN THIS AREA

DO NOT WRITE IN THIS AREA

DO NOT WRITE IN THIS AREA



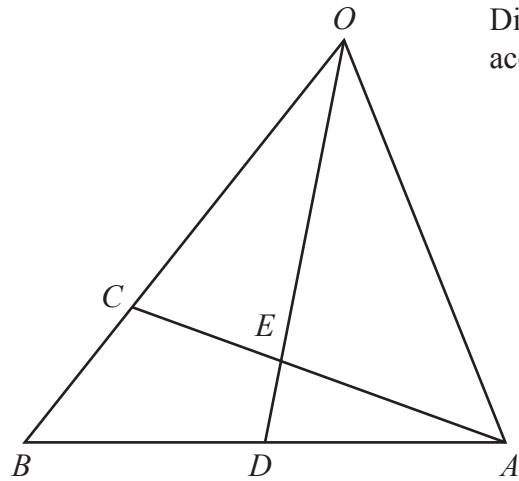


Diagram **NOT** accurately drawn

Figure 2

Figure 2 shows triangle OAB with $\vec{OA} = 4\mathbf{a}$ and $\vec{OB} = 3\mathbf{b}$

The point C lies on OB such that $\vec{OC} = 2\mathbf{b}$

The point D is the midpoint of AB

The point E lies on AC such that OED is a straight line.

(a) Find, in terms of \mathbf{a} and \mathbf{b} , simplifying your answer where possible,

(i) \vec{CA} (ii) \vec{AB} (iii) \vec{OD} (4)

Given that $CE = \lambda CA$

(b) use a vector method to find the value of λ (4)

The point P is such that $\vec{OP} = \mu\vec{OD}$ where $\mu > 1$ and \vec{AP} is parallel to \vec{OB}

Given that the area of triangle OCE is 8 cm^2

(c) find the area, in cm^2 , of triangle APE (4)

.....

.....

.....

.....

.....

.....

.....

DO NOT WRITE IN THIS AREA

DO NOT WRITE IN THIS AREA

DO NOT WRITE IN THIS AREA



Question 9 continued

DO NOT WRITE IN THIS AREA

DO NOT WRITE IN THIS AREA

DO NOT WRITE IN THIS AREA

Handwriting practice area with 25 horizontal dotted lines.



P 7 3 4 9 6 A 0 2 1 3 2

Question 9 continued

Handwriting practice area consisting of 25 horizontal dotted lines.

DO NOT WRITE IN THIS AREA

DO NOT WRITE IN THIS AREA

DO NOT WRITE IN THIS AREA



Question 9 continued

DO NOT WRITE IN THIS AREA

DO NOT WRITE IN THIS AREA

DO NOT WRITE IN THIS AREA

Area with horizontal dotted lines for writing.

(Total for Question 9 is 12 marks)



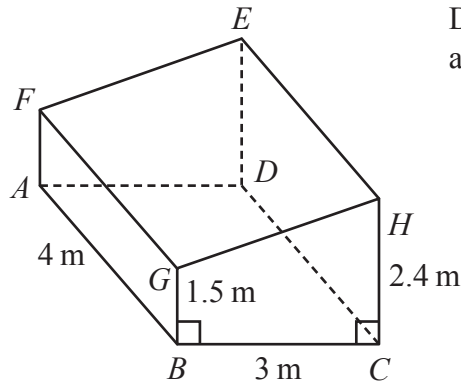


Diagram NOT accurately drawn

Figure 3

Figure 3 shows a solid right prism $ABCDEFGH$

The base of the prism, $ABCD$, is a rectangle and is horizontal.
Trapezium $BCHG$ is a cross section of the prism.

$$AB = 4 \text{ m} \quad BC = 3 \text{ m} \quad CH = 2.4 \text{ m} \quad GB = 1.5 \text{ m}$$

$$\angle GBC = \angle BCH = \angle ABG = \angle DCH = 90^\circ$$

- (a) Calculate the volume, in m^3 , of the prism. (2)
- (b) Calculate the angle of depression, in degrees to one decimal place, of G from E (3)
- (c) Calculate the length, in metres to 3 significant figures, of AH (2)

The point P lies on the line GH such that $GP = \frac{2}{3}GH$

The point Q lies on the line BC such that $BQ = \frac{2}{3}BC$

- (d) Calculate, in degrees to one decimal place, $\angle APQ$ (4)

.....

.....

.....

.....

.....

$$\left[\text{Area of trapezium} = \frac{1}{2}(a + b)h \right]$$

DO NOT WRITE IN THIS AREA

DO NOT WRITE IN THIS AREA

DO NOT WRITE IN THIS AREA



Question 10 continued

DO NOT WRITE IN THIS AREA

DO NOT WRITE IN THIS AREA

DO NOT WRITE IN THIS AREA

Handwriting practice area with 25 horizontal dotted lines.



Question 10 continued

Handwriting practice area consisting of 20 horizontal dotted lines.

DO NOT WRITE IN THIS AREA

DO NOT WRITE IN THIS AREA

DO NOT WRITE IN THIS AREA



Question 10 continued

DO NOT WRITE IN THIS AREA

DO NOT WRITE IN THIS AREA

DO NOT WRITE IN THIS AREA

Handwriting practice area with horizontal dotted lines.

(Total for Question 10 is 11 marks)



P 7 3 4 9 6 A 0 2 7 3 2

Question 11 continued

DO NOT WRITE IN THIS AREA

DO NOT WRITE IN THIS AREA

DO NOT WRITE IN THIS AREA

Handwriting practice area with 25 horizontal dotted lines.



Question 11 continued

Handwriting practice area consisting of 25 horizontal dotted lines.

DO NOT WRITE IN THIS AREA

DO NOT WRITE IN THIS AREA

DO NOT WRITE IN THIS AREA



Question 11 continued

DO NOT WRITE IN THIS AREA

DO NOT WRITE IN THIS AREA

DO NOT WRITE IN THIS AREA

Area with horizontal dotted lines for writing.

(Total for Question 11 is 14 marks)

TOTAL FOR PAPER IS 100 MARKS



DO NOT WRITE IN THIS AREA

DO NOT WRITE IN THIS AREA

DO NOT WRITE IN THIS AREA

BLANK PAGE

