



Oxford Cambridge and RSA

Monday 27 June 2022 – Afternoon

A Level Further Mathematics B (MEI)

Y436/01 Further Pure with Technology

Printed Answer Booklet

Time allowed: 1 hour 45 minutes



You must have:

- Question Paper Y436/01 (inside this document)
- the Formulae Booklet for Further Mathematics B (MEI)
- a computer with appropriate software
- a scientific or graphical calculator



Please write clearly in black ink. **Do not write in the barcodes.**

Centre number

| | | | | |
|--|--|--|--|--|
| | | | | |
|--|--|--|--|--|

Candidate number

| | | | |
|--|--|--|--|
| | | | |
|--|--|--|--|

First name(s)

Last name

INSTRUCTIONS

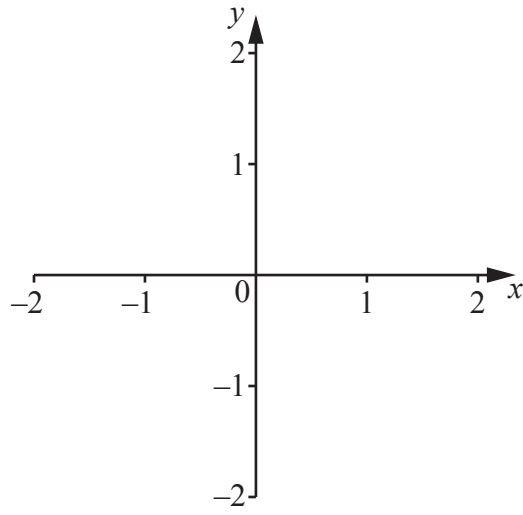
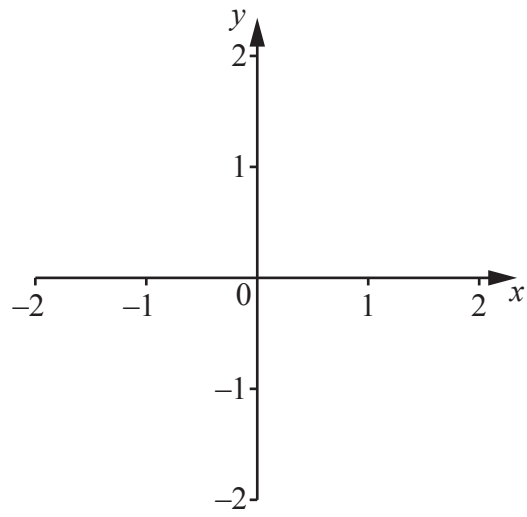
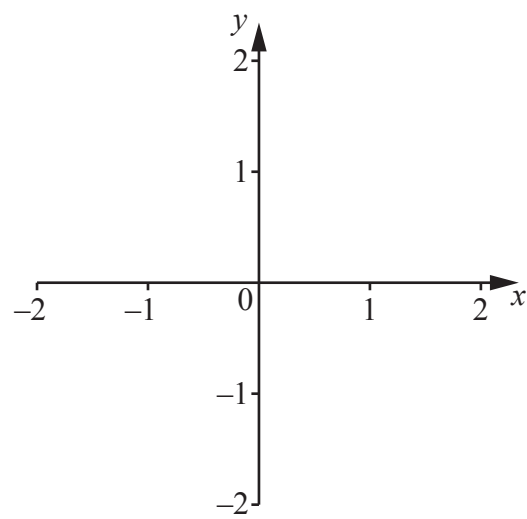
- Use black ink. You can use an HB pencil, but only for graphs and diagrams.
- Write your answer to each question in the space provided in the **Printed Answer Booklet**. If you need extra space use the lined pages at the end of the Printed Answer Booklet. The question numbers must be clearly shown.
- Answer **all** the questions.
- Where appropriate, your answer should be supported with working. Marks might be given for using a correct method, even if your answer is wrong.
- Give your final answers to a degree of accuracy that is appropriate to the context.

INFORMATION

- This document has **12** pages.

ADVICE

- Read each question carefully before you start your answer.

1(a)(i) $a = 0$  $a = 0.5$  $a = 2$ 

| | |
|------------------|--|
| 1(a)(ii) | |
| | |
| | |
| | |
| | |
| 1(a)(iii) | |
| | |
| | |
| | |
| | |
| | |
| | |
| | |
| | |
| | |
| | |
| | |
| 1(b)(i) | |
| | |
| | |
| | |
| | |
| | |
| | |
| | |
| | |
| | |
| | |
| | |
| | |
| | |
| | |

| | |
|-----------------|--|
| 1(b)(ii) | |
| | |
| | |
| | |
| | |
| | |
| | |
| | |
| | |
| | |
| | |
| | |
| | |
| | |
| | |

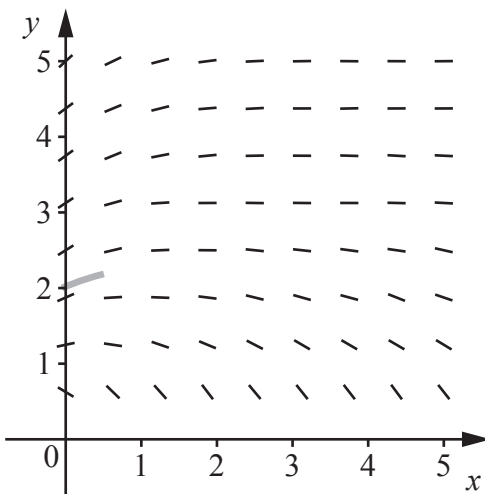
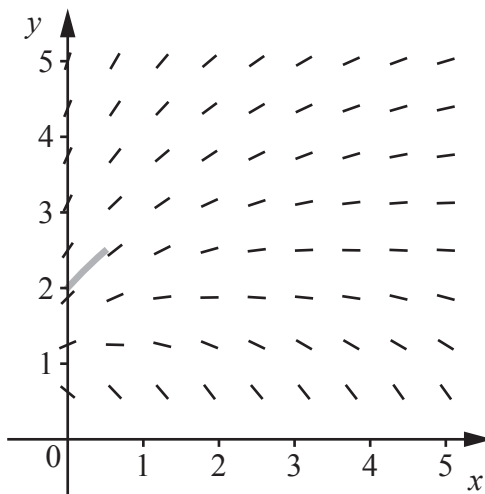
| | |
|-------------|--|
| 1(c) | |
| | |
| | |
| | |
| | |
| | |
| | |
| | |
| | |
| | |
| | |
| | |
| | |
| | |
| | |

(answer space continued on next page)

| | |
|------------------|--|
| 2(a)(i) | |
| | |
| | |
| 2(a)(ii) | |
| | |
| | |
| 2(a)(iii) | |
| | |
| | |
| | |
| 2(a)(iv) | |
| | |
| | |
| | |
| 2(a)(v) | |
| | |
| | |
| | |
| | |
| 2(a)(vi) | |
| | |
| | |
| | |
| | |
| | |
| | |
| | |
| | |
| | |
| | |
| | |
| | |

| | |
|----------------|--|
| 2(b)(i) | |
| | |
| | |
| | |
| | |
| | |
| | |
| | |

| | |
|-----------------|--|
| 2(b)(ii) | |
| | |
| | |
| | |
| | |
| | |
| | |
| | |
| | |
| | |
| | |
| | |
| | |
| | |
| | |
| | |
| | |
| | |
| | |
| | |
| | |
| | |
| | |

| | |
|-------------------------|--|
| <p>3(b)(i)</p> | |
| | |
| | |
| | |
| | |
| <p>3(b)(ii)</p> | |
| | |
| | |
| | |
| | |
| <p>3(b)(iii)</p> | <div style="display: flex; justify-content: space-around; align-items: flex-start;"> <div style="text-align: center;">  <p>Fig. 3.1</p> </div> <div style="text-align: center;">  <p>Fig. 3.2</p> </div> </div> |

| | |
|-----------------|-----------------|
| 3(b)(iv) | |
| | |
| | |
| | |
| | |
| 3(c)(i) | |
| | |
| | |
| | |
| | |
| | |
| | |
| | |
| | |
| | |
| | |
| | |
| | |
| | |
| | |
| | |
| | |
| | 3(c)(ii) |
| | |
| | |
| | |
| | |
| | |
| | |
| | |

| | |
|------------------|--|
| 3(c)(iii) | |
| | |
| | |
| | |
| | |
| | |
| | |
| | |
| | |
| | |
| | |
| | |
| | |
| | |
| | |
| | |
| | |
| | |
| | |
| | |
| | |
| | |
| | |
| | |
| | |
| | |
| | |
| | |
| | |
| | |
| | |

